

# SUMMATIVE ASSESSMENT

## MATHEMATICS

Term  
2


Time : 2 hrs

Marks :

60






Name : .....

Section : .....



### I. Choose the correct answer.

5

- A Square has \_\_\_\_\_ sides.  
a) 3                      b) 4                      c) 6                      d) 8
- A triangle has \_\_\_\_\_ corners.  
a) 3                      b) 4                      c) 6                      d) 8
- Among 50, 40, 18, 71 the smallest number is \_\_\_\_\_ .  
a) 71                      b) 50                      c) 40                      d) 18
- Among 62, 45, 75, 52 the biggest number is \_\_\_\_\_ .  
a) 45                      b) 75                      c) 62                      d) 52
- The shadow of  is \_\_\_\_\_ .  
a)                       b)                       c)                       d) 



### II. Fill in the blanks.

5

- The smallest two digit number is \_\_\_\_\_.
- The biggest two digit number is \_\_\_\_\_
- $85 =$  \_\_\_\_\_ five.
- The number of slanting lines in the alphabet "A" are \_\_\_\_\_.
- $\Delta \nabla \Delta \nabla$  \_\_\_\_\_








### III. Write True or False.

5

- Circle has 3 sides. \_\_\_\_\_
- Opposite sides of rectangle are equal. \_\_\_\_\_
- The number of slanting lines in the alphabet H are 2. \_\_\_\_\_
- A triangle is a closed curve. \_\_\_\_\_
- The greatest two digit number is 89. \_\_\_\_\_


**IV. Match the following.**

5

	Shapes	Name of the shapes.
1		Rectangle
2		Triangle
3		Square
4		Star
5		Circle


**V. Tick (✓) the lines found in the alphabets and numerals.**

5

Alphabets and Numerals	Horizontal line	Vertical Line	Slanting Line	Curved Line
A				
C				
H				
5				
7				


**VI. Circle the biggest number.**

3

1) 41	79	19	48
2) 62	54	76	67
3) 75	57	63	36


**VII. Box the smallest number.**

3

1) 35	43	17	29
2) 59	51	15	57
3) 91	19	96	69





**VIII. Write the following numbers in ascending and descending orders.**

4

	94,	81,	90,	70,	69
Ascending Order					
Descending Order					



**IX. Write the number names for the numbers in the sports T-shirts.**

6
















**X. Add the numbers.**

6

	T	O
	5	4
+		7

	T	O
	7	8
+	1	5

	T	O
	8	6
		5
+	1	0

**XI.** Subtract the following two digit numbers.

6

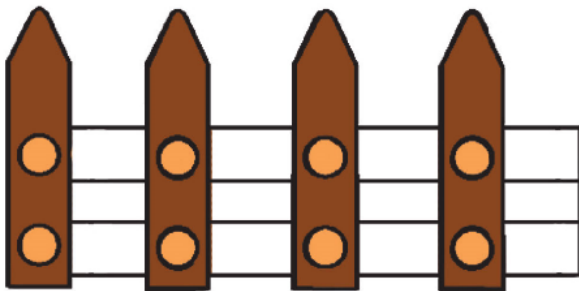
T	O
9	2
6	6

T	O
6	3
5	6

T	O
8	0
5	2

**XII.** Observe and complete the following pattern.

3



**XIII.** Fill in the empty boxes given below.

4

