

10th std SOCIAL SCIENCE

CONCEPTUAL STUDY MATERIAL - TEST YOUR KNOWLEDGE

Dear Students,

I have prepared these MCQ, Time line and Map question with answer for board exam practise. Kindly make use of this study material.

Aim of the MCQs

The main goal of this study material is to make students well versed with the subject oriented concepts and to make a quick and rapid glance over the text related concepts.

Advantages of these MCQs are as follows

- ❖ Conceptual clarity understandings about the topic
- ❖ Having inter related understandings that makes study more comfortable
- ❖ Division of syllabus in micro level time bound targets and chapter wise targets that helps in time management thereby increasing your confidence

Advisory note :

- ✓ Keep faith in yourself and work hard to attain success
- ✓ Remember 3 D's = Discipline, Dedication and Determination

Wishing you All the Best for your "future endeavors"

**S. MOHANASUNDARAM,
P.G. Asst. ECONOMICS,
RANIPET DISTRICT,
Cell : 9486938878**

R.B.M. Hr. Sec. School

SET - I

Chapter - 1, 2 and 3

Part - I

Total Marks: 42

I. Choose the correct answer:

14 x 1 = 14

1. What is the battle of marine remembered for _____ warfare.
(a) Air (b) trench (c) submarine (d) ship
2. Who said imperialism is the highest stage of capitalism?
(a) Lenin (b) Marx (c) Sun yat-Sen (d) Mao tse tung
3. First secretary general of league of nation belong _____ country.
(a) Britain (b) France (c) Dutch (d) USA
4. Which country was expelled from the League of Nations for attacking Finland?
(a) Germany (b) Russia (c) Italy (d) France
5. Lateran treaty signed by _____.
(a) Mussolini and pope (b) Hitler and president (c) Lenin and Trotsky (d) Holhi minh
6. Who is the American president follower Good neighbour policy?
(a) Roosevelt (b) Truman (c) Woodrow Wilson (d) Eisner howler
7. "Dollar Imperialism" protested _____ continent.
(a) Latin America (b) Asia (c) Europe (d) Africa
8. Who initiated the formation of League of Nations?
(a) Roosevelt (b) Chamberlain (c) Woodrow Wilson (d) Baldwin
9. U.S. drops its first atomic bomb _____.
(a) Kawasaki (b) Hiroshima (c) Hiroshima (d) Nagasaki
10. England signed munches Part with _____.
(a) Chamberlain (b) Winston Churchill (c) Lloyd George (d) Stanley Baldwin
11. Who is present U.N. Secretary-General?
(a) Ban-Ki-Moon (b) Kofi Annan (c) Boutros-Ghali (d) Antonia Guterres
12. IMF managing director present _____.
(a) Crystalline Georgieva (b) Christine Lagarde (c) Rodrigo rato (d) Brain Christensen
13. Which not popular uprising masses of women workers demanding during Russian Revolution?
(a) Bread for workers (b) Come out (c) Come in (d) Stop work

S. MOHANASUNDARAM, P.G. Asst. in Economics, Ranipet District.

14. (i) German attacked Verdun.
(ii) The famous industrial areas of French.
(iii) Four month battle of Verdun.
(iv) Two million men took part half of them were killed.
(a). (i) and (ii) are correct (b). (i) and (iii) are correct (c). (ii) and (iii) wrong
(d). (i) only correct

Part - II

II. Fill in the blanks:

5 x 1 = 5

1. Japan entered into an alliance with England in the year _____.
2. The Nazi party's propaganda was led by _____.
3. Hitler attacked _____ which was a demilitarized Zone.
4. London was bombed mercilessly an action known as _____.
5. The first Prime Minister _____ belongs to the South Africa.

Part - III

III. Match the following:

5 x 1 = 5

- | | | |
|--------------------------|---|------------|
| (i) Emden | - | Stalingrad |
| (ii) Malteotti | - | Himmler |
| (iii) Volga | - | Truth |
| (iv) Secret State Police | - | Madras |
| (v) Pravda | - | Italy |

Part - IV

IV. 5 x 1 = 5

Draw a timeline and write any five important events between (1910 to 1920).

Part - V

V. 5 x 1 = 5

On the outline map of world mark the following:

- (i) Great Britain (ii) Turkey (iii) Hiroshima (iv) Moscow (v) Germany

Part - VI

VI. 8 x 1 = 8

On the outline map of India mark the following:

a.)

- (i) Karakorum (ii) River Ganga (iii) Rail route Chennai to Kolkata (iv) Direction of wind

S. MOHANASUNDARAM, P.G. Asst. in Economics, Ranipet District.

Sea to Land (v) Cotton producing area (vii) Great Nicobar
(viii) Areas of laterite soil

(OR)

b.)


On the outline map of Tamil Nadu mark the following:

(i) Gulf of Mannar (ii) Mention the area producing steel and power loom (iii) Mention anyone International Airports (iv) Chambarabakkam lake (v) Areas of produce rubber
(vi) Rameswaram (vii) Anaimalai (viii) karaikal

www.Padasalai.Net

S. MOHANASUNDARAM, P.G. Asst. in Economics, Ranipet District.

Draw a timeline and write any five important events between 1910 to 1920.

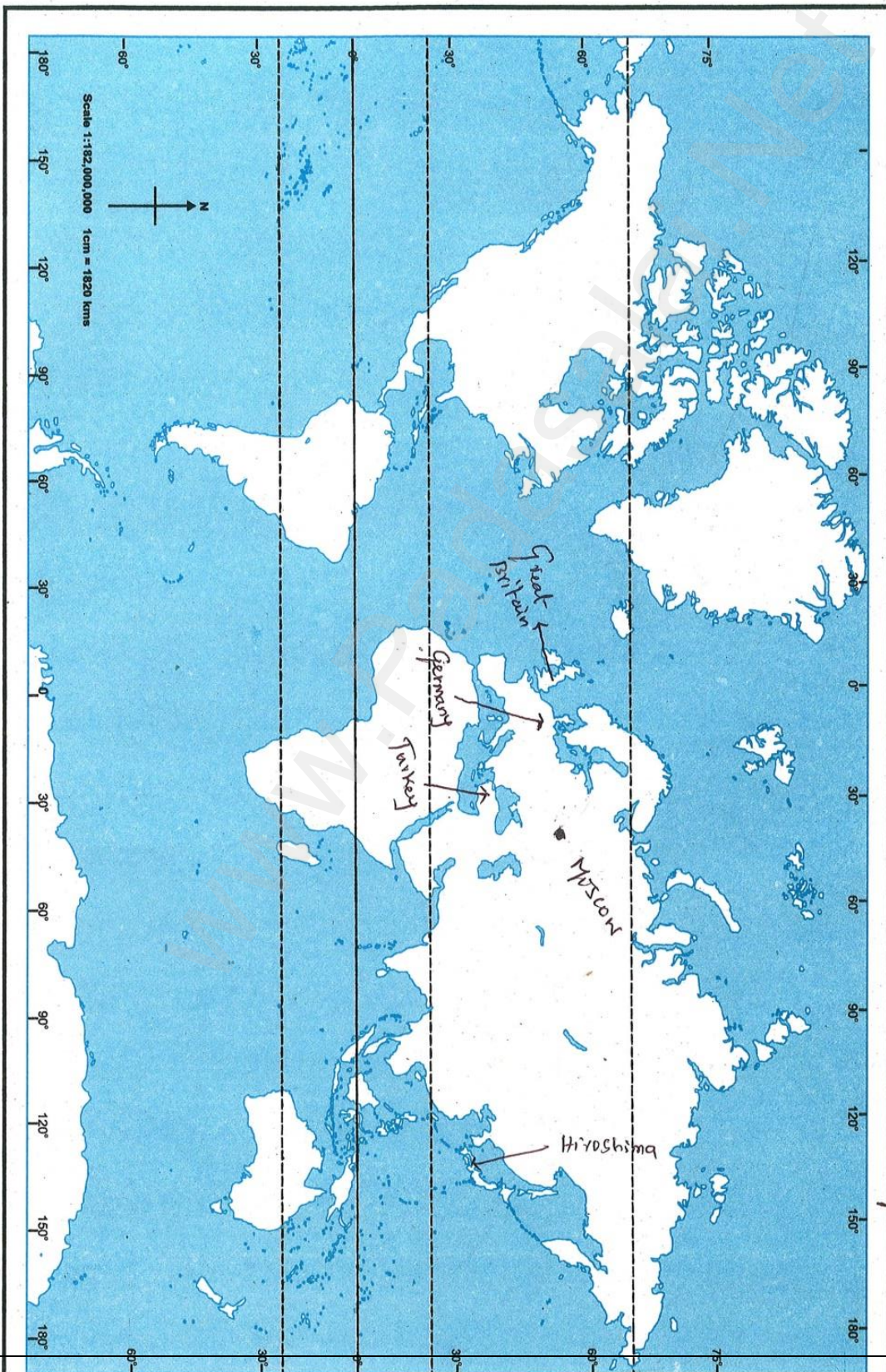


S. MOHANASUNDARAM, P.G. Asst. in Economics, Ranipet District.

WORLD - OUTLINE

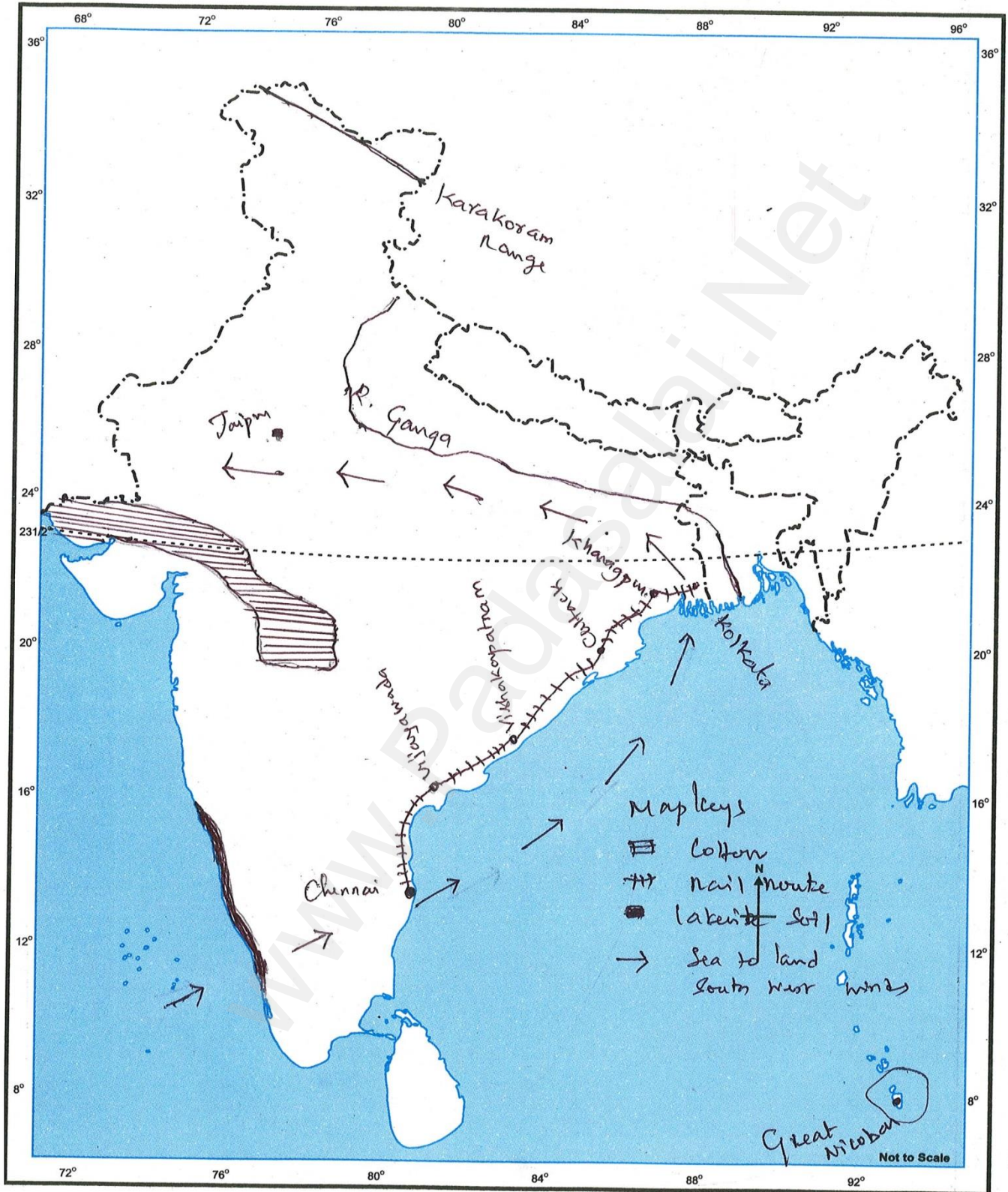
Name : *Sat-1*
Class : *X* Sec : *Henry Roll No.:*
School : *World Map*

strict.



Name : Setri Geography
Class : x Sec : Roll No.:
School :

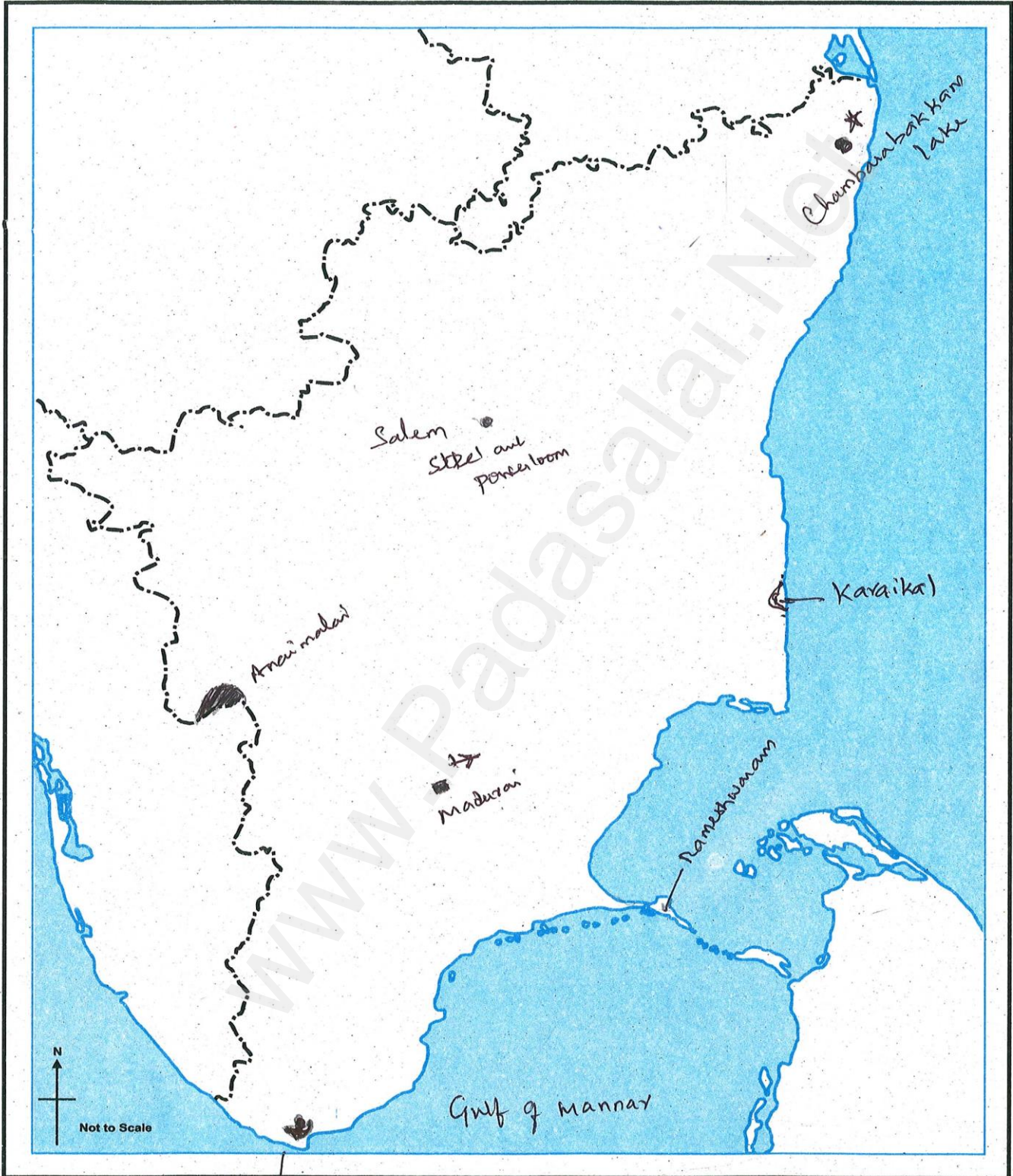
INDIA - OUTLINE



FOR SCHOOL USE ONLY.

Name : Set-1 Geography
Class : x Sec : Roll No.:
School :

TAMILNADU - OUTLINE



Rubber producing area FOR SCHOOL USE ONLY.

R.B.M. Hr. Sec. School

SET - II

Chapter - 4, 5 and 6

Part - I

Total Marks: 42

I. Choose the correct answer:

14 x 1 = 14

1. The policy of containment of communism _____ American president.
(a) Woodrow Wilson (b) Truman (c) Theodore Roosevelt (d) Franklin Roosevelt
2. When was North and South Vietnam united?
(a) 1975 (b) 1976 (c) 1973 (d) 1974
3. When was the Warsaw pact dissolved?
(a) 1979 (b) 1989 (c) 1990 (d) 1991
4. Sati abolished _____ year.
(a) 1827 (b) 1829 (c) 1826 (d) 1927
5. Dayanand Saraswati founded _____ samaj.
(a) Arya (b) Brahmo (c) Prarthana (d) Adi brahmo
6. Who was the founder of namdhari movement?
(a) Baba Dayal Das (b) Baba Ram Singh (c) Guru nanak (d) Jyotiba Phule
7. Widow remarriage association founded by _____.
(a) M.G. Ranade (b) Devendranath Tagore (c) Jyotiba Phule (d) Ayyan Kali
8. Who was the author of the book Satyarthha Prakash?
(a) Dayananda Saraswati (b) Iyothee Thassar (c) Annie besant (d) Swami Shradanatha
9. East India company's policy of territorial aggrandizement resist _____ palayakkarars
(a) Marudhu brothers (b) Pulithevar (c) velunachiyar (d) Veera pandiya Kattabomman
10. Where was Shiva Subramanianar executed?
(a) kayathar (b) Negalapuram (c) Virupachi (d) Panchalamkurichi
11. Who issued the Tiruchirappalli proclamation of independence?
(a) Marudhu brothers (b) Pulithevar (c) Veera pandiya Kattabomman (d) Gopal Nayak
12. When did the vellore revolt break out?
(a) 24 May 1805 (b) 10 July 1805 (c) 10 July 1806 (d) 10 September 1806
13. Ondiveeran led one of the army units of _____.
(a) Pulithevar (b) Velunachiyar (c) Veera pandiya kattabomman (d) Marudhu brothers

S. MOHANASUNDARAM, P.G. Asst. in Economics, Ranipet District.

14. Kuyili a faithful friend of _____.

(a) Pulithevar (b) Marudhu brothers (c) Gopal Nayak (d) Velunachiyar

Part - II

II. Fill in the blanks:

5 x 1 = 5

1. Gulumgir was written by _____.
2. Rama Krishna mission was established by _____.
3. Pandithar Iyothar Thassar started a weekly journal _____.
4. Dheeran Chinnamalai built a Fort and fought the British without leaving _____ place.
5. Swadeshi movement following the partition Bengal were inspired _____.

Part - III

III. Match the following:

5 x 1 = 5

- | | | |
|------------------|---|------------------|
| 1. South Korea | - | Adi Brama Samaj |
| 2. Debendranath | - | Colonel Mekerras |
| 3. Gopal Nayak | - | Bannerman |
| 4. 23rd Regiment | - | Syngman Rhee |
| 5. Ramalinganar | - | Dindigul |

Part - IV

IV.

5 x 1 = 5

Timeline mention any five Important events from 1920-1930.

Part - V

V. On the outline World map mark the following:

5 x 1 = 5

(i) Nagasaki (ii) Sanfransico (iii) Denmark (iv) Poland (v) Italy

Part - VI

VI. On the outline map of India mark the following:

8 x 1 = 8

(a)

- (i) Ladakh (ii) Direction of Wind land to sea (iii) Alluvial soil ganga plain (iv) Malwa plateau (v) Electronic Captial of India (vi) any one Iron and Steel Industries (vii) National Highway N.H. 44 (viii) Sea route Cochin to Chennai

(OR)

S. MOHANASUNDARAM, P.G. Asst. in Economics, Ranipet District.

(b)

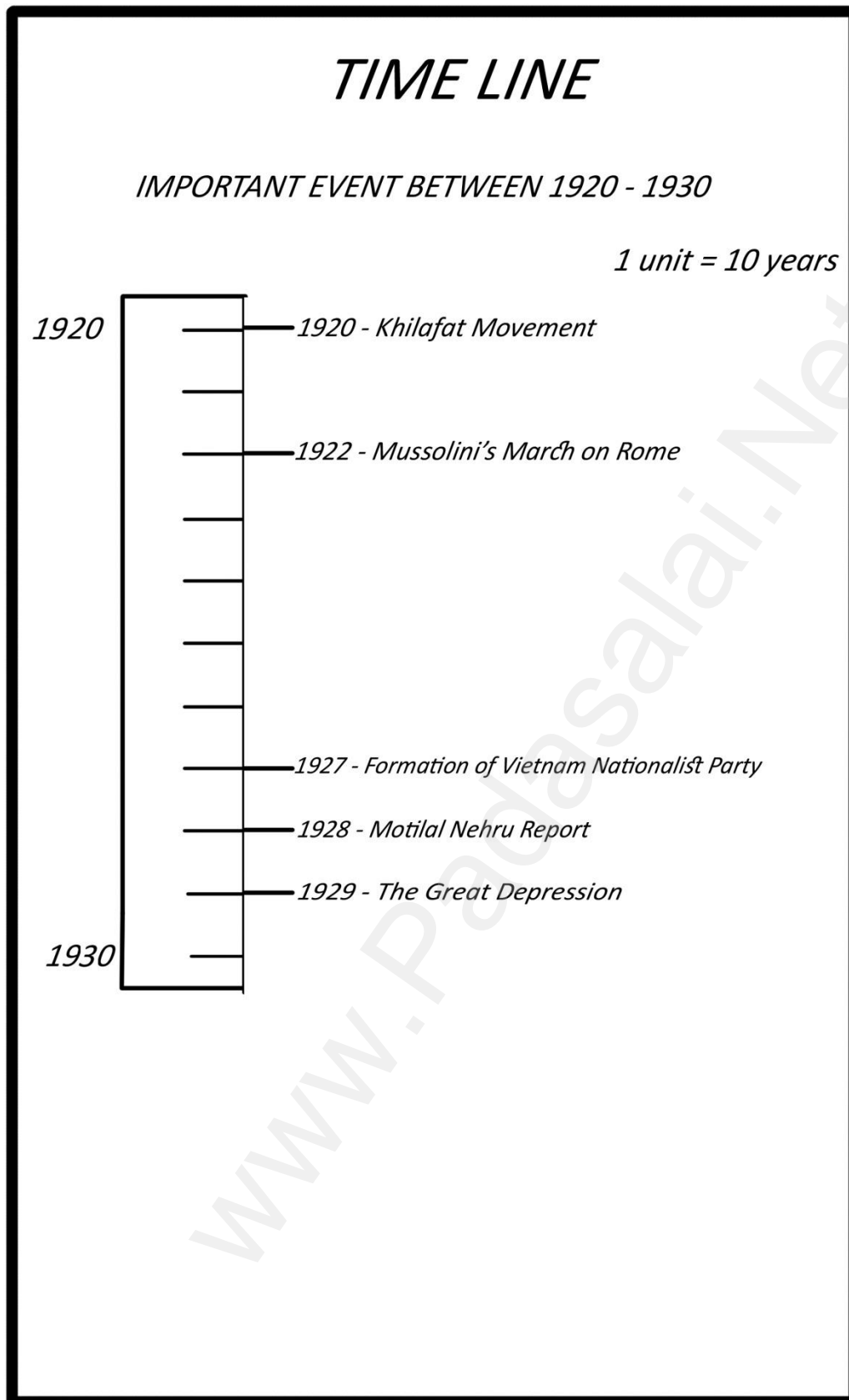
(i) Palk Bay (ii) Roadways Chennai to Kanya Kumari (iii) Nilgiri Hills (iv) Coastal Alluvial soil (v) Kalpakkam nuclear centre (vi) Granery of South India (vii) River Bhavani and Dam on it (viii) Mention the areas of paddy growing

www.Padasalai.Net

S. MOHANASUNDARAM, P.G. Asst. in Economics, Ranipet District.

Kindly send me your questions and answerkeys to us : Padasalai.Net@gmail.com

Timeline mention any five important events between 1920-2930



S. MOHANASUNDARAM, P.G. Asst. in Economics, Ranipet District.

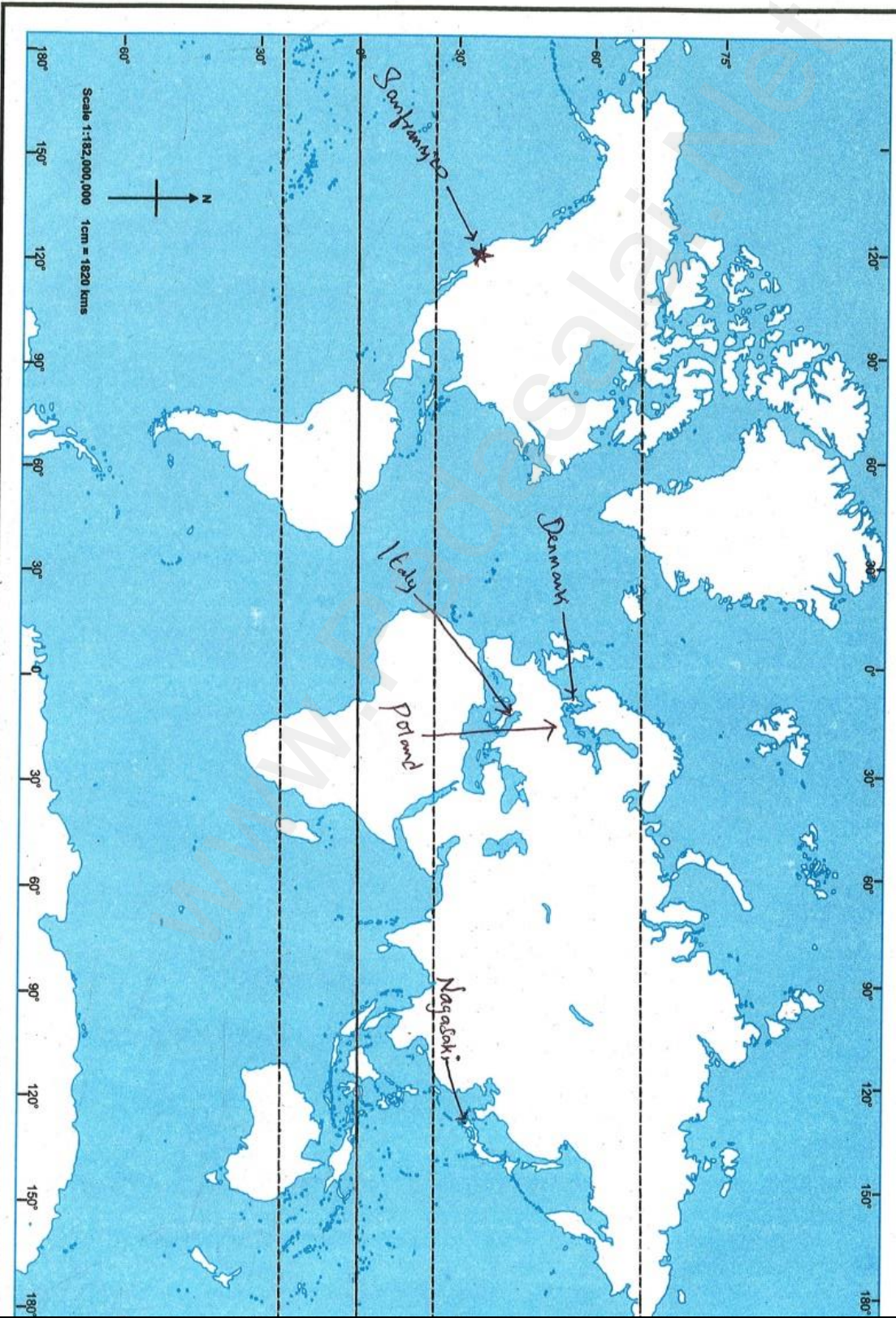
WORLD - OUTLINE

Class : _____
School : _____

Sec : _____

Roll No.: _____

riect.

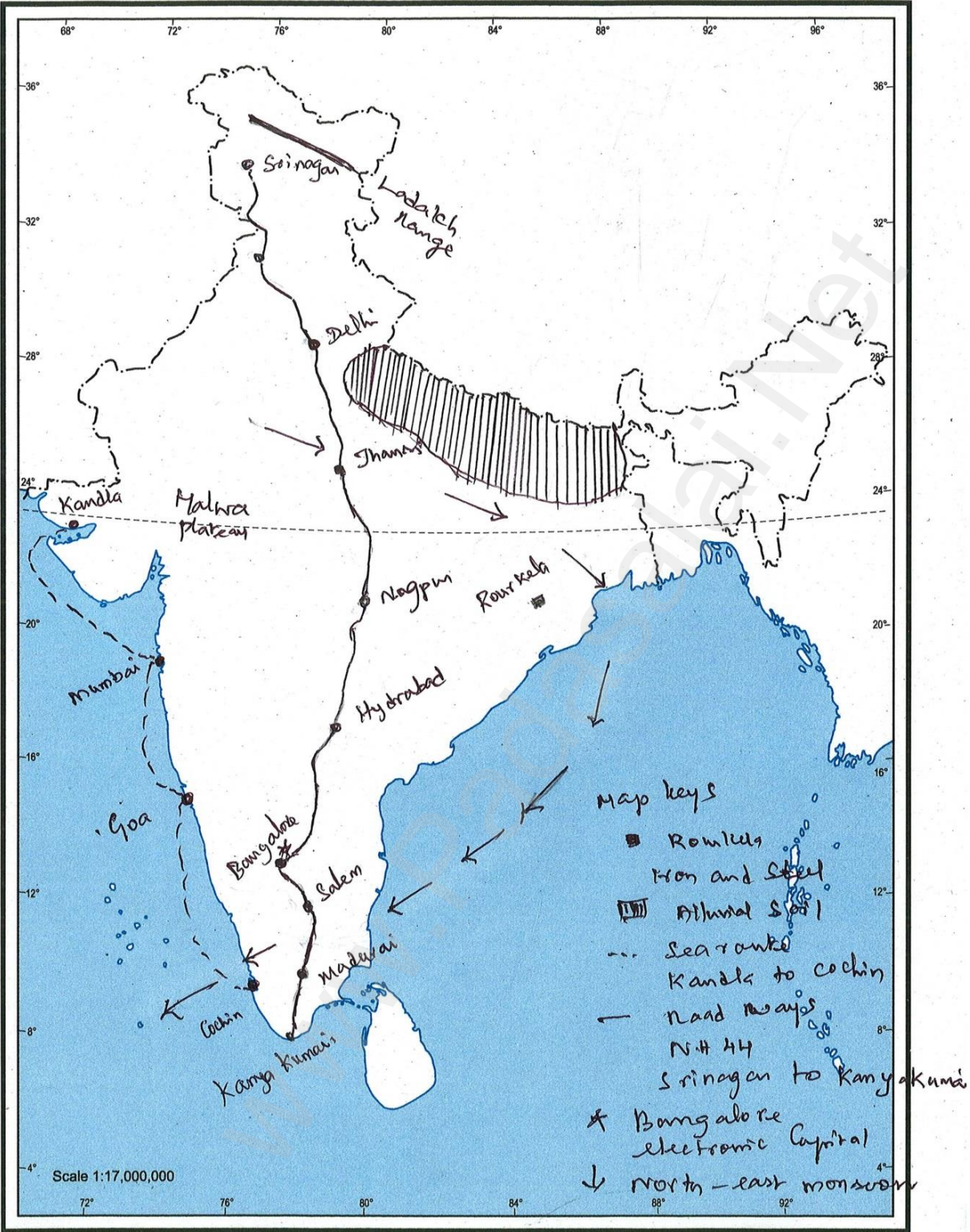


FOR SCHOOL USE ONLY.



INDIA - OUTLINE

NAME Set-2 Geography
 CLASS : _____
 ROLL NO. : _____



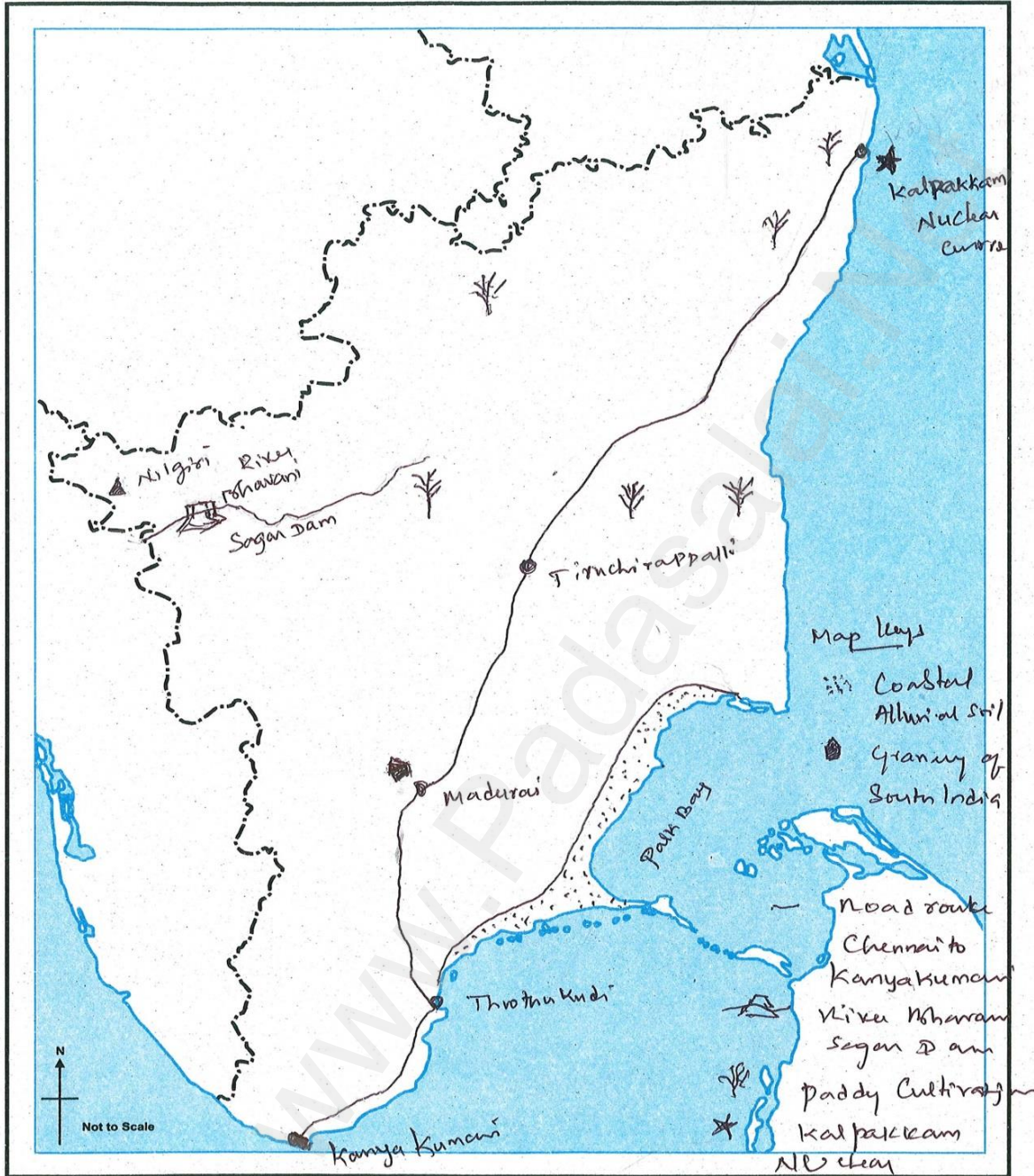
© Government of India Copyright 2013
 The national waters of India extend into the sea to a distance of twelve nautical miles measured from the appropriate base line.
 The external boundaries and co-ordinates of India agree with the RecordMaster Copy certified by Survey of India.

Published By : **ESHA PUBLICATION SIVAKASI**

S. MOHANASUNDARAM, P.G. Asst. in Economics, Ranipet District.

Name : Set.2 Geography
Class : x Sec : Roll No.:
School : Sri Sri Sivanu Tamil Nadu

TAMILNADU - OUTLINE



FOR SCHOOL USE ONLY.

S. MOHANASUNDARAM, P.G. Asst. in Economics, Ranipet District.

R.B.M. Hr. Sec. School

SET - III

Chapter - 7, 8, 9 and 10

Part - I

Total Marks: 42

I. CHOOSE THE CORRECT ANSWER:

14 x 1 = 14

1. when did the partition of Bengal come into effect?

- a) 19 June 1905 b) 18 July 1906
c) 19 Aug 1907 d) 16 oct 1905

2. what was the context in which the Chota-nagpur Tenance Act was passed?

- a) kol Revolt b) Indigo Revolt
c) Munda Rebellion d) Deccan riots

3. who set up the first home rule league in April 1916?

- a) Annie Besant b) Bipin Chandra pal
c) Lala Lajpat rai d) Tilak

4. who was arrested during the anti-rowlate protests in amritsar?

- a) Motilal Nehru b) Saifuddin kitchlew
c) Mohamed Ali d) Rajkumar shkula

5. Non - co-operation approved congress _____ session

- a) Bombay b) Madras
c) calcutta d) Nagpur

6. provisional autonomy introduced _____ Act

- a) 1858 b) Indian council Act 1909
c) Government of India Act 1919 d) Government of India Act 1935

7. Third session of the Indian national congress held _____

- a) Tamil Nadu b) Karnataka
c) West Bengal d) Maharashtra

8. Who was the first president of the madras mahajana sabha?

- a) T. M. Nair b) P. Rangaiah
c) G. Subramaniam d) G. A. Natesan

9. Who said this " Better Bullock carts and freedom than a train delux with subjection"?

S. MOHANASUNDARAM, P.G. Asst. in Economics, Ranipet District.

a) Annie Beasant b) M. Veeraghavachari

c) B.P.Wadia d) G.S Arundale

10.who among the following were Swarajists?

a) Motilal Nehru b) chitranjan das

c) S.satyamurthi d) All the above

11. Udayavanam satyagraha camp related_____

a) T. prakasam b) K.Nageswara Rao

c) Madras d) All the above

12. India's first organized trade union, the Madras labour union _____

a) 1918 b) 1917

c) 1916 d) 1914

13. who become first woman legislations in India in 1926?

a) Nilambikai b) Muvalur ramamirtham

c) Muthulakshmi Ammaiyar d) Sivakami

14. In which session of Indian national congress declared complete Independence as its goal?

a) calcutta b) Nagpur

c) Madras d) Mumbai

Part - II

II. FILL IN THE BLANKS:

5 x 1 = 5

1. chota nagpur Act was passed in which year _____.

2. Gandhi regarded _____ as his political guru.

3. First Indian judge of the madras high court_____.

4. The name Suriyanarayana sastri was founded by_____.

5. The College of Fort St. George was founded by _____.

Part - III

III. MATCH THE FOLLOWING:

5 x 1 = 5

1. Bombay - Third session

2. Calcutta - first session

3. Nagpur - poorna swaraj

S. MOHANASUNDARAM, P.G. Asst. in Economics, Ranipet District.

4. Labour - Non- cooperation

5. Madras - second session

Part - IV

IV. **5 x 1 = 5**

Draw Time line any five important events from 1930-1940.

Part- V

V. On the outline map of India mark the following: **5 x 1 = 5**

a) Lucknow b) Jhansi c) Meerut d) Lahore e) Jallian walabagh

Part - VI

VI. On the outline map of India mark the following: **8 x 1 = 8**

a.)

(i) Mountain forest (ii) Hirakud dam (iii) Mumbai high (iv) Aravalli (v) Areas of receiving Heavy rainfall
(vi) Cherrapunji (vii) Deccan Plateau (viii) Air route Delhi to port bihar

(OR)


b.)

(i) Palk strait (ii) Mention the areas of coffee growing (iii) Poondi sathya murthy sugar lake
(iv) Mention any one major sea ports (v) Rail route from Chennai to kanya kumari
(vi) Area of deltaic alluvial soil (vii) Wild life sanctuary any one (viii) Palani hills

TIME LINE

IMPORTANT EVENT BETWEEN 1930 - 1940

1 unit = 10 years



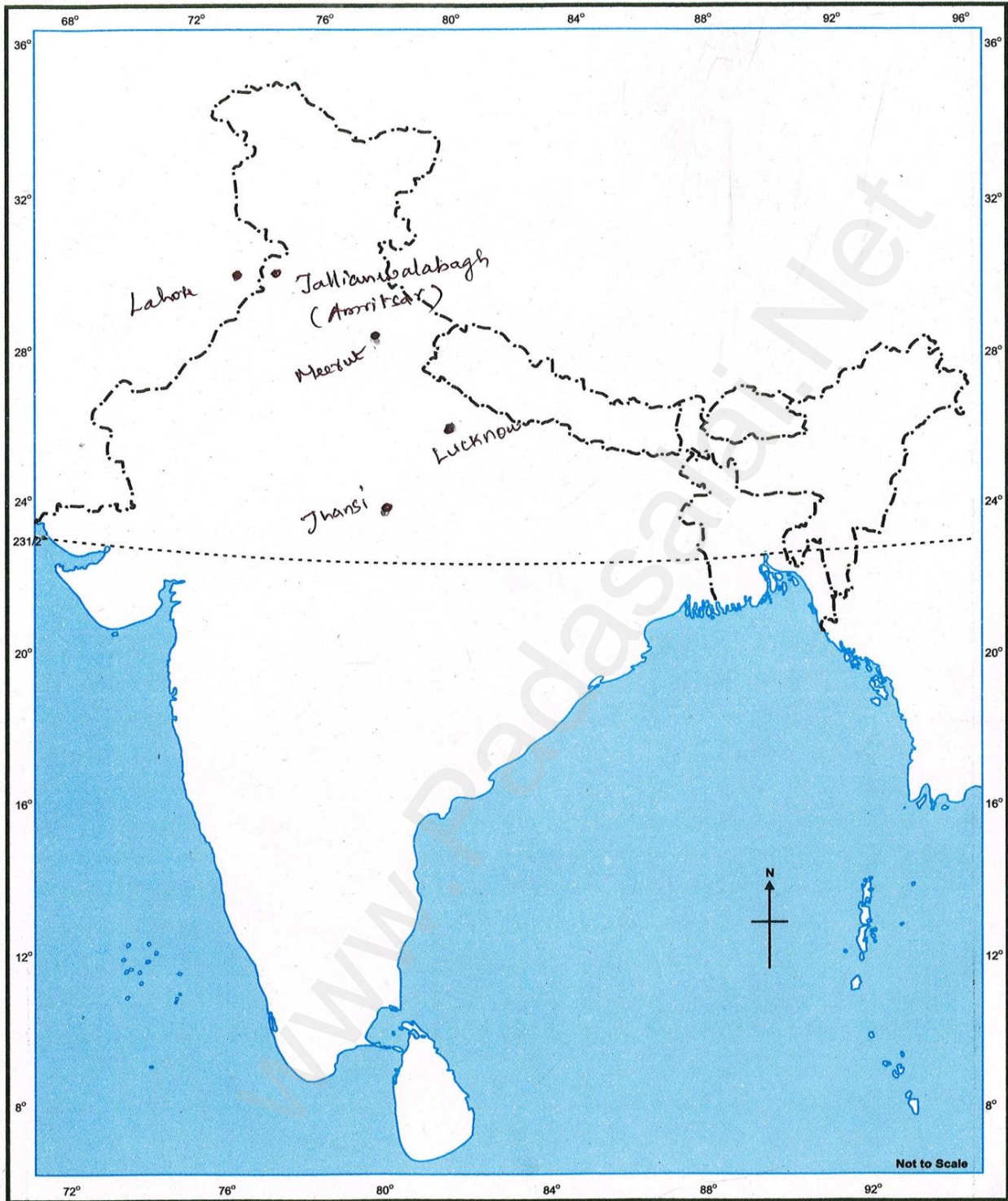
S. MOHANASUNDARAM, P.G. Asst. in Economics, Ranipet District.

Name : Sat 3 History

Class : Sec : Roll No.:

School : x Social Science

INDIA - OUTLINE



FOR SCHOOL USE ONLY.

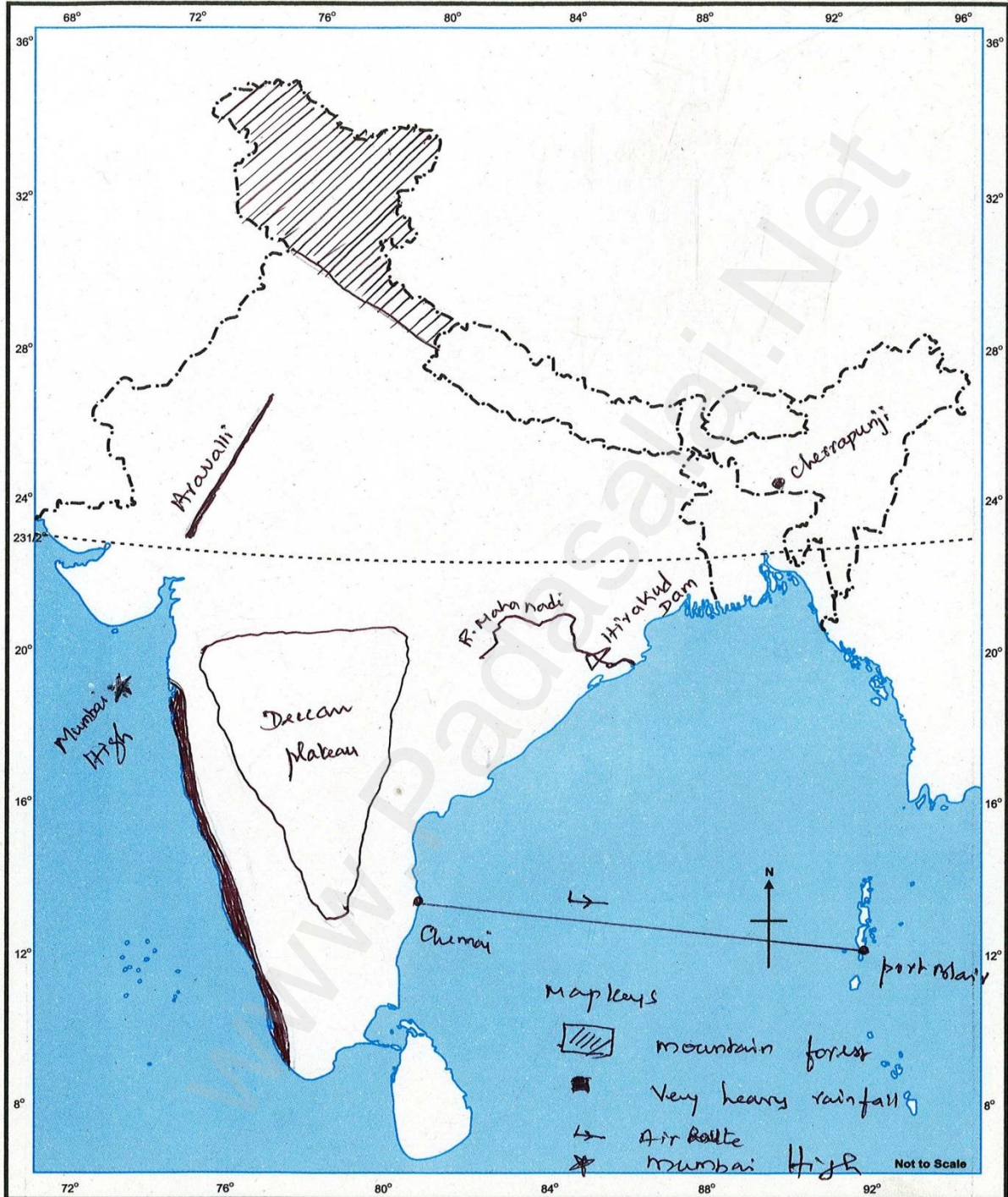
S. MOHANASUNDARAM, P.G. Asst. in Economics, Ranipet District.

INDIA - OUTLINE

Name : Set-2 Geography

Class : Sec: Roll No.:

School : S Social Science



FOR SCHOOL USE ONLY.

S. MOHANASUNDARAM, P.G. Asst. in Economics, Ranipet District.

TAMILNADU - OUTLINE

Name : Set-3 Geography Tamilnadu
Class : Sec: Roll No.:
School : X Social Science

