

10th std SOCIAL SCIENCE

CONCEPTUAL STUDY MATERIAL - TEST YOUR KNOWLEDGE

Dear Students,

I have prepared these MCQ, Time line and Map question with answer for hoard exam practise. Kindly make use of this study material.

Aim of the MCQs

The main goal of this study material is to make students well versed with the subject oriented concepts and to make a quick and rapid glance over the text related concepts.

Advantages of these MCQs are as follows

- ❖ **Conceptual clarity understandings about the topic.**
- ❖ **Having interred related understandings that make study more comfortable.**
- ❖ **Division of syllabus in micro level time hound targets and chapter wise targets that helps in time management thereby increasing your confidence**

Advisory note:

- ❖ **Keep faith in yourself and work hard to attain success**
- ❖ **Remember 3 D's = Discipline, Dedication and Determination**

Wishing you ALL the Best for your 'future endeavours''

**S. MOIIANASUNDARAM, P.G. Asst. ECONOMICS, RANIPET
DISTRICT, Cell: 9486938878**

S. MOHANASUNDARAM, P.G. Asst. in Economics, Ranipet District.

SOCIAL SCIENCE

SET- IV

Chapter 1 and 2

Part I

Total Marks:42

I. Choose the correct answer:

14 x 1 = 14

- Western disturbances cause _____.
a) rainfall b) punjab
c) winter wheat d) all the above
- _____ river is known as "sorrow of Bihar".
a) Narmada b) Godavari
c) Kosi d) Damodar
- The highest peak in India is _____.
a) Mt K2 b) Mt Everest
c) kanchenjunga d) Dhaulagiri
- In India _____ state do not have international border.
a) punjab b) west bengal
c) himachal pradesh d) chattisgarh
- Andaman from Nicobar group separates _____ degree channel.
a) seven b) eight
c) ten d) five
- Palk strait and Gulf of Mannar separates India from _____.
a) goa b) west bengal
c) sri lanka d) maldives
- Sesahachalam hills, a biosphere reserve is situated in _____.
a) Tamilnadu b) Andhara pradesh
c) Madhya pradesh d) Karnataka
- World network biosphere reserve of UNESCO _____.
a) Nilgiri b) Agasthiya malai
c) Great Nicobar d) Kachch
- Climate of India is labelled as _____ climate.
a) Tropical humid b) equatorial
c) tropical monsoon d) temperate

S. MOHANASUNDARAM, P.G. Asst. in Economics, Ranipet District.

10. The monsoon forests are otherwise called as _____ forest.

- a) Tropical b) deciduous
c) Mangrove d) mountain

11. Winter season in India sun falls _____.

- a) Vertical rays b) parallel
c) Slanting rays d) all the above

12. The older alluviums _____.

- a) less fertile b) bhangar
c) Great plain d) all the above

13. Pulicat lake situated _____.

- a) east coast b) andhra pradesh
c) tamil nadu d) all the above

14. Peak Anaimudi _____.

- a) highest peak b) south India
c) Anaimalai d) all the above

Part II

II. Fill in the blanks:

5 x 1 = 5

1. The term "Himalaya" is derived from _____.
2. The Himalayas holds _____ highest peak in the world.
3. The western part of the Central Highland is known as _____.
4. Bikanar place situated _____ state.
5. Kanjanjunga biosphere reserve _____ state.

Part III

III. Match the following:

5 x 1 = 5

Sea Coast

State

1. Konkan - Kerala
2. Kanara - Tamil Nadu
3. Northern circar - Maharashtra
4. Coromandal - Karnataka
5. Malabar - Odisha

S. MOHANASUNDARAM, P.G. Asst. in Economics, Ranipet District.

Part IV

IV.

5 x 1 = 5

Draw timeline for any five events from (1940- 1950).

Part V

V. On the outline map of World mark the following:

5 x 1 = 5

(i) France (ii) Greece (iii) China (iv) Tokyo (v) Pacific ocean

Part VI

VI. On the outline map of India mark the following:

8 x 1 = 8

a)

- (i) Zaskar Range
- (ii) Mention any one lake
- (iii) Thorn forest Rajasthan
- (iv) Black soil Central India
- (v) Jute cultivation regions
- (vi) Mention air route Chennai to Delhi
- (vii) Road route to Chennai to Delhi
- (viii) R. Cauvery dam on it.

(OR)

b)

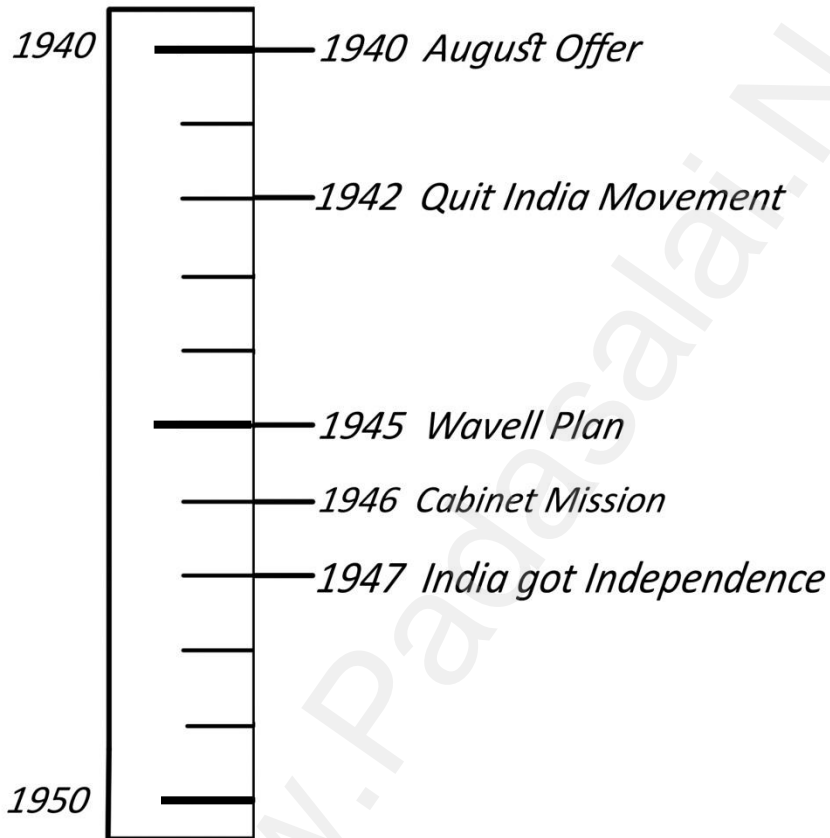
- (i) Indian Ocean
- (ii) Agastya malai Biosphere reserve
- (iii) Pulicat Lake
- (iv) Manchester of south India
- (v) Air route Chennai to Madurai
- (vi) R. Tamirabarani
- (vii) Mention the areas of Red soil
- (viii) Mention the areas of Cotton producing.

S. MOHANASUNDARAM, P.G. Asst. in Economics, Ranipet District.

TIME LINE

IMPORTANT EVENT BETWEEN 1940 - 1950

1 unit = 10 years



S. MOHANASUNDARAM, P.G. Asst. in Economics, Ranipet District.

WORLD - OUTLINE

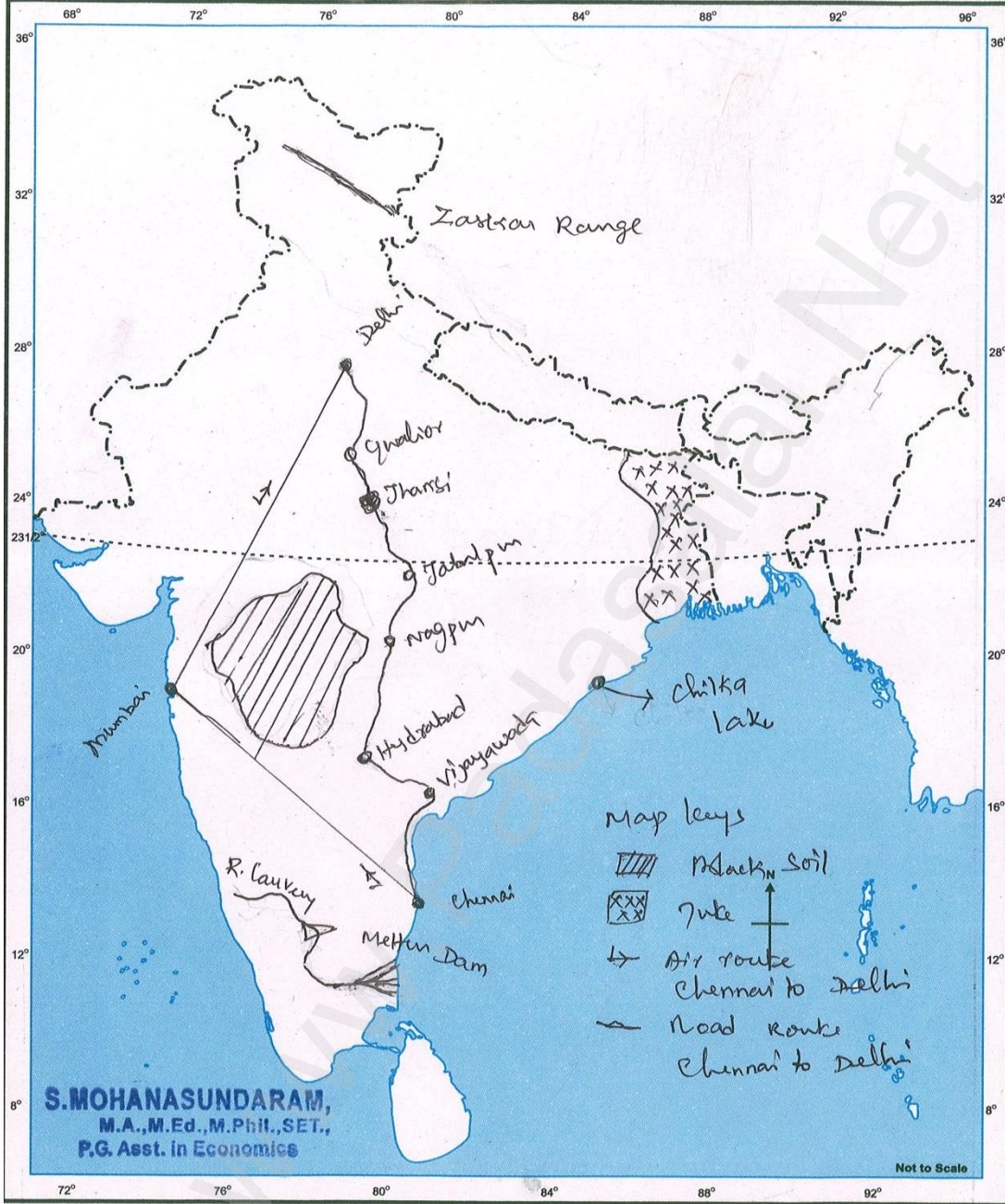
Name : Selva Sec : Geography
Class : 8 School : Sri Siva Subramanian
Roll No. :



S. MOHANASUNDARAM, P.G. Asst. in Economics, Ranipet District.

INDIA - OUTLINE

Name : Set A Geography
Class : X Sec : Roll No.:
School : Social Science Insia

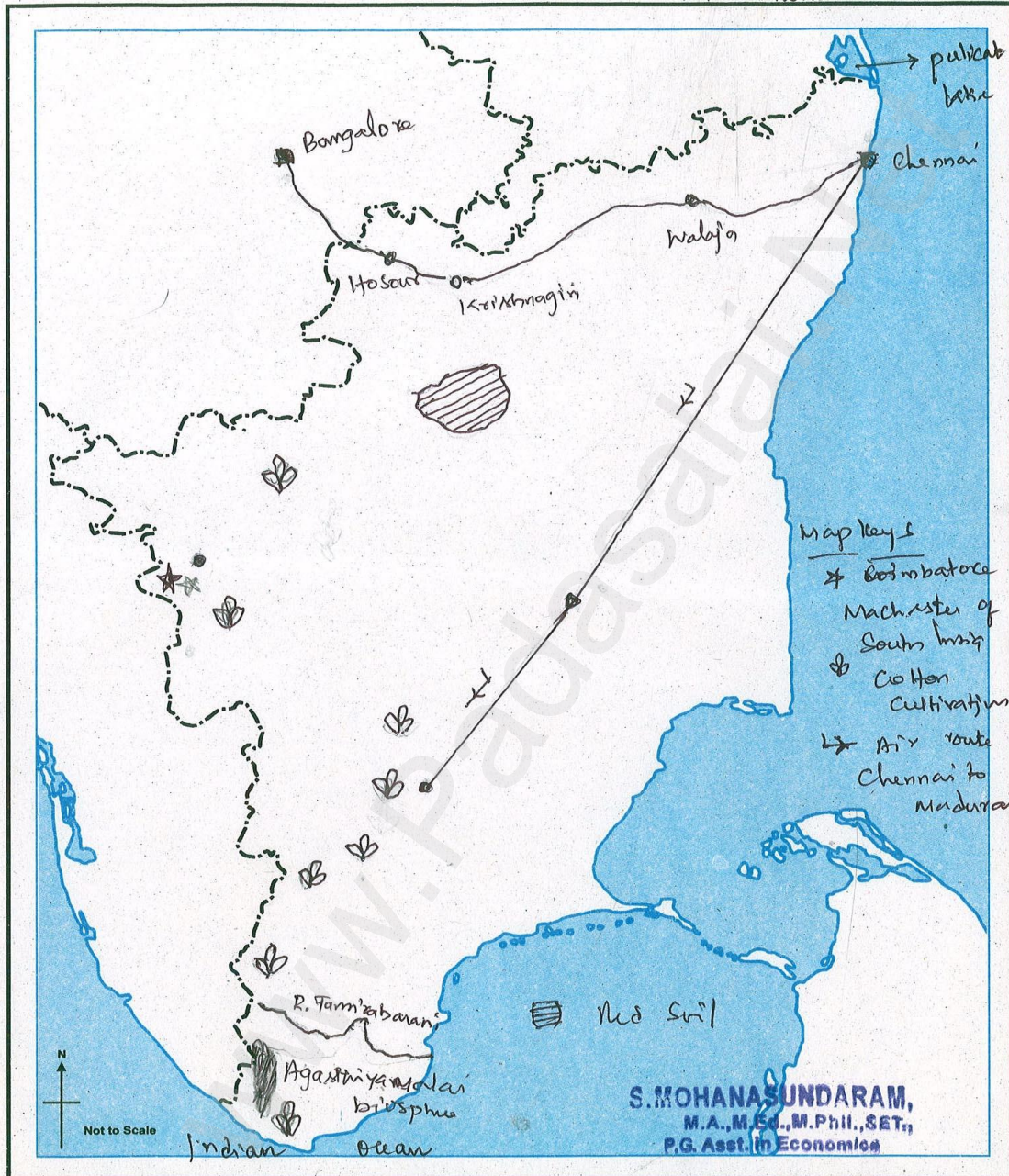


FOR SCHOOL USE ONLY.

S. MOHANASUNDARAM, P.G. Asst. in Economics, Ranipet District.

Name : Set. 4 Geography Tamilnadu
Class : X Sec: Roll No.:
School : Social Science

TAMILNADU - OUTLINE



FOR SCHOOL USE ONLY.

SOCIAL SCIENCE

S. MOHANASUNDARAM, P.G. Asst. in Economics, Ranipet District.

SET- V

Chapter 3, 4 and 5

Part I

Total Marks:42

I. Choose the correct answer:

14 x 1 = 14

1. The soil which is rich in Iron oxide is _____.
a) Alluvial b) Black
c) Red d) Alkaline
2. The longest dam in the world is _____.
a) Mettur dam b) Kosi dam
c) Hirakud dam d) Bhakra-Nangal dam
3. "Golden Fibre" is _____ crop.
a) cotton b) wheat
c) jute d) tobacco
4. Pradhan mantri krishi sinchayee yojana (PMKSY) implemented _____.
a) agriculture b) more production
c) water saving d) all the above
5. Assertion (A): Alluvial soil is formed by the deposition of rivers.
Reason (R): Paddy and wheat are grown well in the soil.
a) Both (A) and (R) are true and (R) explain (A)
b) Both (A) and (R) are true and (R) not explain (A)
c) (A) is correct (R) is false
d) (A) is false (R) is true
6. Manchester of India is _____.
a) mumbai b) patna
c) coimbatore d) hydrabed
7. The first nuclear power station is _____.
a) Tarapur b) mumbai
c) maharashtra d) all the above
8. National Highways Authority of India (NHAI) is _____ body.
a) constitutional b) statutory
c) autonomus d) private

S. MOHANASUNDARAM, P.G. Asst. in Economics, Ranipet District.

9. The cheapest means of transport _____.
- a) water ways b) road ways
c) rail ways d) airways
10. The costlier and most modern transport _____ ways.
- a) air b) water
c) road d) railway
11. Why is air travel preferred in the north-eastern states?
- a) Massive river b) dense forest
c) International frontiers d) all the above
12. Make in India program _____.
- a) made in India b) major hub for global design
c) manufacturing d) all the above
13. Urbanised state wise Tamil Nadu _____.
- a) first b) third
c) second d) fourth
14. Detroit of Asia is _____.
- a) Chennai b) Bangalore
c) Mumbai d) Kolkata

Part II

II. Fill in the blanks:

5 x 1 = 5

1. India's largest oil seeds producing state _____.
2. vizhinjam produce _____ energy resources.
3. The 2011 census represents the _____ census of India.
4. Universal mode of transport is _____.
5. North-eastern railway headquarters _____.

Part III

III. Match the following:

5 x 1 = 5

1. Burnpur - Karnataka
2. Bhadravati - Jharkhand
3. Rourkela - West Bengal
4. Bhillai - Odisha
5. Bokaro - Chattisgarh

S. MOHANASUNDARAM, P.G. Asst. in Economics, Ranipet District.

Part IV

IV. **5 x 1 = 5**

Draw a time line any five important events from 1910-1920.

Part V

V. On the outline map of world mark the following: **5 x 1 = 5**

(i) Morocco (ii) Serbia (iii) Bulgaria (iv) Hawaii Island (v) Japan

Part VI

VI. On the outline map of India mark the following: **8 x 1 = 8**

a)

- (i) River Sutlej dam on it
- (ii) Mention the areas of Rubber cultivation
- (iii) Desert soils North-west
- (iv) Mention any one ship building industry
- (v) Gulf of cambay
- (vi) Rann of kutch
- (vii) Sundarbans
- (viii) Rail route Chennai to Delhi.

(OR)

b)

- (i) Nagapatinam
- (ii) any one boundaries of Tamil Nadu
- (iii) mention of areas of Black soil
- (iv) any one Bird sanctuary
- (v) regions of High density population
- (vi) sugarcane producing regions
- (vii) Direction of north-east monsoon winds
- (viii) Javadi and Elagiri hills.

S. MOHANASUNDARAM, P.G. Asst. in Economics, Ranipet District.

TIME LINE

IMPORTANT EVENT BETWEEN 1910-1920

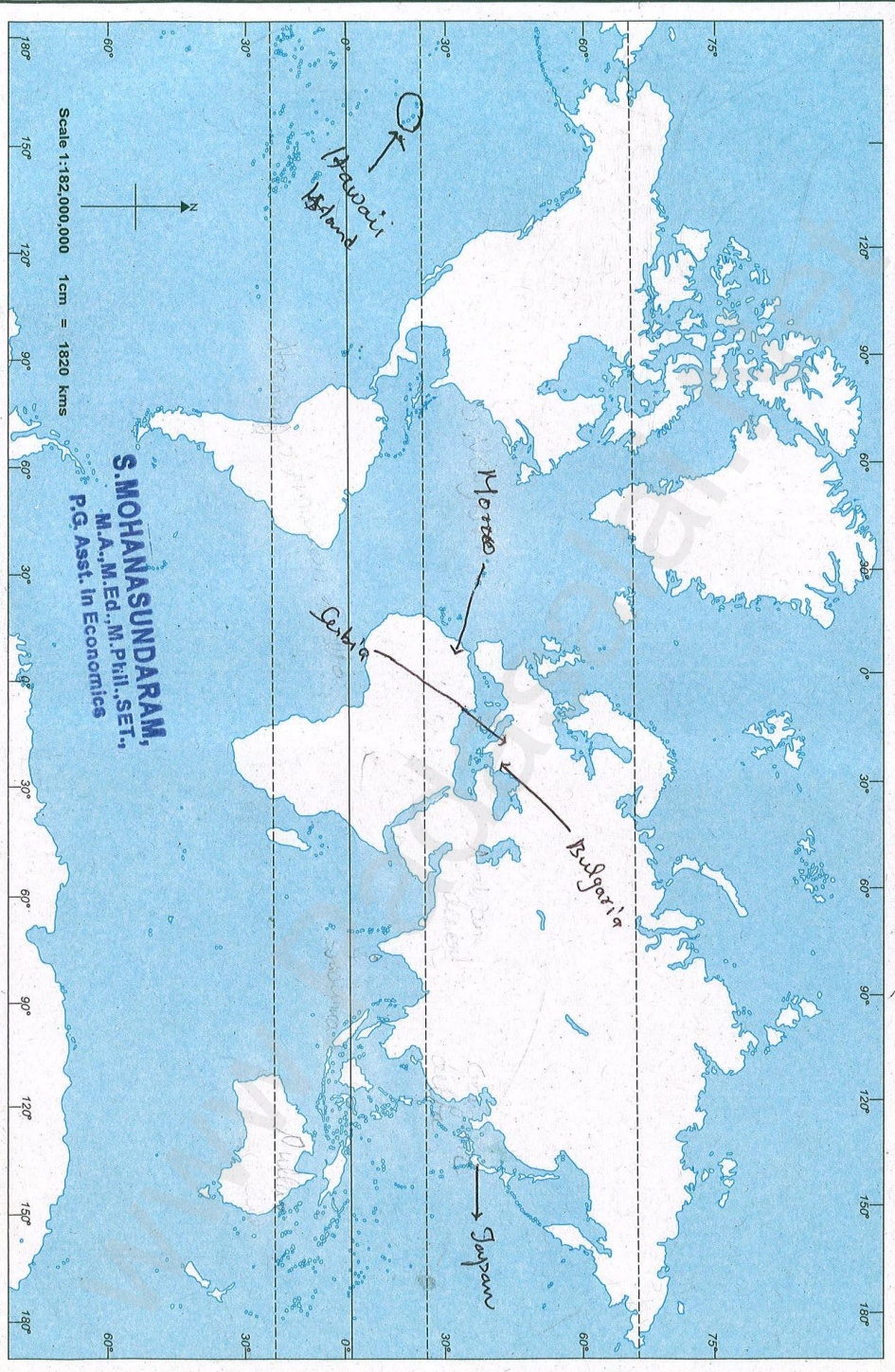
1 unit = 10 years



S. MOHANASUNDARAM, P.G. Asst. in Economics, Ranipet District.

WORLD - OUTLINE

Name : Selvi
Class : X
School : History
Sec : World Map
Roll No : 5011 Selvi



S. MOHANASUNDARAM,
M.A., M.Ed., M. Phil., SET.,
P.G. Asst. in Economics

© Government Of India Copyright 2013.
Based Upon Survey of India map with the permission of the Surveyor
General Of India

FOR SCHOOL USE ONLY

The horizontal waters of India extend into the sea to a distance of twelve
Nautical miles measured from the appropriate base line.

S. MOHANASUNDARAM, P.G. Asst. in Economics, Ranipet District.



INDIA - OUTLINE

NAME: Set-5
 CLASS: X SEC: boy
 ROLL NO.: Geography



S. MOHANASUNDARAM, P.G. Asst. in Economics, Ranipet District.

Name : Set 05
Class : 8 Sec : Roll No.:
School : Surala Sula

TAMILNADU - OUTLINE



FOR SCHOOL USE ONLY.

SOCIAL SCIENCE

SET- VI

S. MOHANASUNDARAM, P.G. Asst. in Economics, Ranipet District.

Chapter 6 and 7

Part I

Total Marks:42

I. Choose the correct answer:

14 x 1 = 14

1. Which of the following passes is not located in the western ghats of Tamil nadu?

- a) Palghat b) Shencottah
c) Bhorghat d) Achankoil

2. Which one of the following rivers is flow into the Arabian sea?

- a) Periyar b) Cauvery
c) Chittar d) Bhavani

3. The district with largest mangrove forest cover in tamil nadu is

- a) Ramanathapuram b) Nagapattinam
c) Cuddalore d) Theni

4. Retreating monsoon wind _____ not related.

- a) sea to land b) Bay of Bengal
c) tamil nadu d) Land to sea

5. Sand dunes affected large place

- a) theni b) madurai
c) thanjavur d) ramanathapuram

6. Thamirabarani related to _____.

- a) pothigai b) red soil
c) perennial d) all the above

7. Granary of South India is _____ delta.

- a) cauvery b) mahanadi
c) krishna d) godavari

8. Tamil nadu second staple food is _____.

- a) pulses b) millets
c) oil seeds d) rice

9. A major hydro-electric power project of Tamil nadu is _____.

- a) mettur b) papanasam
c) sathanur d) thungabhadra

10. Tamil nadu minor port _____ not related.

- a) cuddalore b) nagapatinam

S. MOHANASUNDARAM, P.G. Asst. in Economics, Ranipet District.

c) pamban d) machulipatnam

11. The longest national highway is _____ Tamil nadu.

- a) 44 b) 48
c) 45 d) 46

12. Tamil nadu _____ district reported to highest literacy rate.

- a) karur b) tirupur
c) dharmapuri d) kanyakumari

13. Tamil nadu least density of population is recorded _____ district.

- a) ramanathapuram b) theni
c) nilgiris d) coimbatore

14. India observed _____ as national year of millets.

- a) 2018 b) 2017
c) 2019 d) 2016

Part II

II. Fill in the blanks:

5 x 1 = 5

1. Tamil nadu and Kerala border _____ hills located.
2. Poor man's ooty located _____ range.
3. Garden of southern India _____ delta.
4. Shortest national highways runs from Madurai to _____.
5. The highest sex ratio is found in _____ district.

Part III

III. Match the following:

5 x 1 = 5

1. Erode - Mat
2. Coimbatore - Temple Jewellery
3. Pattamadai - Silk
4. Kancheepuram - Termeric
5. Nagarcoil - Wet grinder

Part IV

IV.

Draw time line any five important events from 1915-1930.

S. MOHANASUNDARAM, P.G. Asst. in Economics, Ranipet District.

Part V

V. On the outline map of India mark the following: 5 x 1 = 5

- (i) Ambala (ii) Allahabad (iii) Gwalior (iv) Chauri-chaura (v) Vedaranyam

Part VI

VI. On the outline map of India mark the following: 8 x 1 = 8

a)

- (i) Kailash range
(ii) Major wheat growing region
(iii) Western ghats
(iv) Mention any one peak
(v) sea route Kandla to Cochin
(vi) Mention least population state
(vii) Electronic capital of India
(viii) Palk Bay

(OR)

b)


- (i) Cape Comorin
(ii) Evergreen forest
(iii) Mention any one plains
(iv) R. Cauvery and dam on it
(v) Pamban Island
(vi) Saline soils of Tamil nadu
(vii) Nilgiri biosphere reserve
(viii) Mention any one Mangrove forest.

S. MOHANASUNDARAM, P.G. Asst. in Economics, Ranipet District.

TIME LINE

IMPORTANT EVENT BETWEEN 1915 - 1930

1 unit = 10 years



S. MOHANASUNDARAM, P.G. Asst. in Economics, Ranipet District.



INDIA - OUTLINE

Set b

NAME: _____
CLASS: X SEC: History
ROLL NO.: Social Science



© Government of India Copyright 2013
The territorial waters of India extend into the sea to a distance of twelve nautical miles measured from the appropriate base line.
The external boundaries and positions of India agree with the Revised Master Copy certified by Survey of India.

Published By: ESHA PUBLICATION SIVAKASI

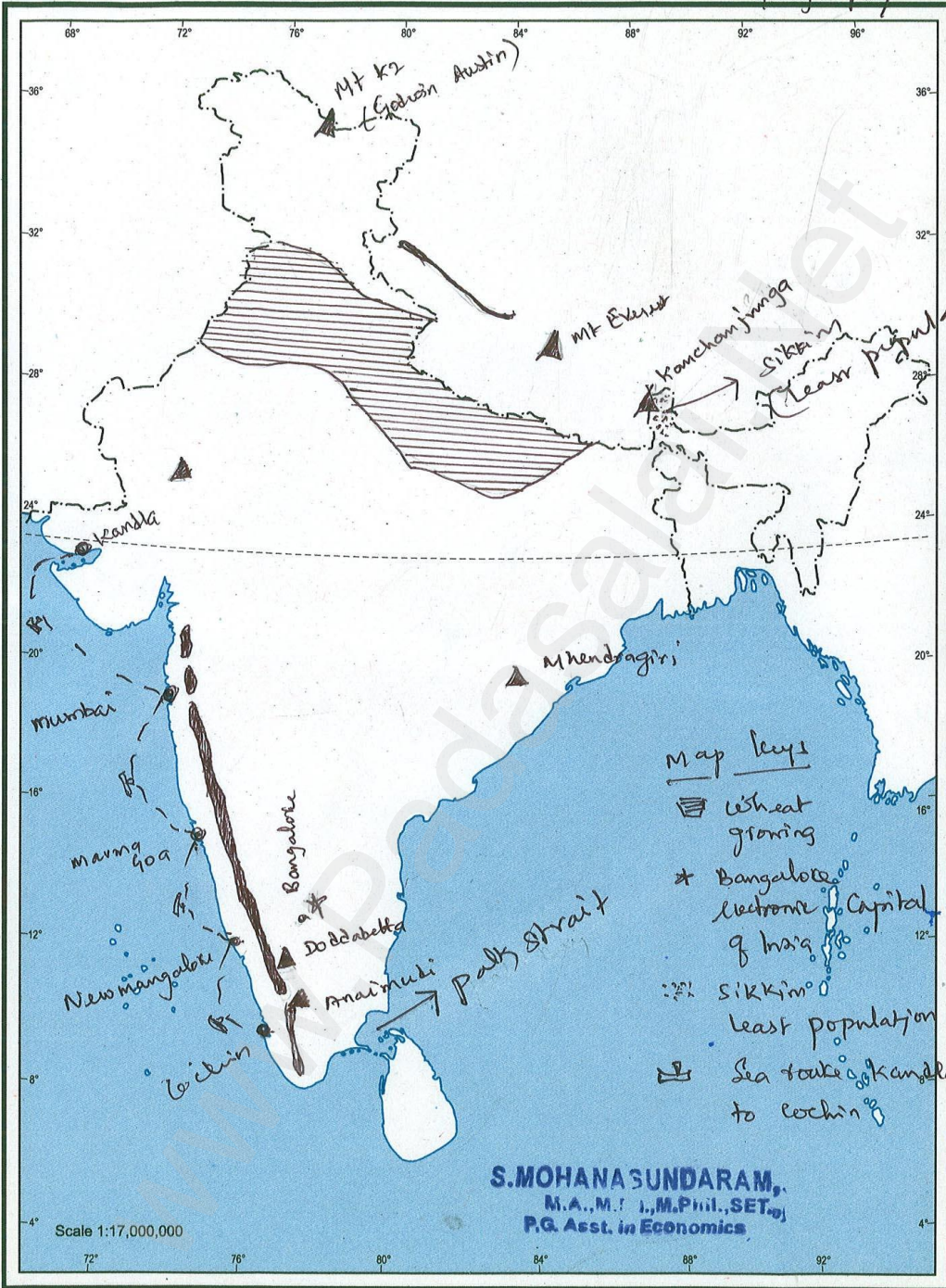
S. MOHANASUNDARAM, P.G. Asst. in Economics, Ranipet District.



INDIA - OUTLINE

Set - 6

NAME: _____
 CLASS: 8 SEC: Sivali Swami
 ROLL NO.: Geography

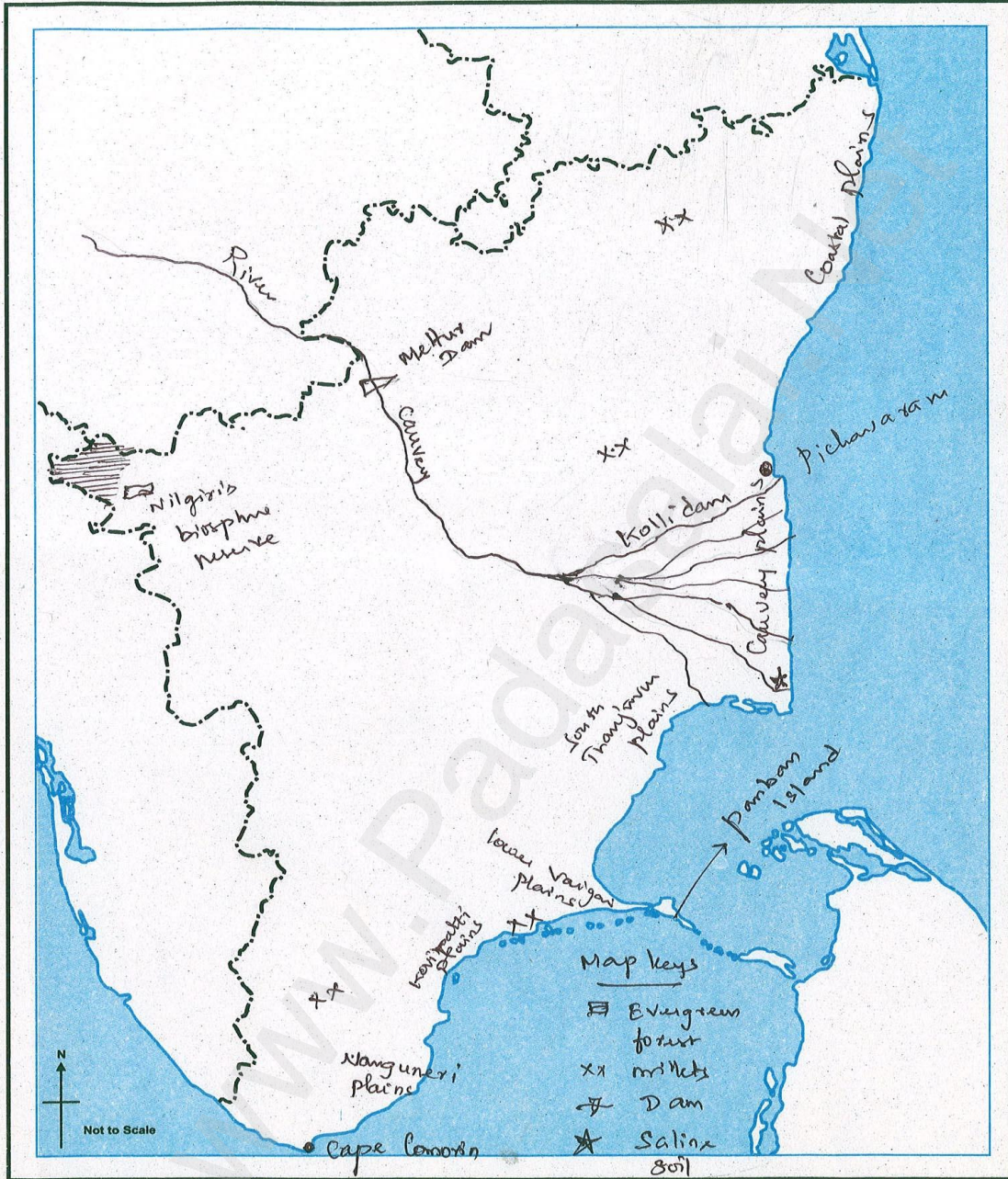


S. MOHANASUNDARAM, P.G. Asst. in Economics, Ranipet District.

Set- b

Name :
Class : 8 Sec: Geography
School : Social Science

TAMILNADU - OUTLINE



S. MOHANASUNDARAM,
M.A., M.Ed., M.Phil., SET.,
P.G. Asst. in Economics

FOR SCHOOL USE ONLY.

S. MOHANASUNDARAM, P.G. Asst. in Economics, Ranipet District.