


**MATHEMATICS**


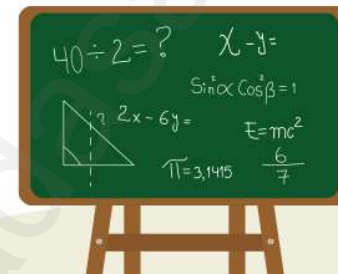
PRESENTATION BY  
**Mr.M.VIJAYAKYMAR.,B.Sc.,M.Ed.,**  
**9600545700 Virudhunagar**

**Mr.K.VIJAYAMANIKANDAN**  
BBA.,PGDIT.,CTTC.,  
**9994011074 Sivakasi**

The banner features a large 'M' with a checkmark, a smartphone character giving a thumbs up, and various mathematical symbols and formulas like  $5 \times 9 = 45$ ,  $\pi r^2$ ,  $a^2 + b^2 = c^2$ , and  $2 \times 2 = 4$ .



How to Develop Student's  
Interest in Mathematics



**TEST NO : 1 K.M.K.A. MATRIC. HR. SEC. SCHOOL, THIRUTHANGAL.**  
**STD : X EXERCISES 2.6 – 2.7 (with Examples) Marks : 50**

**I) Answer the following question : (Any 10)**

**10 x 5 = 50**

- 1) Determine the general term of an A.P., whose 7<sup>th</sup> term is -1 and 16<sup>th</sup> term is 17.
- 2) If  $l^{\text{th}}$ ,  $m^{\text{th}}$  and  $n^{\text{th}}$  terms of an A.P are x, y, z respectively. Then show that, i)  $x(m-n) + y(n-l) + z(l-m) = 0$ . ii)  $(x-y)n + (y-z)l + (z-x)m = 0$ .
- 3) If an A.P sum of four consecutive terms is 28 and their sum of their squares is 276. Find the four numbers.
- 4) The sum of three consecutive terms that are in A.P is 27 and their product is 288. Find the three terms.
- 5) The ratio of 6<sup>th</sup> and 8<sup>th</sup> term of an A.P. is 7 : 9. Find the ratio of 9<sup>th</sup> term to 13<sup>th</sup> term.
- 6) Priya earned Rs.15,000 in the first month. There after her salary increased by Rs.1500 per year. Her expenses are Rs.13,000 during the first year and the expenses increases by Rs.900 per year. How long will it take for her to save Rs.20,000 per month.
- 7) Find the sum of all natural numbers between 300 and 600, which are divisible by 7.
- 8) The sum of first n, 2n and 3n term of an A.P are S<sub>1</sub>, S<sub>2</sub> and S<sub>3</sub> respectively. Prove that  $S_3 = 3(S_2 - S_1)$ .
- 9) Find the Sum of all natural numbers between 602 and 902, Which are not divisible by 4.

- 10) If  $S_1, S_2, S_3, \dots, S_m$  are the sums of n terms of M A.P's whose first terms are 1, 2, 3, ..... m and whose common difference are 1, 3, 5, ..... (2m-1) respectively, then Show that  $S_1 + S_2 + S_3 + \dots + S_m = \frac{1}{2} M_n (M_n + 1)$ .
- 11) Find the sum  $\left[ \frac{a-b}{a+b} + \frac{3a-2b}{a+b} + \frac{5a-3b}{a+b} + \dots \text{to } 12 \right]$
- 12) The product of three consecutive terms of a Geometric Progression is 343 and their sum is  $91/3$ . Find the three terms.
- 13) The present value of a machine is Rs.40,000 and its value depreciates each year by 10%. Find the estimated value of the machine in the 6<sup>th</sup> year.
- 14) In a G.P. the product of three consecutive terms is 27 and the sum of the product of two terms taken at a time is  $57/2$ . Find the three terms.
- 15) If a, b, c are three consecutive terms of an A.P and x,y,z are three consecutive terms of a G.P. Then Prove that  $x^{b-c} \times y^{c-a} \times z^{a-b} = 1$ .

=====

**Presentation : Mr. M. VIJAYAKUMAR., B.Sc.,M.Ed.,**  
**9600545700**

**Design : Mr. K. VIJAYAMANIKANDAN., BBA.,PGDIT.,CTTC.,**  
**9994011074**

**TEST NO : 2 K.M.K.A. MATRIC. HR. SEC. SCHOOL, THIRUTHANGAL.**  
**STD : X EXERCISES 2.8 - 2.9 (with Examples) Marks : 50**

**I) Answer the following question : 10 x 5 = 50**

- Find the least positive integer  $n$  such that  $1 + 6 + 6^2 + \dots + 6^n > 500$ .
- A person saved money every years, half as much as he could in the previous year. If he had totally saved Rs.7875 in 6 years then how much did he save in the first year.
- Find the sum to  $n$  terms of the series  $0.4 + 0.44 + 0.444 + \dots$  to  $n$  terms.
- Find the sum of the Geometric series  $3 + 6 + 12 + \dots + 1536$ .
- If  $S_n = (x+y) + (x^2+xy+y^2) + (x^3+x^2y+y^3) + \dots + n$  terms, then prove that  $(x-y) S_n = \left[ \frac{x^2(x^n-1)}{x-1} - \frac{y^2(y^n-1)}{y-1} \right]$
- Find the sum of the series  $10^3 + 11^3 + 12^3 + \dots + 20^3$ .
- How many terms of the series  $1^3 + 2^3 + 3^3 + \dots$  should be taken to get the sum 14,400?
- The sum of the cubes of the first ' $n$ ' natural numbers is 2025, then find the value of  $n$ .
- Reka has 15 square colour papers of sizes 10cm, 11cm, 12cm ..... 24cm. How much area can be decorate with these colour papers.
- Find the sum of the series  $(2^3-1^3) + (4^3-3^3) + (6^3-5^3) + \dots$  to  
 i) ' $n$ ' terms                      ii) 8 terms

=====

Presentation : Mr. M. VIJAYAKUMAR., B.Sc.,M.Ed.,  
 9600545700  
 Design : Mr. K. VIJAYAMANIKANDAN., BBA.,PGDIT.,CTTC.,  
 9994011074

**TEST NO : 3 K.M.K.A. MATRIC. HR. SEC. SCHOOL, THIRUTHANGAL.**  
**STD : X EXERCISES 3.2, 3.6, 3.8, 3.13 (with Examples) Marks : 50**

**I) Answer the following question : 10 x 5 = 50**

- Find the G.C.D of  $3x^4 + 6x^3 - 12x^2 - 24x$  and  $4x^4 + 14x^3 + 8x^2 - 8x$ .
- Find the G.C.D of  $6x^3 - 30x^2 + 60x - 48$  and  $3x^3 - 12x^2 + 21x - 18$ .
- If  $A = \frac{2x+1}{2x-1}$ ,  $B = \frac{2x-1}{2x+1}$ , find  $\frac{1}{A-B} - \frac{2B}{A^2-B^2}$ .
- If  $A = \frac{x}{x+1}$ ,  $B = \frac{1}{x+1}$ , prove that  $\frac{(A+B)^2 + (A-B)^2}{A \div B} = \frac{2(x^2+1)}{x(x+1)^2}$ .
- If  $9x^3 + 12x^3 + 28x^2 + ax + b$  is a perfect square, find the value of ' $a$ ' and ' $b$ '.
- Find the value of ' $a$ ' and ' $b$ '  $ax^4 + bx^3 + 361x^2 + 220x + 100$ .
- Find the value of ' $m$ ' and ' $n$ '  $x^4 - 8x^3 + mx^2 + nx + 16$ .
- If the roots of  $(a-b)x^2 + (b-c)x + (c-a) = 0$  are real and equal, then prove that  $b, a, c$  are in A.P.
- If  $a, b$  are real then show that the roots of the equation  $(a-b)x^2 - 6(a+b)x - 9(a-b) = 0$  are real and unequal.
- If the roots of the equation  $(c^2-ab)x^2 - 2(a^2-bc)x + b^2-ac = 0$  are real and equal P.T either  $a = 0$ , (or)  $a^3 + b^3 + c^3 = 3abc$ .

=====

Presentation : Mr. M. VIJAYAKUMAR., B.Sc.,M.Ed.,  
 9600545700  
 Design : Mr. K. VIJAYAMANIKANDAN., BBA.,PGDIT.,CTTC.,  
 9994011074

TEST NO : 4 K.M.K.A. MATRIC. HR. SEC. SCHOOL, THIRUTHANGAL.

EXERCISES 3.17, 3.18 and 3.19 (with Examples)

STD : X

Marks : 50

I) Answer the following question :

10 x 2 = 20

1) Construct a 3 x 3 matrix whose elements are given by  $a_{ij} = \left(\frac{(i+j)^3}{3}\right)$ .2) If  $A = \begin{pmatrix} 1 & 2 & 3 \\ 4 & 5 & 6 \\ 7 & 8 & 9 \end{pmatrix}$ ,  $B = \begin{pmatrix} 1 & 7 & 0 \\ 1 & 3 & 1 \\ 2 & 4 & 0 \end{pmatrix}$  find  $A + B$ .3) If  $A = \begin{pmatrix} 5 & 4 & -2 \\ \frac{1}{2} & \frac{3}{4} & \sqrt{2} \\ 1 & 9 & 4 \end{pmatrix}$ ,  $B = \begin{pmatrix} -7 & 4 & -3 \\ \frac{1}{4} & \frac{7}{2} & 3 \\ 5 & -6 & 9 \end{pmatrix}$ , find  $4A - 3B$ .4) Find x and y if  $x \begin{pmatrix} 4 \\ -3 \end{pmatrix} + y \begin{pmatrix} -2 \\ 3 \end{pmatrix} = \begin{pmatrix} 4 \\ 6 \end{pmatrix}$ .5) If  $A = \begin{pmatrix} 0 & 4 & 9 \\ 8 & 3 & 7 \end{pmatrix}$ ,  $B = \begin{pmatrix} 7 & 3 & 8 \\ 1 & 4 & 9 \end{pmatrix}$  find the value of  $3A - 9B$ .6) If  $A = \begin{pmatrix} 1 & 2 & 0 \\ 3 & 1 & 5 \end{pmatrix}$ ,  $B = \begin{pmatrix} 8 & 3 & 1 \\ 2 & 4 & 1 \\ 5 & 3 & 1 \end{pmatrix}$  find  $AB$ .7) Solve  $\begin{pmatrix} 2 & 1 \\ 1 & 2 \end{pmatrix} \begin{pmatrix} x \\ y \end{pmatrix} = \begin{pmatrix} 4 \\ 5 \end{pmatrix}$ .8) If  $A = \begin{pmatrix} \cos \theta & \sin \theta \\ -\sin \theta & \cos \theta \end{pmatrix}$  prove that  $AA^T = I$ .9) Verify that  $A^2 = I$  when  $A = \begin{pmatrix} 5 & -4 \\ 6 & -5 \end{pmatrix}$ .

10) Find the value of a, b, c, d from the following matrix equation

$$\begin{pmatrix} d & 8 \\ 3b & a \end{pmatrix} + \begin{pmatrix} 3 & a \\ -2 & -4 \end{pmatrix} = \begin{pmatrix} 2 & 2a \\ b & 4a \end{pmatrix} + \begin{pmatrix} 0 & 1 \\ -5 & 0 \end{pmatrix}.$$

II) Answer the following question : (Any 6)

6 x 5 = 30


11) If  $A = \begin{bmatrix} 1 & 8 & 3 \\ 3 & 5 & 0 \\ 8 & 7 & 6 \end{bmatrix}$ ,  $B = \begin{bmatrix} 8 & -6 & -4 \\ 2 & 11 & -3 \\ 0 & 1 & 5 \end{bmatrix}$ ,  $C = \begin{bmatrix} 5 & 3 & 0 \\ -1 & -7 & 2 \\ 1 & 4 & 3 \end{bmatrix}$  thenfind  $3A + 2B - C$ .12) Find x and y, If  $x + y = \begin{pmatrix} 7 & 0 \\ 3 & 5 \end{pmatrix}$  and  $x - y = \begin{pmatrix} 3 & 0 \\ 0 & 4 \end{pmatrix}$ .13) If  $A = \begin{pmatrix} 1 & 1 \\ -1 & 3 \end{pmatrix}$ ,  $B = \begin{pmatrix} 1 & 2 \\ -4 & 2 \end{pmatrix}$ ,  $C = \begin{pmatrix} -7 & 6 \\ 3 & 2 \end{pmatrix}$  verify that

$$A(B+C) = AB + AC.$$

14) If  $A = \begin{pmatrix} 3 & 1 \\ -1 & 2 \end{pmatrix}$  Show that  $A^2 - 5A + 7I = 0$ .15) If  $A = \begin{pmatrix} a & b \\ c & d \end{pmatrix}$  and  $I = \begin{pmatrix} 1 & 0 \\ 0 & 1 \end{pmatrix}$  Show that  $A^2 - (a+d)A = (bc - ad) - I^2$ .16) Let  $A = \begin{pmatrix} 1 & 2 \\ 1 & 3 \end{pmatrix}$ ,  $B = \begin{pmatrix} 4 & 0 \\ 1 & 5 \end{pmatrix}$ ,  $C = \begin{pmatrix} 2 & 0 \\ 1 & 2 \end{pmatrix}$  Show that  $(A - B)^T = A^T - B^T$ .17) If  $A = \begin{pmatrix} 5 & 2 & 9 \\ 1 & 2 & 8 \end{pmatrix}$ ,  $B = \begin{pmatrix} 1 & 7 \\ 1 & 2 \\ 5 & -1 \end{pmatrix}$  verify that  $(AB)^T = B^T A^T$ .18) If  $A = \begin{pmatrix} 1 & 3 \\ 5 & -1 \end{pmatrix}$ ,  $B = \begin{pmatrix} 1 & -1 & 2 \\ 3 & 5 & 2 \end{pmatrix}$ ,  $C = \begin{pmatrix} 1 & 3 & 2 \\ -4 & 1 & 3 \end{pmatrix}$  verify that

$$A(B+C) = AB + BC.$$

=====



Presentation : Mr. M. VIJAYAKUMAR., B.Sc., M.Ed.,

9600545700

Design : Mr. K. VIJAYAMANIKANDAN., BBA., PGDIT., CTTC.,

9994011074



**TEST No : 5 K.M.K.A. MATRIC. HR. SEC. SCHOOL, THIRUTHANGAL.****STD : X****Exercise – 5.1 & 5.2****Marks : 50****I) Answer the following questions : 10 x 5 = 50**

- 1) Show that the given points form a Parallelogram. A(2.5, 3.5), B(10, - 4), C (2.5, - 2.5) and D(-5, 5).
- 2) If the points A(2, 2), B(-2, - 3), C (1, -3) and D(x, y) form a parallelogram then find the value of x and y.
- 3) Let A(3, -4), B(9, - 4), C (5, -7) and D(7, -7) Show that ABCD is a trapezium.
- 4) A quadrilateral has vertices at A(-4, -2), B(5, -1), C(6, 5) and D(-7, 6). Show that the mid points of its sides form a parallelogram.
- 5) Prove analytically that the line segment joining the mid - points of two sides of a triangle is parallel to the third side and is equal to half of its length.
- 6) If the points A(-3, 9), B(a, b), and C) (4, -5) segment are collinear and if  $a+b=1$ , then find “a” and “b”.
- 7) Find the value of Ka. If the area of a quadrilateral is 28 Sq. unit. Whose vertices are (-4, -2) (-3, k), (3, -2) and (2, 3).
- 8) Find the area of the quadrilateral (-9, 0), (-8, 6), (-1, -2) and (-6, -3).
- 9) Find the value of “a” for which the given points are collinear (a, 2-2a), (-a+1, 2a) and (-4-a, 6-2a).
- 10) If the points P(-1, -4), Q(b, c) and R(5, -1) are collinear and If  $2b+c = 4$  then find the values of “b” and “c”.

=====

Presentation : Mr. M. VIJAYAKUMAR., B.Sc.,M.Ed.,  
9600545700  
Design : Mr. K. VIJAYAMANIKANDAN., BBA.,PGDIT.,CTTC.,  
9994011074

**TEST No : 6 K.M.K.A. MATRIC. HR. SEC. SCHOOL, THIRUTHANGAL.****STD : X****Exercise – 5.3 & 5.4****Marks : 50****I) Answer the following questions : 10 x 5 = 50**

- 1) A line makes positive intercepts on coordinate axes whose sum is 1 and it passes through (-3, 8). Find its equation.
- 2) A mobile phone is put to use when the battery power is 100 %. The percent of battery power “y” (in decimal) remaining after using the mobile phone for x hours is assumed as  $y = -0.25x+1$ .
  - i) Find the number of hours elapsed if the battery power is 40 %.
  - ii) How much time does it take so that the battery has no power?
- 3) Find the equation of the straight line.
  - i) Passing through (1, -4) and has intercepts which are in the ratio 2 : 5.
  - ii) Passing through (-8, 4) and making equal intercepts on the coordinate axes.
- 4) Find the intercepts made by the following lines on the coordinate axes.
  - i)  $3x-2y-6 = 0$
  - ii)  $4x+3y+12 = 0$
- 5) You are downloading a song the percent y (in decimal) of mega bytes remaining to get downloaded in x seconds is given by  $y = -0.1x+1$ .
  - i) Find the total MB of the song.
  - ii) After how many seconds will 75 % of the song gets downloaded.
  - iii) After how many seconds the song will be downloaded completed?
- 6) Find the equation of a straight line parallel to y axis and passing through the point of intersection of the line  $4x+5y=13$  and  $x-8y+9=0$ .
- 7) Find the equation of the straight line through the intersection of the lines  $7x+3y=10$ ,  $5x-4y=1$  and parallel to the line  $13x+5y+12=0$ .
- 8) Find the equation of the straight line through the intersection of lines  $5x-6y=2$ ,  $3x+2y=10$  and perpendicular to the line  $4x-7y+13=0$ .
- 9) Find the equation of the straight line joining the points of intersection of  $3x+y+2=0$  and  $x-2y-4 = 0$  to the point of intersection of  $7x-3y=12$  and  $2y=x+3$ .
- 10) Find the equation of straight line through the points of intersection of the line  $8x+3y=18$ ,  $4x+5y=9$  and bisecting the line segment joining the points (5, -4) and (-7, 6).

=====

Presentation : Mr. M. VIJAYAKUMAR., B.Sc.,M.Ed.,  
9600545700  
Design : Mr. K. VIJAYAMANIKANDAN., BBA.,PGDIT.,CTTC.,  
9994011074

**TEST No : 7 K.M.K.A. MATRIC. HR. SEC. SCHOOL, THIRUTHANGAL.****STD : X****Exercise – 8.1& 8.2****Marks : 20****I) Answer the following questions : (2 Marks)****10 x 2 = 20**

- 1) Find the range and CO-efficient of range 25, 67, 48, 53, 18, 39, 44.
- 2) Find the S.D of first 21 Natural Numbers.
- 3) If  $n = 5$ ,  $x = 6$ ,  $\sum x^2 = 765$ , then calculate the Co-efficient of variation.
- 4) The S.D and mean of the data is 6.5 and 12.5 respectively. Find the Co - efficient of variation.
- 5) The range of a set of data is 13.67 and the largest value is 0.08. Find the smaller value.

**6) Calculate the following range :**

Income	400 – 450	450 – 500	500 – 550	550 – 60	600 – 650
No. of Workers	8	12	30	21	6

- 7) The men and C.V of a data are 15 ad 48 respectively. Find the Standard deviation.
- 8) The S.D and C.V of a data are 1.2 and 25.6 respectively. Find the value of Meen.
- 9) If the range and the smallest value of a set of data are 36.8 and 13.4 respectively then find the largest value.
- 10) IF the S.D of data is 3.6 and each value of the data is divided by 3, then find the new variance and new S.D.

Presentation : Mr. M. VIJAYAKUMAR., B.Sc.,M.Ed.,  
9600545700

Design : Mr. K. VIJAYAMANIKANDAN., BBA.,PGDIT.,CTTC.,  
9994011074

**TEST No : 8 K.M.K.A. MATRIC. HR. SEC. SCHOOL, THIRUTHANGAL.****STD : X****Exercise – 8.3 & 8.4****Marks : 20****I) Answer the following questions : (2 Marks)****10 x 2 = 20**

- 1) In a two a children family, find the probability that there is at least one girl in a family.
- 2) If  $P(A) = 0.37$ ,  $P(B) = 0.42$ ,  $P(A \cap B) = 0.09$  then find  $P(A \cup B)$ .
- 3) What is the probability of drawing either a king (or) a queen in a single draw from a well shuffled pack of 52 cards?
- 4) If  $P(A) = 2/3$ ,  $P(B) = 2/5$ ,  $P(A \cup B) = 1/3$  then find the  $P(A \cap B)$ .
- 5) If A and B are two mutually exclusive events of a random experiment and  $P(\text{not } A) = 0.45$ ,  $P(A \cup B) = 0.65$  then find  $P(B)$ ?
- 6) A coin is tossed thrice. What is the probability of getting two consecutive tails?
- 7) Write the sample space for tossing three coins using the diagram.
- 8) What is the probability that a leap year selected at random will contain 53 Saturday.
- 9) Two coins are tossed together. What is the probability of getting different face on the coins?
- 10) A die is rolled and a coin is tossed simultaneously. Find the probability that the die show an odd number and the coin shows a head.

=====

Presentation : Mr. M. VIJAYAKUMAR., B.Sc.,M.Ed.,  
9600545700

Design : Mr. K. VIJAYAMANIKANDAN., BBA.,PGDIT.,CTTC.,  
9994011074

**TEST NO : 9 K.M.K.A. MATRIC. HR. SEC. SCHOOL, THIRUTHANGAL.**  
**STD : X EXERCISES 2.1 - 2.5 Marks : 50**

**I) Answer the following question : (Any 10)**

**10 x 5 = 50**

- 1) Find the H.C.F of 396, 504, 636.
- 2) Prove that two consecutive positive integers are always Co prime.
- 3) If d is the height common factor of 32 and 60, find x and y satisfying  $d = 32x + 60y$ .
- 4) If the H.C.F of 210 and 55 is expressible in the form  $55x - 32y$ , then find x.
- 5) Find the largest number which divides 1230 and 1926 leaving remainder 12 in each case.
- 6) Find the H.C.F of 252525 and 363636.
- 7) If  $13824 = 2^a \times 3^b$  then find "a" and "b".
- 8) Find the L.C.M and H.C.F of 408 and 170 by applying the fundamental theorem of arithmetic.
- 9) Find the greatest number consisting of 6 digit which is exactly divisible by 24, 15, 36.
- 10) Find the H.C.F of 84, 90 and 120.
- 11) Find the least positive value of x such that  $98 \equiv (x+4) \pmod{5}$ .
- 12) Find the number of integer solution of  $3x \equiv 1 \pmod{15}$ .
- 13) What is the time 100 hours after 7 am?
- 14) Today is Tuesday. My uncle will come after 45 days in which day my uncle will be coming.
- 15) Compute x, such that  $10^4 \equiv x \pmod{19}$ .
- 16) The general term of a sequence s defined as

$$a_n = \begin{cases} n(n+3); & n \in N \text{ is odd} \\ n^2 + 1; & n \in N \text{ is even} \end{cases}$$

17) Find the first four terms of the sequence whose  $n^{\text{th}}$  terms are

$$a_n = (-1)^{n+1} n(n+1).$$

18) Find the nth terms of the sequence 3, 8, 13, 18.....

19) Find the indicated terms of the sequence whose  $n^{\text{th}}$  terms are given by

$$a_n = \frac{5n}{n+2}; a_6 \text{ and } a_{13}.$$

20) If  $a_1 = 1$  and  $a_n = 2a_{n+1} + a_{n-2}$ ,  $n \geq 3$ , then find the first six terms of the sequence.

21) Find the number of terms in the A.P 3, 6, 9, 12 ..... 111.

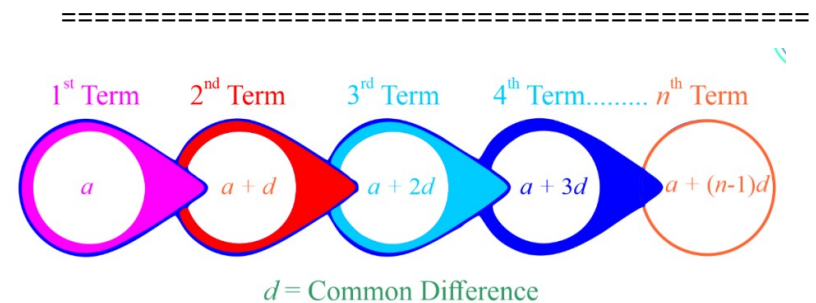
22) If  $3+k$ ,  $18-k$ ,  $5k+1$  are in A.P then find K.

23) Find the middle terms (s) of an .P 9, 15, 21, 27 .....183.

24) Find the 19<sup>th</sup> term of an A.P - 11, -15, -19.....

25) If nine times ninth term is equal to the fifteen times fifteenth term.

Show that six times twenty fourth term is zero.



**Presentation : Mr. M. VIJAYAKUMAR., B.Sc.,M.Ed.,**  
**9600545700**

**Design : Mr. K. VIJAYAMANIKANDAN., BBA.,PGDIT.,CTTC.,**  
**9994011074**

**TEST No : 10 K.M.K.A. MATRIC. HR. SEC. SCHOOL, THIRUTHANGAL.**  
**STD : X EXERCISES 2.6 – 2.9 Marks 50**

**I) Answer the following question :**

**25 x 2 = 50**

- 1) Find the sum of  $3 + 6 + 9 + \dots$  96.
- 2) Find the sum of  $9^3 + 10^3 + \dots$   $21^3$ .
- 3) If  $1 + 2 + 3 + \dots + n = 666$  then find n.
- 4) If  $1 + 2 + 3 + \dots + k = 325$ , then find  $1^3 + 2^3 + 3^3 + \dots + k^3$ .
- 5) If the first term of an infinite G.P is 8 and its sum of infinity is  $\frac{32}{3}$  then find the common ratio.
- 6) Find the rational form of the number of 0.123.
- 7) How many terms of the series  $1 + 4 + 16 + \dots$  make the sum 1365.
- 8) Find the sum of 8 terms of the G.P 1, -3, 9, -27 .....
- 9) Find the first term of a G.P in which  $S_6 = 4095$  and  $r = 4$ .
- 10) Find the sum of first six terms of the G.P 5, 15, 45 .....
- 11) In a G.P 729, 243, 81, ..... Find  $t_7$ .
- 12) Find so that  $x+6$ ,  $x+12$  and  $x+15$  are consecutive terms of a Geometric progression.
- 13) If a, b, c are in A.P then show that  $3^a$ ,  $3^b$ ,  $3^c$  are in G.P.
- 14) Find the 10<sup>th</sup> term of a G.P whose 8<sup>th</sup> term is 768 and the common ratio is 2.
- 15) In a G.P the 9<sup>th</sup> term is 32805 and 6<sup>th</sup> term is 1215. Find the 12<sup>th</sup> term?
- 16) Find the 8<sup>th</sup> term of G.P 9, 3, 1 .....
- 17) How many consecutive odd integers beginning with 5 will sum to 480.

- 18) Find the sum of the 102, 97, 92 ..... upto 27 terms.
- 19) Find the sum of first 28 terms of an A.P whose n<sup>th</sup> term is  $4n - 3$ .
- 20) Find the sum of all odd positive integers less than 450.
- 21) Find the sum of first 15 terms of the A.P. 8,  $7\frac{1}{4}$ ,  $6\frac{1}{2}$ ,  $5\frac{3}{4}$  .....
- 22) Find the sum of  $0.40 + 0.43 + 0.46 + \dots + 1$ .
- 23) How many terms of the series  $1 + 5 + 9 + \dots$  must be taken so that their sum is 190
- 24) In an A.P the sum of first n terms is  $\frac{5n^2}{2} + \frac{3n}{2}$ . Find the 17<sup>th</sup> term.
- 25) The sum of first n terms of a certain series is given as  $2n^2 - 3n$ . Show that the series is an A.P.

=====

Presentation : Mr. M. VIJAYAKUMAR., B.Sc.,M.Ed.,  
 9600545700  
 Design : Mr. K. VIJAYAMANIKANDAN., BBA.,PGDIT.,CTTC.,  
 9994011074



**TEST No : 11 K.M.K.A. MATRIC. HR. SEC. SCHOOL, THIRUTHANGAL.**

**STD : X**

**Exercises 6.1 TO 6.4**

**Marks : 30**

**I) Answer the following questions : (Any 15)**

**15 x 2 = 30**

1) Prove that  $\frac{\sin^3 A + \cos^3 A}{\sin A + \cos A} + \frac{\sin^3 A - \cos^3 A}{\sin A - \cos A} = 2$ .

2) Prove that  $\frac{1}{\operatorname{cosec} \theta - \sin \theta} = \tan \theta \sec \theta$ .

3) Prove that  $\frac{\sin A}{1 + \cos A} = \operatorname{cosec} A - \cot A$ .

4) Prove that  $\tan^2 \theta - \sin^2 \theta = \tan^2 \theta \sin^2 \theta$ .

5) Show that  $\sec \theta - \cos \theta = \tan \theta \sin \theta$ .

6)  $\tan 60^\circ \cos 60^\circ + \cot 60^\circ \sin 60^\circ$  is \_\_\_\_\_.

7) Prove that  $\sqrt{\frac{1 + \sin \theta}{1 - \sin \theta}} = \sec \theta + \tan \theta$ .

8) Prove that  $\sqrt{\frac{1 + \sin A}{1 - \sin A}} + \sqrt{\frac{1 - \sin A}{1 + \sin A}} = 2 \sec A$ .

9) Prove that  $\frac{1 + \sec A}{\sec A} = \frac{\sin^2 A}{1 - \cos A}$ .

10) Prove that  $\sqrt{\frac{1 + \cos \theta}{1 - \cos \theta}} = \operatorname{cosec} \theta + \cot \theta$ .

11) Prove that  $\cot \theta + \tan \theta = \sec \theta \operatorname{cosec} \theta$ .

12) From the top of a building 12 m high the angle of depression of a car on the ground is observed to be  $30^\circ$ . Find the distance of the car from the building.

13) Find the angle of elevation of the top of a tower from a point on the ground which is 30 m away from the foot of a tower of height  $10\sqrt{3}$  m.

14) A tower stands vertically on the ground. From a point on the ground which is 48 m away from the foot of the tower, the angle of elevation of the top of the tower is  $30^\circ$ . Find the height of the tower.

15) From the top of a rock  $50\sqrt{3}$  m high, the angle of depression of a car on the ground is observed to be  $30^\circ$ . Find the distance of the car from the rock.

16) A Kite is flying at a height of 75 m above the ground the string attached to the kite is temporarily tied to a point on the ground the inclination of the string with the ground is  $60^\circ$ . Find the length of the string assuming then there is no slack in the string.

17) A Player sitting on the top of a tower of height 20 m observes the angles of depression of a ball lying on the ground as  $60^\circ$ . Find the distance between the foot of the tower and the ball ( $\sqrt{3} = 1.732$ ).

18) The horizontal distance between two buildings is 70 m. The angle of depression of the top of the first building when seen from the top of the second building is  $45^\circ$ . If the height of the second building is 120 m. Find the height of the first building.

19) Prove that  $\frac{\sin A}{1 + \cos A} = \frac{1 - \cos A}{\sin A}$ .

20) Prove that  $\frac{\sec \theta}{\sin \theta} - \frac{\sin \theta}{\cos \theta} = \cot \theta$ .

=====

Presentation : Mr. M. VIJAYAKUMAR., B.Sc., M.Ed.,  
9600545700  
Design : Mr. K. VIJAYAMANIKANDAN., BBA., PGDIT., CTTC.,  
9994011074

**TEST No : 12 K.M.K.A. MATRIC. HR. SEC. SCHOOL, THIRUTHANGAL.**

**STD : X**

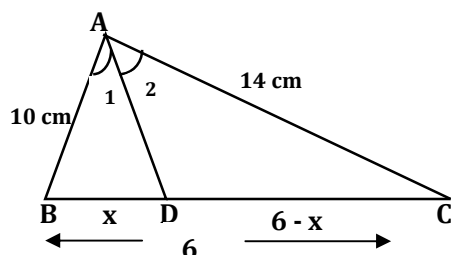
**UNIT - 4 (2 Marks)**

**Marks : 40**

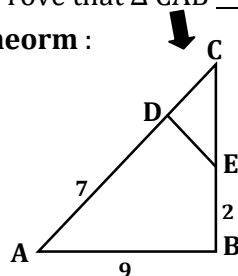
**I) Answer the following questions : (Any 20)**

**20 x 2 = 40**

- 1) In two concentric circles, a chord of length 16 cm of larger circle becomes a tangent to the smallest circle whose radius is 6 cm. find the radius of the larger circle.
- 2) In the figure AD is the bisector of  $\angle BAC$ , If  $AB = 10$  cm,  $AC = 14$  cm and  $BC = 6$  cm find BD and DC.

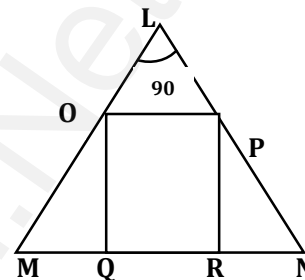


- 3) The perimeters of two similar triangles ABC and PQR are respective 36 cm and 24 cm. if  $PQ = 10$  cm find AB.
- 4) In figure  $\angle A = \angle CED$ . Prove that  $\triangle CAB \simeq \triangle CED$ . Also find the value of x.
- 5) **State menelaus theorem :**

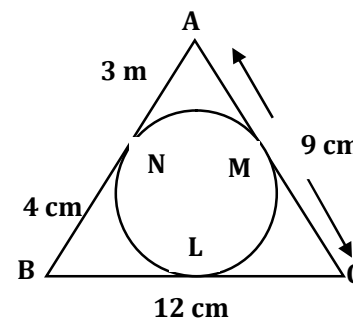


- 6) The length of the tangent to a circle from a point P. Which is 25 cm away from the centre is 24 cm. What is the radius of the circle.
- 7) In  $\triangle ABC$  If  $DE \parallel BC$   $AD = x$ ,  $BD = x - 2$ ,  $AE = x + 2$  and  $EC = x - 1$  then find the length of the sides AB and AC.
- 8) A man goes 18 m due east and then 24 m due north find the distance of his current position from the starting point.

- 9) What length to ladder is needed to reach a height of 7m along the wall when the base of the ladder is 4m from the wall?
- 10) PQ is a tangent drawn from a point P to a circle with centre O and QOR is a diameter of the circle such that  $\angle PQR = 120^\circ$  find  $\angle OPQ$ .
- 11) In figure OPRQ is a square and  $\angle MLN = 90^\circ$  prove that  $QR^2 = MQ \times RN$ .

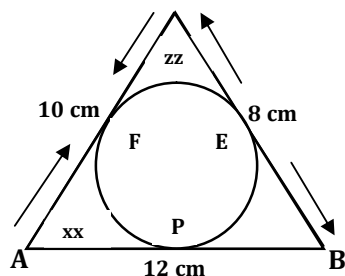


- 12) In  $\triangle ABC$ , D and E are points on the sides AB and AC respectively such that  $DE \parallel BC$  if  $\frac{AD}{DB} = \frac{3}{4}$  and  $AC = 15$  cm, find AE.
- 13) In figure  $\triangle ABC$  is circumscribing a circle, find the length of BC.

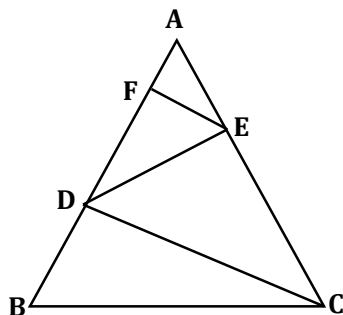


- 14) Find the length of the tangent drawn from a point whose distance from the center of a circle is 5 cm and radius of the circle is 3 cm.
- 15) If radii of two concentric circles are 4 cm and 5 cm then find the length of the chord of the larger circle which is tangent to the smaller circle.
- 16) **State Ceva's theorem :**
- 17) In  $\triangle ABC$ , D and E are points on the sides AB and AC respectively for each of the following cases. Show that  $DE \parallel BC$ .  $AB = 5.6$  cm,  $AD = 1.4$  cm,  $AC = 7.2$  cm,  $AE = 1.8$  cm.

- 18) A circle is inscribed in  $\Delta ABC$  having sides 8 cm, 10 cm and 12 cm as shown in the figure. Find AD, BE and CF.




- 19) In figure  $DE \parallel BC$  and  $CD \parallel EF$ . Prove that  $AD^2 = AB \times AF$ .



- 20) Check whether AD is bisector of  $\angle A$  of  $\Delta ABC$  is  $AB = 5$  cm,  $AC = 10$  cm,  $BD = 1.5$  cm and  $CD = 3.5$  cm.
- 21) A boy of height 90 cm is walking away from the base of a lamp post at a speed of 1.2 / sec. if the lamp post is 3.6 cm.
- 22) If  $\Delta ABC$  is similar to  $\Delta DEF$  such that  $BC = 3$  cm,  $EF = 4$  cm and area of  $\Delta ABC = 54$  cm<sup>2</sup>. Find the area of  $\Delta DEF$ .
- 23) The perimeter of two similar triangle ABC and PQR are respectively 36 cm and 24 cm. If  $PQ = 10$  cm. Find AB.

=====



Presentation : Mr. M. VIJAYAKUMAR., B.Sc.,M.Ed.,  
9600545700

Design : Mr. K. VIJAYAMANIKANDAN., BBA.,PGDIT.,CTTC.,  
9994011074

**TEST No : 13 K.M.K.A. MATRIC. HR. SEC. SCHOOL, THIRUTHANGAL.**

**STD : X**

**Exercises 7.1 TO 7.4**

**Marks : 50**

**I) Answer the following questions : (Any 25)**

**25 x 2 = 50**

- 1) The curved surface area of a right circular cylinder of height 14 cm is  $88 \text{ cm}^2$ . Find the diameter of the cylinder.
- 2) If the total surface area of a cone of radius 7 cm is  $704 \text{ cm}^2$  then find its slant height.
- 3) Find the diameter of a sphere whose surface area is  $154 \text{ m}^2$ .
- 4) If the base area of a hemispherical solid is  $1386 \text{ Sq. meters}$  then find its total surface area.
- 5) The slant height of a frustum of a cone is 5 cm and the radii of its ends are 4 cm and 1 cm. find the curved surface area.
- 6) Find the volume of a cylinder whose height is 2 m and whose base area is  $250 \text{ m}^2$ .
- 7) The volume of a solid right circular cone is  $5 \text{ cm}$  and the radii of its ends are 4 m and 1 cm. find the curved surface area.
- 8) The ratio of the volumes of two cones is 2 : 3. Find the ratio of their radii if the height of the second cone is double the height of the first.
- 9) If the radii of their circular ends of a frustum which is 45 cm height are 28 m and 7 cm. find the volume of the frustum.
- 10) A metallic sphere of radius 16 cm is melted and recast into small spheres each of radius 2 cm. How many small spheres can be obtained?
- 11) A cone of height 24 cm is made up of modeling clay. A child reshapes it in the form of a cylinder of same radius as cone. Find the height of the cylinder.
- 12) An aluminium sphere of radius 12 cm is melted to make a cylinder of radius 8 cm. find the height of the cylinder.
- 13) A solid sphere and a solid hemisphere have equal total surface area. Prove that the ratio of their volume is  $3\sqrt{3} : 4$ .

- 14) If the volume of a sphere is  $36\pi \text{ cm}^3$ . Find the volume of a cone with same radius and height of a sphere.
- 15) If the circumference of a conical wooden piece is 484 cm then find its volume when its height is 105 cm.
- 16) If the ratio of radii of two spheres is 4 : 7 find the ratio of their volumes.
- 17) The radius and height of a cylinder are in the ratio 5 : 7 and its C.S.A is  $5500 \text{ Sq.cm}$ . find its radius and height.
- 18) Four persons like a conical tent start height is 19 cm. if each person require  $2209 \text{ cm}$  of the floor area, then find the height of the tent.
- 19) A garden is leveled by a cylinder of length 3 m and diameter 2.8 m. Find the area of the ground for 8 revolution.
- 20) Find the maximum volume of a cone that can be carved out of a solid hemisphere of radius "r" units.
- 21) A vessel is in the form of a hemispherical bowl mounted by a hollow cylinder the diameter is 64 cm and the height of the vessel is 13 cm. Find the capacity of the vessel.
- 22) The radius of a sphere increases by 25 % find the percentage increase in its surface area.
- 23) A cone of height 24 cm is made up of modeling clay. A child reshapes it in the form of a cylinder of same radius as cone. Find the height of the cylinder.
- 24) If the base area and the T.S.A of a cylinder are  $154 \text{ Sq. cm}$  and  $748 \text{ Sq. cm}$  respectively then find the C.S.A of the cylinder.
- 25) The volume of a cone is  $1000\frac{5}{7} \text{ cube cm}$  the area of its base is  $201\frac{1}{7} \text{ Sq. cm}$ . Find the slant height of the cone.
- 26) A hollow sphere of internal and external diameters are 4 cm and 8 cm. find its volume.
- 27) The volumes of two cones of same base radius are  $3600 \text{ cm}^3$  and  $5040 \text{ cm}^3$ . Find the ratio of heights.

Presentation : Mr. M. VIJAYAKUMAR., B.Sc.,M.Ed.,  
9600545700

Design : Mr. K. VIJAYAMANIKANDAN., BBA.,PGDIT.,CTTC.,  
9994011074



**TEST No : 14 K.M.K.A. MATRIC. HR. SEC. SCHOOL, THIRUTHANGAL.**  
**STD : X Exercises 5.1 TO 5.4 Marks : 50**

**I) Answer the following questions :**

**25 x 2 = 50**

- 1) Find the area of the triangle whose vertices are  $(-3, 5)$ ,  $(5, 6)$  and  $(5, -2)$ .
- 2) If the area of the triangle formed by the vertices  $A(-1, 2)$ ,  $B(k, -2)$  and  $C(7, 4)$  (take in order)
- 3)  $(a, b+c)$ ,  $(b, c+a)$  and  $(c, a+b)$  determine whether the points are collinear?
- 4) Show that the points  $(-2, 5)$ ,  $(6, -1)$  and  $(2, 2)$  are collinear.
- 5) The line through the point  $(-2, a)$  and  $(9, 3)$  has slope  $-1/2$ . Find the value of  $a$ .
- 6) Find the slope of a line joining the its points  $(5, \sqrt{5})$  with the origin.
- 7) Calculate the slope and y intercept of the straight line  $8x - 7y + 6 = 0$ .
- 8) Find the equation of a line passing through the points  $(3, -4)$  and having slope  $-5/7$ .
- 9) Find the intercepts made by the line  $4x - 9y + 36 = 0$  on the coordinate axes.
- 10) Find the slope and y intercept of  $\sqrt{3} + (1-\sqrt{3})y = 3$ .
- 11) Find the equation of the straight line which has slope  $-5/4$  and passing through the point  $(-1, 2)$ .
- 12) Find the equation of the straight line passing through  $(1, -4)$  and has intercepts which are in the ratio  $2 : 5$ .
- 13) Find the slope of the straight line  $6x + 8y + 7 = 0$ .
- 14) Find the slope of the line which is perpendicular to  $2x - 3y + 8 = 0$ .

- 15) Show that the straight line  $2x + 3y - 8 = 0$  and  $4x + 6y + 18 = 0$  are parallel.
- 16) Show that the straight line  $x - 2y + 3 = 0$  and  $6x + 3y + 8 = 0$  are perpendicular.
- 17) If the straight line  $12y = -(p+3)x + 12$ ,  $12x - 7y = 16$  are perpendicular then find "p".
- 18)  $5x + 23y + 14 = 0$  and  $23x - 5y + 9 = 0$  check whether the given lines are parallel (or) perpendicular.
- 19) Find the equation of a straight line perpendicular to the line  $y = 4/3x - 7$  and passing through the point  $(7, -1)$ .
- 20) Find the equation of a line through the given pairs of points  $(2, 2/3)$  and  $(-1/2, 2)$ .
- 21) Find the equation of the straight line passing thorough  $(5, -3)$  and  $(7, -4)$ .
- 22) Find the equation of a straight line whose,
  - i) Slope is 5 and y intercept is  $-9$
  - ii) Inclination is  $45^\circ$  and y intercept is  $11$ .
- 23) If the three points  $(3, -1)$ ,  $(a, 3)$  and  $(1, -3)$  are collinear, find the value of  $a$ .
- 24) Find the slope of a line joining the given points.  $(-1/3, 1/2)$  and  $(2/7, 3/7)$ .
- 25) i) What is the slope of a line whose inclination is  $30^\circ$   
 ii) What is the inclination of a line whose slope is  $\sqrt{3}$ .

=====

Presentation : Mr. M. VIJAYAKUMAR., B.Sc., M.Ed.,  
 9600545700  
 Design : Mr. K. VIJAYAMANIKANDAN., BBA., PGDIT., CTTC.,  
 9994011074

**TEST No : 15 K.M.K.A. MATRIC. HR. SEC. SCHOOL, THIRUTHANGAL.**

**STD : X**

**Exercise - 8.3 & 8.4**

**Marks : 50**

**I) Answer the following questions : (5 Marks)**

**10 x 5 = 50**

- 1) In a class of 50 students 28 opted for NCC, 30 opted for NSS and 18 opted both NCC and NSS. One of the students is selected at random. Find the probability that
  - i) The students opted for NCC but not NSS.
  - ii) The students opted for NSS but not NCC.
  - iii) The students opted exactly one of them.
- 2) Two dice are rolled. Find the probability that the sum of outcomes is
  - i) The sum as a prime number      ii) Equal to 4      iii) Greater than 10
  - iv) Less than 10      v) a doubled
- 3) From a well shuffled pack of 52 cards. One card is drawn at random. Find the probability of getting
  - i) Red Card      ii) Heart Card
  - iii) Red King      iv) Jack Card      v) Number Card
- 4) Three fair coins are tossed together. Find the probability of getting
  - a) all heads      b) at least one tail
  - c) at most one head      d) at most two tail
- 5) The king and queen of diamonds, queen and jack and king of spades are removed from a deck of 52 playing cards and then well shuffled. Now one card is drawn at random from the remaining cards.
  - i) a clavor      ii) a queen of red card      iii) a king of black card
- 6) A card is drawn from a pack of 52 cards. Find the probability of getting a king (or) a heart (or) a red card .

- 7) Three unbiased coins are tossed once. Find the probability of getting most 2 tails (or) at least 2 heads.
- 8) From a well – shuffled pack of 52 cards, a card is drawn at random Find the probability of it being either a red king (or) a black queen
- 9) A coin is tossed thrice. Find the probability of getting exactly two h (or) at least one tail (or) two consecutive heads.
- 10) Two dice are rolled once. Find the probability of getting an even number on the first die (or) a total of face sum 8.

=====



Presentation : Mr. M. VIJAYAKUMAR., B.Sc.,M.Ed.,  
9600545700  
Design : Mr. K. VIJAYAMANIKANDAN., BBA.,PGDI  
9994011074

**TEST No : 16 K.M.K.A. MATRIC. HR. SEC. SCHOOL, THIRUTHANGAL.**

**STD : X**

**Marks : 50**

**I) Answer the following questions : (5 Marks)**

**10 x 5 = 50**

- 1) If  $f(x) = x - 1$ ,  $g(x) = 3x + 1$  and  $h(x) = x^2$  then show the  
 $(f \circ g) \circ h = f \circ (g \circ h)$ .
- 2) If  $f: R \rightarrow R$  and  $g: R \rightarrow R$  are defined by  $f(x) = x^5$ ,  $g(x) = x^4$  then check if  
 $f, g$  are one - one and  $f \circ g$  is one - one?
- 3) Let  $A =$  The set of all natural numbers less than 8,  
 $B =$  The set of all prime numbers less than 8,  
 $C =$  The set of even prime number.  
 Verify that, i)  $(A \cap B) \times C = (A \times C) \cap (B \times C)$   
 ii)  $A \times (B - C) = (A \times B) - (A \times C)$
- 4) If  $A = \{x \in N \mid 1 < x < 4\}$ ,  $B = \{x \in W \mid 0 \leq x < 2\}$  and  $C = \{x \in N \mid x < 3\}$ .  
 Verify that i)  $A \times (B \cup C) = (A \times B) \cup (A \times C)$   
 ii)  $A \times (B \cap C) = (A \times B) \cap (A \times C)$
- 5) Let  $A = \{1, 2, 3, 7\}$  and  $B = \{3, 0, -1, 7\}$ , which of the following are  
 relation from  $A$  to  $B$ ?  
 i)  $R_1 = \{(2, 1), (7, 1)\}$  ii)  $R_2 = \{-1, 1\}$   
 iii)  $R_3 = \{(2, -1), (7, 7), (1, 3)\}$  iv)  $R_4 = \{(7, -1), (0, 3), (3, 3), (0, 7)\}$
- 6) Represent each of the given relation by a) an arrow diagram  
 b) a graph and c) a set in roster form, wherever possible.  
 i)  $\{(x, y \mid x = 2y, x \in \{2, 3, 4, 5\}, y \in \{1, 2, 3, 4\})\}$   
 ii)  $\{(x, y \mid y = x + 3, x, y \text{ are natural numbers} < 10)\}$

7) A function  $f: [-5, 9] \rightarrow R$  is defined as follows.

$$f(x) = \begin{cases} 6x + 1 & -5 < x < 2 \\ 5x^2 - 1 & 2 < x < 6 \\ 3x - 4 & 6 < x < 9 \end{cases} \quad \text{Find the follows}$$

- i)  $f(-3) + f(2)$  ii)  $f(7) - f(1)$
- iii)  $2f(4) + f(8)$  iv)  $\frac{2f(-2) - f(6)}{f(4) + f(-2)}$

8) Let  $f: A \rightarrow B$  be a function defined by  $A = \{2, 4, 6, 10, 12\}$ ,

$B = \{0, 1, 2, 4, 5, 9\}$  Represent  $f$  by

- i) set of ordered pairs ii) a table
- iii) an arrow diagram iv) a graph

9) A function  $f$  is defined by  $f(x) = 2x - 3$ .

$$\text{i) find } \frac{f(0) + f(1)}{2} \quad \text{ii) find } x \text{ such that } f(x) = 0$$

$$\text{iii) find } x \text{ such that } f(x) = x \quad \text{iv) find } x \text{ such that } f(x) = f(1 - x)$$

10) The data in the adjacent table depicts the length of a person forehead and their corresponding height. Based on this data, a student finds a relationship between the height ( $y$ ) and the forehead length ( $x$ ) as  $y = ax + b$ , where  $a, b$  are constants.

- i) Find  $a$  and  $b$
- ii) Find the height of a person whose forehead length is 40 m
- iii) Find the length of forehead of a person if the height is 53.3 inches.

=====

Presentation : Mr. M. VIJAYAKUMAR., B.Sc., M.Ed.,  
 9600545700  
 Design : Mr. K. VIJAYAMANIKANDAN., BBA., PGDIT., CTC.,  
 9994011074

**TEST No : 17 K.M.K.A. MATRIC. HR. SEC. SCHOOL, THIRUTHANGAL.****STD : X****Marks : 50****I) Answer the following questions :****25 x 2 = 50**1) Let  $X = \{3, 4, 6, 8\}$ . Determine whether the relation.

$$R = \{(x, f(x)) \mid x \in X, f(x) = x^2 + 1\}$$

2) Let  $f(x) = 2x + 5$ . If  $x \neq 0$  then find  $\frac{f(x+2) - f(2)}{x}$ .3) Function  $f$  is defined by  $f(x) = 3 - 2x$ . Find  $x$  such that  $f(x^2) = (f(x))^2$ .

4) Define : Function.

5) Let  $X = \{1, 2, 3, 4\}$  and  $Y = \{2, 4, 6, 8, 10\}$  and  $R = \{(1, 2), (2, 4), (3, 6), (4, 8)\}$ . Show that  $R$  is a function and find its domain. Co-domain and range.6) If  $A = \{2, -2, 3\}$  and  $B = \{1, -4\}$  then find  $A \times B$ ,  $A$  and  $B \times A$ .7) Let  $B \times A = \{(-2, 3), (-2, 4), (0, 3), (0, 4), (3, 3), (3, 4)\}$  then find  $A$  and  $B$ .8) If  $A \times B = \{(3, 2), (3, 4), (5, 2), (5, 4)\}$  then find  $A$  and  $B$ .9) If  $A = \{1, 2, 3\}$  and  $B = \{x \mid x \text{ is a prime number less than } 10\}$  then find  $A \times B$  and  $B \times A$ .10)  $A = \{1, 3, 5\}$ ,  $B = \{2, 3\}$  then i) Find  $A \times B$  and  $B \times A$  ii) Is  $A \times B = B \times A$ ?11) Find  $f \circ g$  and  $g \circ f$  when  $f(x) = 2x + 1$  and  $g(x) = x^2 - 2$ .12) If  $f(x) = 2x - 1$ ,  $g(x) = \frac{x+1}{2}$  show that  $f \circ g = g \circ f = x$ .13) If  $f(x) = x^2 - 1$ ,  $g(x) = x - 2$  find  $a$ , if  $g \circ f(a) = 1$ .14) Find  $k$ , if  $f \circ f(k) = 5$ , where  $f(k) = 2k - 1$ .15). Let  $f(x) = x^2 - 1$  find,  $f \circ f \circ f$ .16) Let  $A = \{1, 2, 3, 4, \dots, 4, 5\}$  and  $R$  be the relation defined as "Is square of a number" on  $A$ . Write  $R$  as a subset of  $A \times A$ . Also, find the domain and range of  $R$ .17) A Relation  $R$  is given by the set  $\{x, y\} / y = x + 3, x \in \{0, 1, 2, 3, 4, 5\}$ . Determine its domain and range.

18) Define : Null relation.

19) The arrow diagram shows a relationship between the sets  $P$  and  $Q$ . Write the relation in i) Set builder form ii) Roster form iii) What is the domain and range of  $R$ ?20) Let  $A = \{3, 4, 7, 8\}$  and  $B = \{1, 7, 10\}$  which of the following sets are relations from  $A$  to  $B$ ?i)  $R_1 = \{(3, 7), (4, 7), (7, 10), (8, 1)\}$  ii)  $R_2 = \{(3, 1), (4, 12)\}$ 21) Represent the function  $f = \{(1, 2), (2, 2), (3, 2), (4, 3), (5, 4)\}$  through i) an arrow diagram ii) a table form iii) a graph22) Let  $A = \{1, 2, 3, 4\}$  and  $B = N$ , Let  $f: A \rightarrow B$  defined by  $f(x) = x^3$  then, i) find the range of  $f$  ii) Identify the type of function.23) Let  $A = \{-1, 1\}$ ,  $B = \{0, 2\}$ . If the function  $f: A \rightarrow B$  defined by  $f(x) = ax + b$  is an onto function. Find "a" and "b".24)  $A = \{-2, -1, 0, 1, 2\}$  and  $f: A \rightarrow B$  is an onto function defined by  $f(x) = x^2 + x + 1$ , then find  $B$ .25) Let  $f$  be the function from  $R$  to  $R$  defined by  $f() = 3x - 5$ . Find the values of "a" and "b" given that  $(a, 4)$  and  $(1, b)$  belongs to  $f$ .

=====

Presentation : Mr. M. VIJAYAKUMAR., B.Sc., M.Ed.,  
9600545700  
Design : Mr. K. VIJAYAMANIKANDAN., BBA., PGDIT., CTC.,  
9994011074



**K.M.K.A. MATRIC. HR. SEC. SCHOOL, THIRUTHANGAL.**

**STD : X UNIT - 2.9, 3.7, 3.8, 3.17, 3.18, 3.19 & 8.3 Marks : 50**  
**MODEL TEST I**

**I) Answer the following questions :**

**5 x 2 = 10**

1) Find the sum of  $6^2 + 7^2 + 8^2 + 21^2$ .

2) Find the sequence root of  $\frac{400 x^4 y^{12} z^{16}}{100 x^8 y^4 z^4}$

3) If  $A \begin{pmatrix} 1 & 2 & 0 \\ 3 & 1 & 5 \end{pmatrix}$ ,  $B \begin{pmatrix} 8 & 3 & 1 \\ 2 & 4 & 1 \\ 5 & 3 & 1 \end{pmatrix}$  find AB.

4) If  $A \begin{pmatrix} 0 & 4 & 9 \\ 8 & 3 & 7 \end{pmatrix}$ ,  $B \begin{pmatrix} 7 & 3 & 8 \\ 1 & 4 & 9 \end{pmatrix}$  find the value of  $3A - 9B$ .

5) If A is an event of random experiment such that  $P(A) : P(\bar{A}) = 17 : 15$  and  $n(S) = 640$  then find i)  $P(A)$  ii)  $n(\bar{A})$

**II) Answer the following questions :**

**8 x 5 = 40**

6) Three fair coins are tossed together. Find the probability of getting

- i) All heads ii) at least one tail  
iii) at most one head iv) at most two tails

7) From a well shuffled pack of 52 cards. One card is drawn at random.

- Find the probability of getting i) red card ii) heart card  
iii) red king iv) face card v) number card

8) If  $A = \begin{pmatrix} 1 & 1 \\ -1 & 3 \end{pmatrix}$ ,  $B = \begin{pmatrix} 1 & 2 \\ -4 & 2 \end{pmatrix}$ ,  $C = \begin{pmatrix} -7 & 6 \\ 3 & 2 \end{pmatrix}$  verify that

$$A(B+C) = AB + AC.$$

9)  $A = \begin{pmatrix} 5 & 2 & 9 \\ 1 & 2 & 8 \end{pmatrix}$ ,  $B = \begin{pmatrix} 1 & 7 \\ 1 & 2 \\ 5 & -1 \end{pmatrix}$  verify that  $(AB)^T = B^T A^T$ .

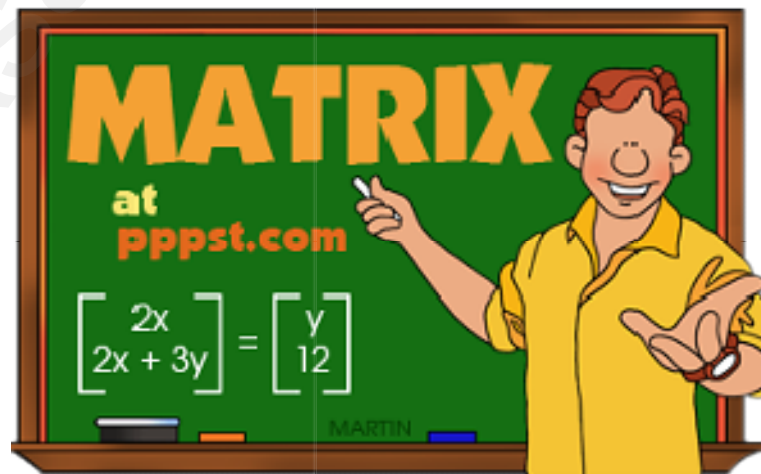
10) If  $x^4 - 8x^3 + mx^2 + nx + 16$  is a perfect square. Find the values of "m" and "n".

11) Find the square root of  $(2x^2 + \frac{17}{6}x + 1) (\frac{3}{2}x^2 + 4x + 2) (\frac{4}{3}x^2 + \frac{11}{3})$ .

12) Rekha has 15 square colour papers of sizes

10 cm, 11 cm, 12 cm ..... 24 cm. How much area can be decorated these colour papers.

13) Find the sum of the series  $(2^3 - 1^3) + (4^3 - 3^3) + (6^3 - 5^3) + \dots$  to i) n terms ii) 8 terms



**Presentation : Mr. M. VIJAYAKUMAR., B.Sc.,M.Ed.,**  
**9600545700**

**Design : Mr. K. VIJAYAMANIKANDAN., BBA.,PGDIT.,CTTC**  
**9994011074**

**K.M.K.A. MATRIC. HR. SEC. SCHOOL, THIRUTHANGAL.**  
**UNIT - I, UNIT - II (2.1 to 2.5 & 2.9),**  
**UNIT - III (3.2, 3.8, 3.17 to 3.19), UNIT - V (5.1 & 5.2)**  
**UNIT - VIII (8.3 & 8.4)**

STD : X

MODEL TEST II

Marks : 100

**I) Answer the following questions : (Any 13)****13 x 2 = 26**

- 1)  $A = \{2, -2, 3\}$  and  $B = \{1, -4\}$  find  $A \times B$ ,  $A \times A$  and  $B \times A$ .
- 2) Show that the function  $f: N \rightarrow N$  define by  $f(x) = 2x-1$  is one - one but not onto.
- 3) Find  $k$  if  $f \circ f(k) = 5$  where  $f(k) = 2k - 1$ .
- 4) Find the H.C.F of 396, 504, 636 (using euclids division Algorithm).
- 5) If  $3+k$ ,  $8 - K$ ,  $5k+1$  are in A.P then find  $k$ .
- 6) Find the greatest number that will divide 445 and 572 using remainders 4 and 5 respectively.
- 7) If  $13824 = 2a \times 3b$  find "a and b".
- 8) Compute  $x$ , such that  $104 \equiv x \pmod{19}$ .
- 9) Construct a  $3 \times 3$  matrix whose elements are  $a_{ij} = 12j^2$ .
- 10) If  $A = \begin{pmatrix} 0 & 4 & 9 \\ 8 & 3 & 7 \end{pmatrix}$ ,  $B = \begin{pmatrix} 7 & 3 & 8 \\ 1 & 4 & 9 \end{pmatrix}$  value of  $B - 5A$ .
- 11) If  $A = \begin{pmatrix} 2 & 1 \\ 1 & 3 \end{pmatrix}$ ,  $B = \begin{pmatrix} 2 & 0 \\ 1 & 3 \end{pmatrix}$  find  $AB$  and  $BA$  then verify  $AB = BA$ .
- 12) Show that the points  $P(-1.5, 3)$ ,  $Q(6, -2)$ ,  $R(-3, 4)$  are collinear.
- 13) The line through the points  $(-2, a)$  and  $(9, 3)$  has slope  $-\frac{1}{2}$ .  
Find the value of  $a$ .
- 14) What is the probability of drawing either a king (or) queen in a single draw from a well shuffled pick of 52 cards.
- 15) If  $A$  and  $B$  are two events such that  $P(A) = \frac{1}{4}$ ,  $P(B) = \frac{1}{2}$  and  $P(A \text{ and } B) = \frac{1}{8}$ . Find i)  $P(A \text{ or } B)$ , ii)  $P(\text{not } A \text{ and not } B)$
- 16) What is the probability that a leap year select at random will contain 53 Saturdays.

**II) Answer the following questions : (Any 10)****10 x 5 = 50**

- 17) Let  $A = \{x, \in \frac{W}{x} < 2\}$ ,  $B = \{x \in N / 1 < x \leq 4\}$  and  $c = \{3, 5\}$  then  
 $(A \cup B) \times C = (A \times C) \cup (B \times C)$ .
- 18)  $f(x) = x - 4$ ,  $g(x) = x^2$  and  $b(x) = 3x - 5$ . Show that  $(f \circ g) \circ h = f \circ (g \circ h)$ .
- 19) If  $f(x) = 2x+3$ ,  $g(x) = 1 - 2x$  and  $b(x) = 3x$ , prove that  $f \circ (g \circ h) = (f \circ g) \circ h$ .
- 20) In an A.P sum of four consecutive terms is 28 and their sum of their square is 276. Find the four numbers.
- 21) The ratio of 6<sup>th</sup> and 8<sup>th</sup> term of an A.P is 7 : 9. Find the ratio of 9<sup>th</sup> term to 13<sup>th</sup> term.
- 22) Find the G.C.D of  $6x^3 - 30x^2 + 60x - 48$  and  $3x^3 - 12x^2 + 21x - 18$ .
- 23) If  $9x^4 + 12x^3 + 28x^2 + ax + b$  is a perfect square then find the values of "a" and "b".
- 24) If  $A = \begin{pmatrix} 1 & -1 & 2 \end{pmatrix}$ ,  $B = \begin{pmatrix} 1 & -1 \\ 2 & 1 \\ 1 & 3 \end{pmatrix}$  and  $C = \begin{pmatrix} 1 & 2 \\ 2 & -1 \end{pmatrix}$  then show that  
 $(AB)C = A(BC)$ .
- 25) If  $A = \begin{pmatrix} 5 & 2 & 9 \\ 1 & 2 & 8 \end{pmatrix}$  and  $B = \begin{pmatrix} 1 & 7 \\ 1 & 2 \\ 5 & -1 \end{pmatrix}$  then verify that  $(AB)^T = B^T A^T$ .
- 26) A Coin is tossed trice. Find the probability of getting exactly two heads (or) at least one tail (or) two consecutive heads.
- 27) A card is drawn from a pack of 52 cards. Find the probability of getting a king (or) a heart (or) a red card.
- 28) Two dice are rolled. Find the probability that the sum of outcomes is  
 i) equal to 4, ii) greater than 10, iii) less than 13,  
 iv) The sum as a prime number, v) the product as a prime number

**III) Answer the following questions :****4 x 6 = 24**

- 29) Construct triangle similar to give triangle ABC with its sides equal to  $\frac{6}{5}$  of the corresponding sides of the triangle ABC (Scale factor  $\frac{6}{5} > 1$ ).
- 30) Construct a  $\Delta ABC$  such that  $AB = 5.5$  cm,  $C = 25^\circ$  and the altitude from C to AB is 4 cm.
- 31) Draw the graph of  $y = 2x^2 - 3x - 5$  and hence solve  $2x^2 - 4x - 6 = 0$ .
- 32) Solve  $x^2 - 6x + 9 = 0$  state their nature of solution.

Presentation : Mr. M. VIJAYAKUMAR., B.Sc., M.Ed.,  
 9600545700  
 Design : Mr. K. VIJAYAMANIKANDAN., BBA., PGDIT., CTC.,  
 9994011074

**K.M.K.A. MATRIC. HR. SEC. SCHOOL, THIRUTHANGAL.****STD : X****UNIT - 2, 3, 5 & 7****Marks : 100****TYPE - I****MODEL TEST III****I) Answer the following questions : (Any 13)****13 x 2 = 26**

- 1) Find the H.C.F. of 396, 504, 969 (Using Euclid's division Algorithm).
- 2) "a" and "b" are two positive integers such that  $a^b + b^a = 800$ . Find "a" and "b".
- 3) If  $3+k$ ,  $18-k$ ,  $5k+1$  are in A.P, then find K.
- 4) Find the sum of first 28 terms of an A.P whose nth term is  $4n - 3$ .
- 5) In a G.P the 9<sup>th</sup> term is 32805 and 6<sup>th</sup> term is 1215. Find the 12<sup>th</sup> term.
- 6) Find the excluded value of  $\frac{x^2+6x+8}{x^2+x-2}$ .
- 7) Simply  $\frac{P^2-10P+}{P-7} \times \frac{P^2+P-21}{(P-3)^2}$ .
- 8) Solve  $2x^2 - 2\sqrt{6}x + 3 = 0$ .
- 9) Find the values of "k" for which the quadratic equation  $Kx^2 - (8k+4)x+81=0$  has real and equal roots.
- 10) Without using Pythagoras theorem, show that the points (1, -4) (2,-3), (4, 7) from a right angled triangle.
- 11) Find the equation of a straight line perpendicular to the line  $y = \frac{4}{3}x - 7$  and passing through the point (7, - 1).
- 12) Show that the straight lines  $2x+3y-8=0$  and  $4x+6y+18=0$  are parallel.
- 13) If the T.S.A of cone of radius 7 cm is  $704 \text{ cm}^2$  then find its slant height.
- 14) The volume of a solid right circular cone is  $11088 \text{ cm}^3$ . If its height is 24 cm then find the radius of the cone.
- 15) A cone of height 24 cm is made up of modeling clay. A child reshapes it in the form of a cylinder of same radius as cone. Find the height of the cylinder.
- 16) The volume of a cylindrical water tank is  $1.078 \times 10^6$  litres. If the diameter of the tank is 2m. Find its height.

**II) Answer the following questions : (Any 10)****10 x 5 = 50**

- 17) The internal and external diameter of a hollow sphere are 6cm and 10 cm respectively. If it is melted and recast into a solid cylinder of a diameter 14 cm, then find the height of the cylinder.

- 18) A Capsule is in the shape of a cylinder with the hemisphere stuck each of its ends. If the length of the entire capsule is 12 mm and the diameter of the capsule is 3 mm, how much medicine it can hold?
  - 19) A girl wishes to prepare birthday caps in the form of right circular cones for her birthday party, using a sheet of paper whose area is  $5720 \text{ cm}^2$ . How many caps can be made with radius 5 cm and height 12 cm.
  - 20) Find the equation of a straight line through the intersection of lines  $5x-6y=2$ ,  $3x+2y=10$  and perpendicular to the line  $4x-7y+13=0$ .
  - 21) Prove analytically that the line segment joining the mid points of sides of a triangle is parallel to the third side and is equal to half of length.
  - 22) A line makes positive intercepts on coordinate axes whose sum is and it passes through (- 3, 8). Find its equation.
  - 23) The product of three consecutive terms of Geometric progression 343 and their sum is  $\frac{91}{3}$ . Find the three terms.
  - 24) The sum of first n, 2n and 3n terms of an A.P are  $S_1, S_2, \dots, S_3$  respectively prove that  $S_3 = 3(S_2 - S_1)$ .
  - 25) If an A.P sum of four consecutive terms is 28 and their sum of the squares is 276. Find the four terms.
  - 26)  $\frac{1}{x^2-5x+6} + \frac{1}{x^3-3x+2} - \frac{1}{x^2-8x+15}$  Simplify.
  - 27) Solve  $\frac{x}{x-1} + \frac{x-1}{x} = 2\frac{1}{2}$ .
  - 28) Solve  $px^2 - (p+q)^2x + (p+q)^2 = 0$ .
  - 29) Prove that the equation  $x^2(p^2+q^2)+2x(pr+qs) + (r^2+s^2)=0$  has no roots. If  $ps = pr$ , then show that roots are real and equal.
- III) Answer the following questions : 4 x 6 = 24**
- 30) Draw the graph of  $y = x^2+3x+2$  and use it to solve  $x^2+2x+1=0$ .
  - 31) Solve  $x^2 - 9x+20=0$  (State their nature of solution).
  - 32) Construct a triangle similar to a given triangle PQR with its sides to  $\frac{7}{3}$  of the triangle PQR (Scale factor  $\frac{7}{3} > 1$ ).
  - 33) Construct a  $\Delta PQR$  such that  $QR = 6.5 \text{ cm}$ ,  $\angle P = 60^\circ$  and the altitude from P to QR is of length 4.5 cm.

## K.M.K.A. MATRIC. HR. SEC. SCHOOL, THIRUTHANGAL.

STD : X UNIT - 3 (3.1, 3.2, 3.6, 3.8, 3.13, 3.14) Marks : 50  
TYPE - II MODEL TEST IV

I) Answer the following questions : (5 Marks) 10 x 5 = 50

- 1) Solve  $\frac{1}{2x} + \frac{1}{4y} - \frac{1}{3x}$ ;  $\frac{1}{x} = \frac{1}{3y}$ ;  $\frac{1}{x} - \frac{1}{5y} + \frac{4}{z} = 2\frac{2}{5}$ .
- 2) Find the GCD of  $6x^3 - 30x^2 + 60 - 48$  and  $3x^3 - 12x^2 + 21x - 18$ .
- 3) If  $A = \frac{x}{x+1}$ ,  $B = \frac{1}{x+1}$ , prove that  $\frac{(A+B)^2 + (A-B)^2}{A \div B} = \frac{2(x^2+1)}{x(x+1)^2}$ .
- 4) Find the value of "a" and "b"  $ax^4 + bx^3 + 361x^2 + 220x + 100$ .
- 5) If the roots of the equation  $(c^2 - ab)x^2 - 2(a - bc)x + b^2 - ac = 0$  are real and equal. Prove that either  $a = 0$  (or)  $a^3 + b^3 + c^3 = 3abc$ .
- 6) If  $\alpha, \beta$  are the roots of the equation  $2x^2 - x - 1 = 0$  then form the equation whose roots are i)  $\alpha^2, \beta^2$  ii)  $2\alpha + \beta, 2\beta + \alpha$ .
- 7) If  $\alpha$  and  $\beta$  are the roots of  $x^2 + 7x + 10 = 0$ . Find the value of  
i)  $\frac{\alpha}{\beta} + \frac{\beta}{\alpha}$  ii)  $\alpha^3 - \beta^3$  iii)  $\frac{\alpha^2}{\beta} + \frac{\beta^2}{\alpha}$ .
- 8) The sum of the digit of a three digit number is 11 If the digits are reversed, the new number is 46 more than five times the former number. If the hundreds digit is twice the tens digit is equal to the units digit then find the original three digit number.
- 9) Find the G.C.D. of  $3x^4 + 6x^3 - 12x^2 - 24x$ ,  $4x^4 + 14x^3 + 8x^2 - 8x$ .
- 10) If the roots of  $(a - b)x^2 + (b - c)x + (c - a) = 0$  are real and equal then P.T b, a, c are in A.P.

Presentation : Mr. M. VIJAYAKUMAR., B.Sc., M.Ed.,  
9600545700

Design : Mr. K. VIJAYAMANIKANDAN., BBA., PGDIT., CTTC.,  
9994011074

## K.M.K.A. MATRIC. HR. SEC. SCHOOL, THIRUTHANGAL.

STD : X UNIT - 1.1, 3.2, 3.8, 8.3 & 8.4 Marks : 50  
TYPE - III MODEL TEST V

I) Answer the following questions : (5 Marks) 10 x 5 = 50

- 1) Find the G.C.D. of  $3x^4 + 6x^3 - 12x^2 - 24$ ,  $4x^4 + 14x^3 + 8x^2 - 8x$ .
- 2)  $x^4 - 1 =, x^3 - 11x^2 + x - 11$  find the G.C.D.
- 3) Find the values of "a" and "b"  $4x^4 - 12x^3 + 37x^2 + bx + a$ .
- 4) Find the values of "m" and "n"  $36x^4 - 60x^3 + 61x^2 - mx + n$ .
- 5) A card is drawn from a pack of 52 cards . Find the probability of getting a king (or) heart (or) a red card.
- 6) A coin is tossed thrice. Find the probability of getting exactly two heads (or) at least one tail (or) two consecutive heads.
- 7) Three fair coins are tossed together. Find the probability of getting  
i) all heads ii) at least one tail  
iii) at most one head iv) at most two tails
- 8) From a well shuffled pack of 52 cards, one card is drawn at random. Find the probability of getting  
i) red card ii) heart card iii) red king  
iv) face card v) number card
- 9) Let  $A = \{x \in W / x < 2\}$ ,  $B = \{x \in N / 1 < x \leq 4\}$  and  $C = \{3, 5\}$ , verify that  $A \times (B \cap C) = (A \times B) \cap (A \times C)$ .
- 10) Let  $A =$  The set of all Natural number less than 8  
 $B =$  The set of all Prime numbers less than 8  
 $C =$  The set of Even Prime number, verify that  $A \times (B - C) = (A \times B) - (A \times C)$ .

Presentation : Mr. M. VIJAYAKUMAR., B.Sc., M.Ed.,  
9600545700

Design : Mr. K. VIJAYAMANIKANDAN., BBA., PGDIT., CTTC.,  
9994011074