

# Ennum Ezhuthum – Mathematics– 2023 – 24

Term-I – Summative Assessment

Class – 5

Name : \_\_\_\_\_

Time: 2 hours


Class & Sec : \_\_\_\_\_

Marks : 60

## Arumbu

I. Choose the correct answer

1) If Kumar's toy is round, then choose Kumar's toy.



2) Choose the pattern that comes next.



3) Choose the number to complete the subtraction fact.

$$8 - \square = 6$$

a) 4

b) 5

c) 6

d) 7

III. True? or False?

4) 


4		6
---	--	---

 The missing number is 7. \_\_\_\_\_

5) A  has 3 vertices. \_\_\_\_\_

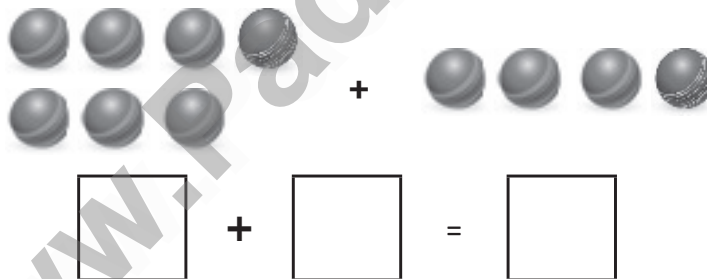
## IV. Answer the following.

6) Arrange the objects based on lengths by writing 1, 2, 3.



Number of  $\triangle$  \_\_\_\_\_, Number of  $\bigcirc$  \_\_\_\_\_, Number of  $\square$  \_\_\_\_\_.

8) Write the count and find the sum.



9) Subtract.

$6 - 3 = \square$
-------------------

10) Divya had 7 dolls. Ramya had 3 dolls. How many dolls do they both have in all?

<input style="width: 40px; height: 30px;" type="text"/>	+	<input style="width: 40px; height: 30px;" type="text"/>	=	<input style="width: 40px; height: 30px;" type="text"/>
---	---	---	---	---

# Ennum Ezhuthum – Mathematics– 2023 – 24

## Term-I – Summative Assessment

Class – 5

Name : \_\_\_\_\_

Time: 2 hours

Class & Sec : \_\_\_\_\_


Marks : 60

### Mottu

#### I. Choose the correct answer.

1) Which object would you choose to trace a circle?



2)  Choose the number in the picture which has 4 ones.

a) 54

b) 41

c) 43

d) 14

#### II. Fill in the blanks.

3) Number of days in the month which comes after the month of May is \_\_\_\_\_

#### III. True? or False?

4) 36 The place value of the underlined digit is tens. \_\_\_\_\_.

5) There are 28/29 days in the month which comes after January. \_\_\_\_\_.

#### IV. Answer the following.

6) Find the number of ways in which 8 guavas can be kept in two plates.



\_\_\_\_\_



Find the difference between the sixth and the third balloon from the left.

8) Observe the pattern and complete



9)  has ₹ 55 How much more money does he need to buy  for ₹ 85?

10)



i) If Ram is in the 14<sup>th</sup> place, the order of the person standing in front of Ram is \_\_\_\_\_

ii) The order of the person standing next to Ram is \_\_\_\_\_

# Ennum Ezhuthum – Mathematics– 2023 – 24

## Term-I – Summative Assessment

Class – 5

Name : \_\_\_\_\_

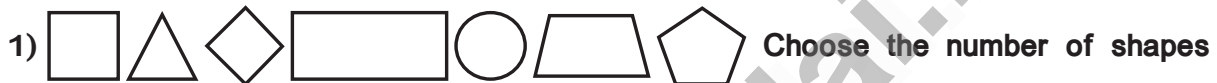
Time: 2 hours

Class & Sec : \_\_\_\_\_

Marks : 60

### Malar

#### I. Choose the correct answer.



which do not have vertices.

a) 0

b) 1

c) 2

d) 3



a) 7

b) 8

c) 9

d) 10

#### II. Fill in the blanks.

3)  $260 + 430 =$  \_\_\_\_\_.

4) The face value of the number underlined in 7979 is \_\_\_\_\_.

5) The number with 6 hundreds among 796, 469, 694 is \_\_\_\_\_.

#### III. True? or False?

6) 574 is an even number. \_\_\_\_\_

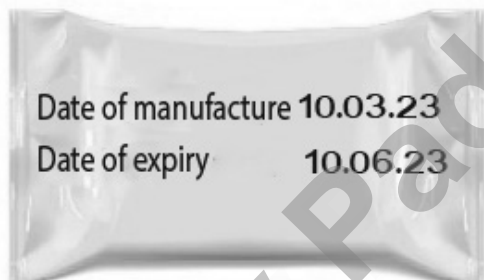
7) The appropriate unit used to measure the length of your mathematics book is  
km. \_\_\_\_\_

**IV. Answer the following.**

8) In an office, if there are 312 persons working in the first floor and 218 persons working on the ground floor, find the total number of persons working in the office.

9) If there are 480 pigeons and 320 parrots in a zoo, how many pigeons were more than the parrots?

10)



- i) The above item was manufactured in the month of \_\_\_\_\_
- ii) The above item was expired in the month of \_\_\_\_\_
- iii) How many months are there in between the months of manufacture and expiry \_\_\_\_\_

**Ennum Ezhuthum – Mathematics– 2023 – 24****Term-I – Summative Assessment****Class – 5**

Name : \_\_\_\_\_

Time: 2 hours

Class &amp; Sec : \_\_\_\_\_

Marks : 60

**Class – 5****I. Choose the correct answer**1)  $8008 > 3003 > \text{_____} > 1054 > 809$ 

a) 1054

b) 2561

c) 3003

d) 8008

2) 1, 3, 6, \_\_\_\_\_, 15

Choose the missing triangular number.

a) 9

b) 10

c) 11

d) 12

**II. Fill in the blanks**

3) There are \_\_\_\_\_ centimeter in one meter.

**III. True or False**

4) The letter in which an acute angle is formed is T.

5) The letter **E** has Right angles in it**IV. Answer the following**

6) The price of a fan is ₹ 1785. If the price of a mixer grinder is ₹ 4,525 more than the fan, find the cost of both the fan and the mixer grinder.

7) Multiply and find the answer.

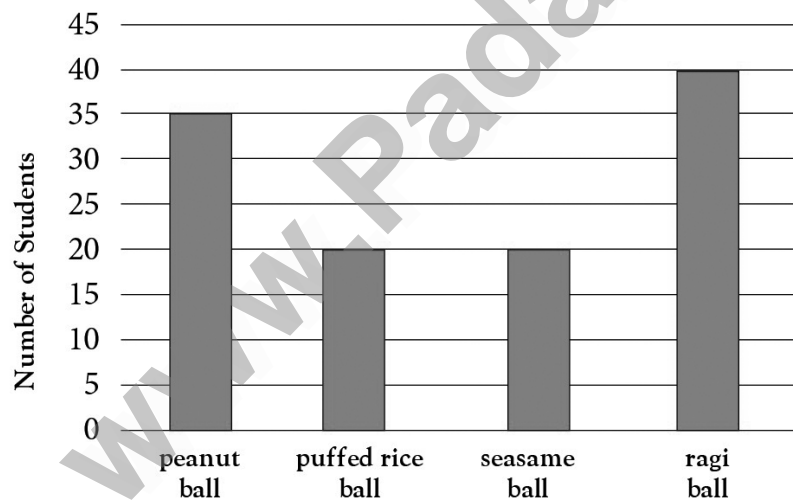
$$987 \times 23$$

8) Divide and answer

$$8505 \div 5$$

9) If Mani walks a distance of 2km 750 m in a day, find the distance walked by him in a week.

10)



- How many students like ragi balls? \_\_\_\_\_.
- Name the food items equally liked by the students. \_\_\_\_\_.
- Find the number of students who liked ragi balls more than peanut balls. \_\_\_\_\_.