

Learning Outcome / Competency Based Test

Class : 6

--	--	--	--	--	--	--	--	--	--

EMIS _____

Marks : 25

Medium : English

தமிழ்

Time : 40 mins

கீழ்க்காணும் வினாக்களுக்கு விடையளி:

1. கீழ்க்காணும் இலக்கண விதிக்கு உட்பட்டு வரும் இலக்கணச் சொல்லைத் தேர்ந்தெடு?

"தனக்கு முன் ஒரு குறில் எழுத்தையும் தனக்குப்பின் ஒரு வல்லின உயிர்மெய் எழுத்தையும் பெற்றுச் சொல்லின் இடையில் மட்டுமே வரும் "

அ ஆய்தம்

ஆ குற்றியலுகரம்

இ உயிரளபெடை

ஈ குற்றியலிகரம்

2. கீழ்க்காணும் கூற்றையும் காரணத்தையும் ஆராய்ந்து சரியான தெரிவைத் தேர்ந்தெடு.

கூற்று: உயிர்மெய் எழுத்து சார்பெழுத்துகளுள் ஒன்று.

காரணம்: மெய் எழுத்துகளும் உயிர் எழுத்துகளும் ஒன்றுடன் ஒன்று சேர்வதால் உயிர்மெய் எழுத்துக்கள் தோன்றுகின்றன.

அ. கூற்று மட்டும் சரி.

ஆ. கூற்று மட்டும் தவறு.

இ. கூற்றும் காரணமும் சரி.

ஈ. கூற்றும் காரணமும் தவறு.

3. அறம் செய விரும்பு இத்தொடரில் காணப்படும் சார்பெழுத்துகளின் எண்ணிக்கை?

அ. ஆறு

ஆ. ஐந்து

இ. எட்டு

ஈ. ஏழு

4. பழங்காலத்தில் ஒரு செய்யுளை இயற்றுவதற்கு முன் இறைவனை வாழ்த்தி நூல்களை இயற்றினார். அவ்வகையில், இயற்கையை வாழ்த்தி எழுதப்பட்ட காப்பிய நூல் எது?

அ. கம்பராமாயணம்

ஆ. சிலப்பதிகாரம்

இ. மணிமேகலை

ஈ. பெரியபுராணம்

5. பறவைகள், உணவு, இருப்பிடம், தட்பவெப்பநிலை மாற்றம், இனப்பெருக்கம் போன்ற காரணங்களால் ஓர் இடத்தை விட்டு இடம் பெயர்கின்றன.

கீழ்க்கண்ட எந்தக் காரணத்தை அடிப்படையாகக் கொண்டு பறவைகள் இடம் பெயர்வதில்லை?

அ. நிலவு

ஆ. விண்மீன்

இ. புவியிர்ப்புப் புலம்

ஈ. மழைப் பொழிவு

English

WOODCUTTER AND THE TIGER

A woodcutter saw a tiger trapped in a cage. The tiger pleaded with the woodcutter to release him. The woodcutter pitied the tiger and let him out. Now looking at the woodcutter the tiger said that he was hungry and wanted to eat him. The woodcutter shouted at the tiger to stop his attack, instead wanted to ask someone for justice as it was not fair to eat the person who helped him.

A rabbit passed that way hopping to his joy. The woodcutter stopped him and narrated the whole incident. The rabbit feared that the tiger would eat him if he supported the woodcutter and said the tiger was right. The tiger was ready to eat the woodcutter, but the woodcutter wanted to ask the deer who passed by. The deer too thought the same as the rabbit and said, the tiger was right.

As the tiger was ready to eat the woodcutter, there came a jackal. The woodcutter asked him for justice and repeated the incident. The jackal said that he couldn't understand the incident. The impatient tiger went into the cage and closed the door and bolted the cage to explain the situation. Now the woodcutter without realising the situation complained to the jackal. The jackal said how can the poor tiger eat you when he is in the cage. The woodcutter realised the situation and decided never to release him again. The woodcutter learnt to help the person who is really worthy of it.

Questions.

- 1. Why did the woodcutter release the tiger?**
 - a. Because he felt pity.
 - b. Because he was hungry.
 - c. Because the tiger pleaded.
 - d. Because he was in the cage
- 2. Why did the rabbit and the deer lie?**
 - a. They wanted to save their lives.
 - b. They wanted to support the animals.
 - c. The woodcutter did not support the animals.
 - d. They helped the tiger to avenge the woodcutter.
- 3. What was the smart word used by the jackal to make the tiger go back to the cage?**
 - a. Impatience.
 - b. Bolted the door.
 - c. Can't understand
 - d. Made the woodcutter realise
- 4. What was the lesson learnt by the woodcutter through this incident?**
 - a. Never help an animal
 - b. Help others regardless.
 - c. Help the person really in need.
 - d. Help the person who is worthy.
- 5. Why did the woodcutter narrate the incident to all and not the tiger?**
 - a. The tiger was Dumb.
 - b. The woodcutter could talk.
 - c. The woodcutter wanted justice.
 - d. The woodcutter was impatient.

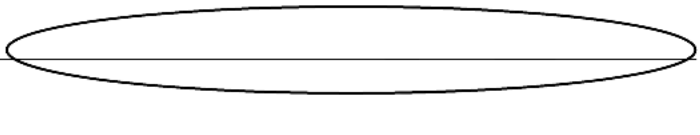
MATHS

- The number of Corona cases reported in our country till today is 44,995,055. If the number of people recovered is 44,461,664, then determine how many people have died.
a. 534391 b. 534611 c. 533391 d. 534491
- “Globally, as of 8:20 am, 19 July 2023, there have been 768237788 confirmed cases of COVID-19”.*

Which of the following represents the number of COVID-19 cases globally in words by international method?

- Seven Thousand Six Hundred Eighty Two Million Thirty Seven Thousand Seven Hundred Eighty Eight
- Seven Hundred Sixty Eight Million Two Hundred Thirty Seven Thousand Seven Hundred Eighty Eight
- Seventy Six Crores Eight Hundred Twenty Three Lakhs Seventy Seven Thousand Eighty Eight
- Seventy Six Crores Eighty Two Lakhs Thirty Seven Thousand Seven Hundred Eighty Eight.

- The following is a sample format for a Cheque leaf. Mrs. Asha asked for help from her son to write the amount of ₹ 60,87,050 in words in the circled space.

			Date:	
PAY		Mr. M. Ganesh		
		OR BEARER		
RUPEES			₹	60,87,050
A/c No.				
ABC Bank of India		IFSC code: SBIN00018121	For Mrs. Amrutha	
XYZ Nagar, Chennai - 600089				

Which of the following number name will be written by Asha’s son in the circled space?

- Six Lakhs Eight Thousand Seven Hundred Fifty
 - Six Lakhs Eighty Seven Thousand Fifty
 - Sixty Lakhs Eight Thousand Seven Hundred Fifty
 - Sixty Lakhs Eighty Seven Thousand Fifty
- As per WHO, the total number of COVID –19 cases reported until the second week of July 2023 was 76,80,00,426. The newly reported cases during the third week of July 2023 were 2,37,666. Find the total number of reported cases until the third week of July 2023.
a. 76,82,48,092 b. 76,82,48,002 c. 76,82,38,092 d. 76,82,38,002

5. Analyse the following data of number of mobile phone users in 5 different countries:

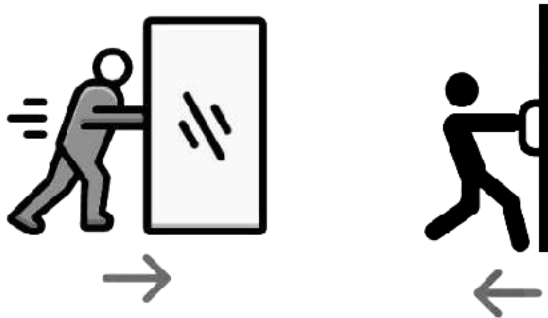
Name of the country	Number of mobile phone users
Tanzania	56,313,438
South Africa	59,474,500
Argentina	56,725,200
Colombia	57,900,472
Ukraine	57,505,555

Which of the following represents the ascending order of arrangement of countries with respect to the number of mobile phone users?

- a. Tanzania, Ukraine, Argentina, Colombia, South Africa
- b. Tanzania, Argentina, Ukraine, Colombia, South Africa
- c. South Africa, Colombia, Ukraine, Argentina, Tanzania
- d. South Africa, Ukraine, Colombia, Argentina, Tanzania

SCIENCE

1. What is necessary to carry out the following actions?



- a. Mass
 - b. Gravity
 - c. Weight
 - d. Force
2. When objects are in motion and remains at the same distance from a fixed point, it is described as _____ .
- a. Rotatory motion
 - b. Circular motion
 - c. Irregular motion
 - c. Oscillatory motion
3. Which force causes the earth to rotate around the sun without deviating its orbit?
- a. Magnetic force
 - b. Frictional force
 - c. Gravitational force
 - d. Electrical force

4. Which of the following animals receives water from the seeds it eats without ever drinking water?

1



2



3



4



5. Find out who I am with my physical adaptation given below.

1. I belong to the species of reptiles with a scaly skin structure.
2. I breathe only through the lungs.
3. Sometimes I can rotate the head completely through the head attachment.
4. The elongated parts of my tongue are used to pull and hold the prey.

a) Frog b) Lizard c) Fish d) Snail

Social Science

1. Imagine you got into a time machine and went to the jungles of Africa 30 million years ago. Now which of the following ancient people will you see?

- | | |
|-----------------|---------------------|
| a. Neanderthal | b. Homo erectus |
| c. Homo habilis | d. Australopithecus |

2. Which of the following statements helped prehistoric humans become farmers?

- a. Seeds that fall in the river beds sprout easily.
 - b. Plants grow faster in water-fed areas.
 - c. Crop production by supplying nutrients to crops multiply.
 - d. A plant that germinates from a single seed and yields lots of fruits and vegetables.
- | | |
|------------------|---------------|
| a. A, B, C and E | b. A, B and C |
| c. A, B and E | d. A and E |

3. **Assertion: Dravidians, Negritos, Aryans, Alpines and the Mongols are part of the modern Indian race. There are.**

Reason: Inspired by the various resources found in India from different regions, different ethnic groups came.

- a. The assertion is right, but the reason is wrong.
- b. The assertion is wrong, and the reason is wrong.
- c. The assertion is wrong, and the reason is right.
- d. The assertion is correct and the reason is correct.

4. **Look closely at the picture below and find the appropriate answer to the given question.**



A flight that took off from Chennai landed in London and then reached New York. On which continents did the plane stop?

- a. Asia, Africa and North America.
- b. Asia, Europe and North America.
- c. Asia, Australia and South America.
- d. Europe, Africa and Antarctica.

5. **Assertion: Mining is an important industry in Chota Nagpur Plateau.**

Reason: Chota Nagpuri plateau is made up of volcanic rocks.

- a. The assertion is right, but the reason is wrong.
- b. The assertion is wrong, the reason is wrong.
- c. The assertion is wrong, and the reason is right.
- d. The assertion is correct and the reason for the assertion is correct.

Learning Outcome / Competency Based Test (Answer Key)

Class : 6

Medium : English

Subject : Tamil

Q.No	Option	Answer
1.	அ.	ஆய்தம்
2.	இ.	கூற்றும் காரணமும் சரி.
3.	ஈ.	ஏழு
4.	ஆ.	சிலப்பதிகாரம்
5.	ஈ.	மழைப் பொழிவு


Subject : English

Q.No	Option	Answer
1.	a.	Because he felt pity.
2.	a.	They wanted to save their lives.
3.	c.	Can't understand
4.	d.	Help the person who is worthy.
5.	c.	The woodcutter wanted justice.

Subject : Maths

Q.No	Option	Answer
1.	c.	533391
2.	b.	Seven Hundred Sixty Eight Million Two Hundred Thirty Seven Thousand Seven Hundred and Eighty Eight
3.	d.	Sixty Lakhs Eighty Seven Thousand and Fifty
4.	c.	76,82,38,092
5.	b.	Tanzania, Argentina, Ukraine, Colombia, South Africa

Subject: Science

Q.No	Option	Answer
1.	d.	Force
2.	b.	Circular motion
3.	c.	Gravitational force
4.	4.	
5.	b.	Lizard

Subject : Social science

Q.No	Option	Answer
1.	d.	Australopithecus
2.	a.	A, B, C and E
3.	d.	The assertion is correct and the reason is correct.
4.	b.	Asia, Europe and North America.
5.	a.	The assertion is right, but the reason is wrong.