

3-Std]

FIRST TERM EXAM - 2019

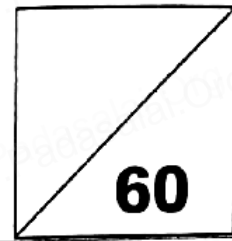
(Summative Assessment)

Section :

MATHEMATICS

Name :

Total Marks : 60
Time : 2.00 hrs



I. Choose the correct answer :-

5 x 1 = 5

1. square has diagonals. 1. _____
 a) 3 b) 2 c) 4
2. Circle has no 2. _____
 a) sides b) diameter c) centre
3. The biggest four digit number 3. _____
 a) 9999 b) 1000 c) 1001
4. 100 cm = 4. _____
 a) 1 km b) 1 m c) 10 m
5. 1 year = 5. _____
 a) 7 days b) 30 days c) 365 days

II. Fill in the blanks :-

5 x 1 = 5

1. In rectangle, opposite sides are 1. _____
2. A sphere is a solid shape made of 2. _____
3. 75 _____ 15 = 60 Put the correct symbol. 3. _____
4. The third day of the week is 4. _____
5. Draw Growing patterns. 5. _____


III. Write True or False :-

5 x 1 = 5

1. Triangle has three corners. 1. _____
2. 56 - 21 = 35. 2. _____
3.  3. _____
4. A week has 8 days. 4. _____
5. A leap year has 366 days. 5. _____

IV. Match the following :-

5 x 1 = 5

- | | | |
|--|------------------------|----------|
| 1.  | - 1 minute | 1. _____ |
| 2. Smallest two digit number | - 480 bigger number | 2. _____ |
| 3. 437 | - Equilateral triangle | 3. _____ |
| 4. 480 > 408 | - 3 tens | 4. _____ |
| 5. 60 seconds | - 10 | 5. _____ |

V. Answer it :-



10 x 2 = 20

1. Write in ascending order.
 i) 454, 231, 705, 321 _____, _____, _____, _____
 ii) 407, 502, 125, 635 _____, _____, _____, _____
2. Put the symbol.
 i) 599 1099 ii) 741 205
3. Circle odd one.
 640, 751, 845, 632, 741
4. Add it.
 1)
$$\begin{array}{r} 4755 \\ 3876 \\ (+) 5954 \\ \hline \end{array}$$
 2)
$$\begin{array}{r} 430 \\ 595 \\ (+) 231 \\ \hline \end{array}$$

1)
$$\begin{array}{r} 765 \\ - 438 \\ \hline \end{array}$$

2)
$$\begin{array}{r} 805 \\ - 246 \\ \hline \end{array}$$

6. Draw the hand of the clock.



7. Write the number name.

- i) 950 _____
- ii) 745 _____

8. Write in expanded form.

- i) 859 _____
- ii) 407 _____

9. In 5, 7, 4 Write biggest and smallest number.

Biggest number: _____ Smallest number: _____

10. List any four Measurements.

VI. Find the answer :-

$4 \times 5 = 20$

1. Amuthan saved rupees 125 on the first day and rupees 200 in the second day. Find the total amount saved by him in two days.

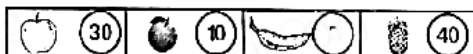
2. Estimate the sum to the nearest ten and also find actual sum.

Problems	Estimated Answer	Actual
33		
+35		

3. Fill it.

- 1. Teachers day is on _____
- 2. Independence day is on _____
- 3. Republic day is on _____
- 4. Children day is on _____

4. Look at the picture and write the answer.



- 1. Name the fruit which was sold more. _____
- 2. Name the fruit which is sold less. _____
- 3. Find the number of apples sold. _____
- 4. Write the number of bananas sold. _____
- 5. What is the difference in the number of pineapples sold and oranges sold _____