



Name : _____

Marks :60

Section : _____

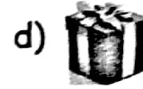
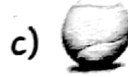
Duration : 2 Hours

Sub-division (i) & (ii) carry 3 marks each


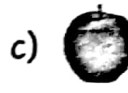
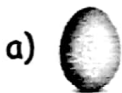
I. Answer the following.

10x6=60


1. i) Tick (✓) the object that can roll.



ii) Tick (✓) the object that can slide.



2. i) Count and write.



ii) Count and write.



3. i) How many tens are there in 95?

a) 5

b) 7

c) 8

d) 9

ii) 78 can also be written as

a) 7 + 8

b) 8 + 7

c) 70 + 8

d) 80 + 7

4. i) Count forward in 3s and write.

45	48	51	54						
----	----	----	----	--	--	--	--	--	--

ii) Count backward in 2s and write.

7	5	3	1						
---	---	---	---	--	--	--	--	--	--

5. i) Complete the addition fact.

$$12 + \square = 18$$

ii) Geetha has 9 mangoes. Sudha has 8 mangoes. How many mangoes do they both have in total?

a) 14

b) 15

c) 16

d) 17

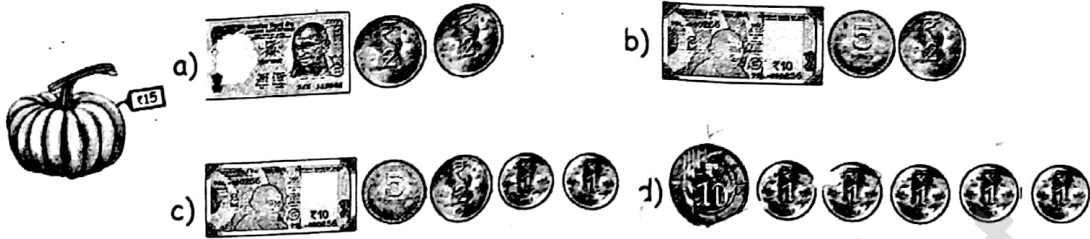
6. Complete the subtraction statements.

(i) $19 - 7 = \square$

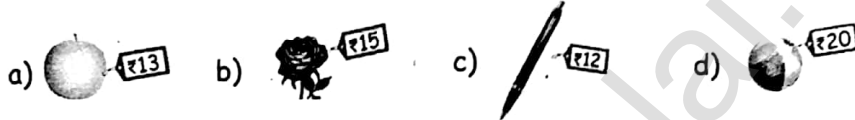
(ii) $15 - \square = 6$

☒

7. i) What will you get if you subtract 5 from 11?
 a) 6 b) 7 c) 8 d) 9
- ii) Which number has to be subtracted from 16 to get 7?
 a) 7 b) 8 c) 9 d) 23
8. i) Choose the money value required to buy the given object.



- ii) Which object can be bought with the given currency?



9. Choose the time interval represented by the picture



- a) Morning
 b) Afternoon
 c) Evening
 d) Night

- ii) Choose the activity that you do in the evening.



10. i) Tick (✓) the tail of the given animal.



- ii) Tick (✓) the picture cards arranged correctly.

