

## தொகுத்தறி மதிப்பீடு - பருவம் - 3

தமிழ் - 2023 - 24

வகுப்பு - 1

பெயர்: J சிவிகா  
பிரிவு: அ

★★

60  
60


மதிப்பெண்: 60

காலம்: 2 மணி


படத்திற்கு உரிய முதல் எழுத்தை எடுத்து எழுதுக.

3 × 2 = 6

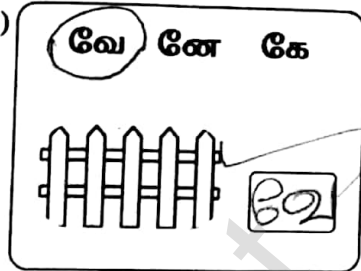
அ)



ஆ)

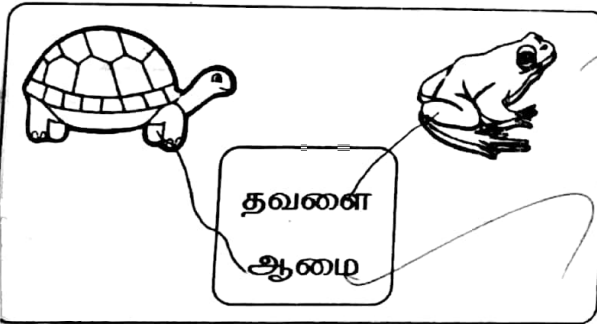


இ)

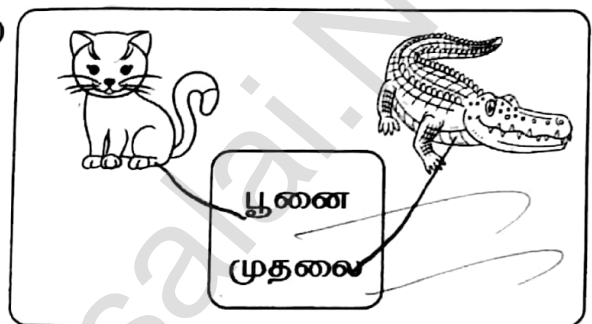


படத்திற்கு உரிய சொல்லை இணைக்க.

2 × 3 = 6




ஆ)




பாருத்தமான ஒரே எழுத்தை நிரப்பி சொற்களை உருவாக்குக.

2 × 3 = 6

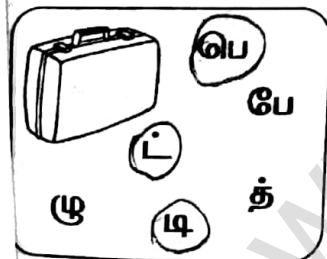


ஆ)




முத்துகளைக் கொண்டு படத்திற்கு உரிய சொல்லை எழுதுக.

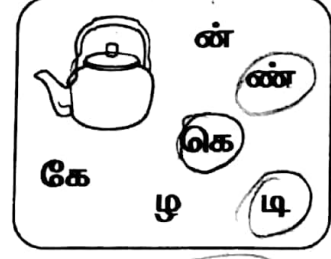
3 × 2 = 6



ஆ)

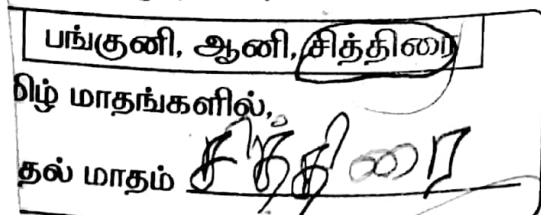


இ)


பெட்டிவெல்லம்பெண்ணி

ந்தெடுத்து நிரப்புக.

2 × 3 = 6





ஆ)




6. படத்திற்கு உரிய சொல்லிற்கு ✓ குறியிடுக.

3 × 2 = 6

அ)  மேசை   
மேசைகள்

ஆ)  மான்   
மாண்கள்

இ)  குடை   
குடைகள்

7. சொல்லையும் படத்தையும் இணைத்து எழுதுக.

2 × 3 = 6

அ) கடல் 


கடல் கிரை

ஆ) நீர் 


நீர் யானை

8. படத்தோடு தொடர்புடைய சொல்லிற்கு ✓ குறியிடுக.

3 × 2 = 6

அ)  (பழம் / குளம்)

ஆ)  (மரம் / வானம்)

இ)  (காடு / வீடு)




9. அடுத்து வரும் கிழமைப் பெயரை எழுதுக.




3 × 2 = 6

அ) புதன், வியாழன் ஆ) ஞாயிறு, திங்கட்கள் இ) வெள்ளி, சனி

10. நான்கு சக்கர வாகனத்திற்கு மட்டும் ✓ குறியிடுக.

2 × 3 = 6

அ)     

ஆ)     

SUMMATIVE ASSESSMENT - TERM 3

ENGLISH - 2023-2024

CLASS 1

NAME :

TIME : 2 hours

SECTION :

MARKS : 60


1. Listen and tick (✓) the correct picture for the sentence.

3 x 2 = 6

a. Aruna combs her hair.



b. Raja flies a kite.




c. They dance well.



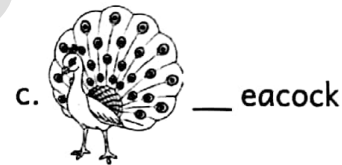
2. Circle the correct word for the picture.

3 x 2 = 6



3. Write the first letter of the picture.

3 x 2 = 6



4. Circle and write the odd one.

3 x 2 = 6



a. star Sun daisy moon \_\_\_\_\_

b. lily lotus jasmine pigeon \_\_\_\_\_

c. owl cloud eagle parrot \_\_\_\_\_


5. Tick (✓) the correct picture for the word.


3 x 2 = 6



6. Tick (✓) the correct sentence for the picture.

a.   This is a mat.  
 This is a hat.

b.   I can see a net.  
 I can see a bed.

c.   It is a ship.  
 It is a fish.

7. Choose and write the correct word for the picture.

3 x 2 = 6

a.   
 sing / read

b.   
 run / dance

c.   
 walk / sing

8. Choose and write the word that comes next.


3 x 2 = 6

- a. chick    chin    chop \_\_\_\_\_ (chip / sing)  
 b. king    sing    wing \_\_\_\_\_ (tooth / ring)  
 c. three    thumb    think \_\_\_\_\_ (photo / thank)


9. Choose and write the correct answer.

3 x 2 = 6


in    on    under



a. The clock is \_\_\_\_\_ the wall.



c. The doll is \_\_\_\_\_ the box.



b. The cat is \_\_\_\_\_ the cot.

10. Choose and write the correct answer.

3 x 2 = 6

- a. The stars shine at \_\_\_\_\_. (day / night)  
 b. We go to school in the \_\_\_\_\_. (day / night)  
 c. We have our dinner at \_\_\_\_\_. (day / night)





Name : \_\_\_\_\_

Marks :60

Section : \_\_\_\_\_


Duration : 2 Hours

Sub-division (i) &amp; (ii) carry 3 marks each


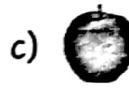
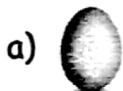
I. Answer the following.

10x6=60


1. i) Tick (✓) the object that can roll.



ii) Tick (✓) the object that can slide.



2. i) Count and write.



ii) Count and write.



3. i) How many tens are there in 95?

a) 5

b) 7

c) 8

d) 9

ii) 78 can also be written as

a) 7 + 8

b) 8 + 7

c) 70 + 8

d) 80 + 7

4. i) Count forward in 3s and write.

45	48	51	54						
----	----	----	----	--	--	--	--	--	--

ii) Count backward in 2s and write.

7	5	3	1						
---	---	---	---	--	--	--	--	--	--

5. i) Complete the addition fact.

$$12 + \square = 18$$

ii) Geetha has 9 mangoes. Sudha has 8 mangoes. How many mangoes do they both have in total?

a) 14

b) 15

c) 16

d) 17

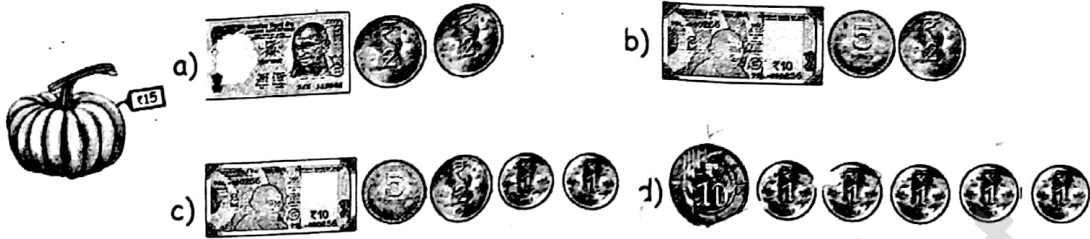
6. Complete the subtraction statements.

(i)  $19 - 7 = \square$

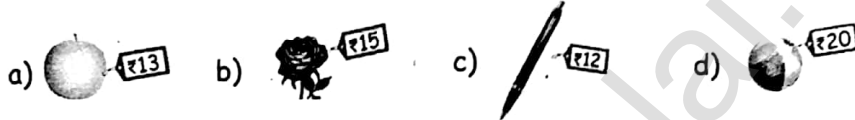
(ii)  $15 - \square = 6$

☒

7. i) What will you get if you subtract 5 from 11?  
 a) 6                      b) 7                      c) 8                      d) 9
- ii) Which number has to be subtracted from 16 to get 7?  
 a) 7                      b) 8                      c) 9                      d) 23
8. i) Choose the money value required to buy the given object.



- ii) Which object can be bought with the given currency?



9. Choose the time interval represented by the picture



- a) Morning  
 b) Afternoon  
 c) Evening  
 d) Night

- ii) Choose the activity that you do in the evening.



10. i) Tick (✓) the tail of the given animal.



- ii) Tick (✓) the picture cards arranged correctly.

