

Summative Assessment – Term 1

Maths – 2024 – 2025

Class 4

Name : _____

Section : _____


Marks : 60

Duration : 2 Hours

In each question, sub-division (I) carries 2 marks and sub-division (II) carries 3 marks.
I. Answer the following questions.

12x5=60

1. (I)



a) 92

b) 72

c) 82

d) 81

(II) In a basket there were 80 apples, 56 pomegranates and 7 bananas. How many fruits were there in the basket altogether ?

a) 123

b) 133

c) 134

d) 143

2. (I) Which pet animal do most people have?

People with pet animals



a) dog

b) cat

c) fish

d) rabbit

(II) How many people have dogs as pets more than cats as pets?

3. (I) Choose the object with no vertices.



(II) Write the names of the 3D objects similar to the given objects.



4. (i) Choose the numbers arranged in descending order.

a) $120 < 140 < 170$

b) $140 > 120 > 170$

c) $170 < 140 < 120$

d) $170 > 140 > 120$

(ii) Arrange in ascending order.

276, 412, 198, 99, 267, 189 _____

5. (i) The expanded form of 526 is _____

a) $5 + 2 + 6$

b) $600 + 20 + 5$

c) $50 + 26$

d) $500 + 20 + 6$

(ii) Fill in the blanks.

The number name of the three digit number with three hundreds and seven ones is _____

6. (i) What should be added to 999 to get 1000?

a) 10

b) 100

c) 111

d) 1

(ii) There were 990 birds in a sanctuary. Out of them if 330 were storks, 312 were swans and the remaining were peacocks, find the number of peacocks in the sanctuary.

7. (i) $5 \text{ m} = \text{_____ cm}$

a) 5

b) 50

c) 500

d) 5000

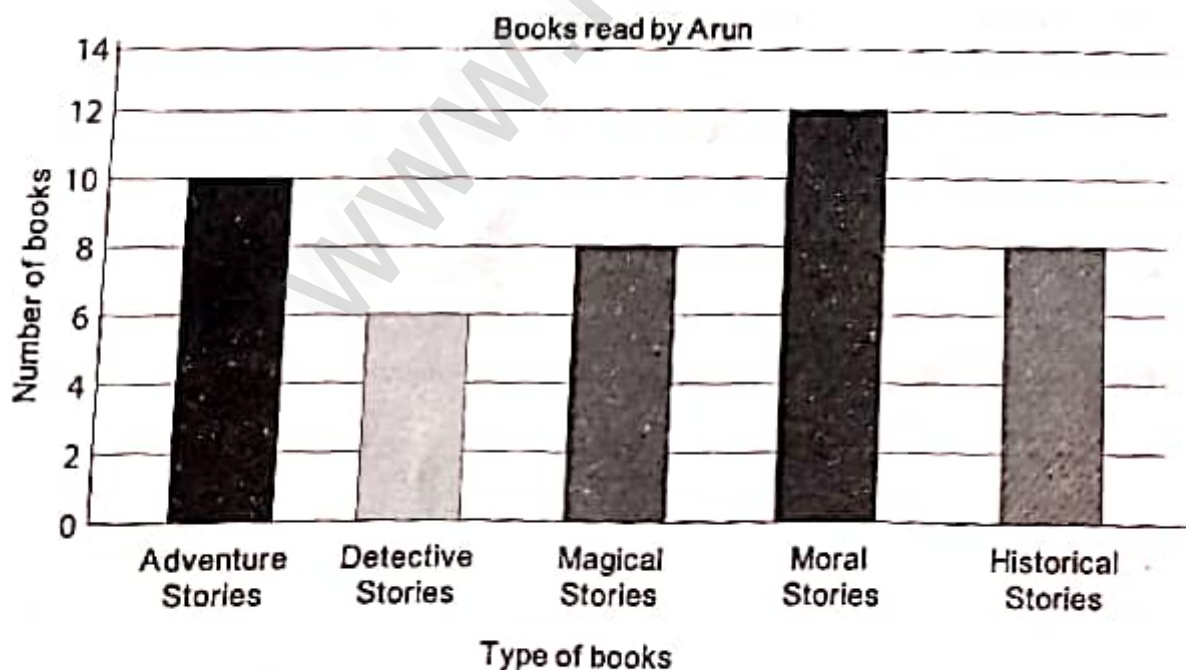
(ii) Match the following.

1) 8 m 45 cm - 854 cm

2) 8 m 54 cm - 8405 cm

3) 84 m 5 cm - 845 cm

8.



iii) If Arun reads 10 more puzzle books in addition to the books mentioned in the bar graph. Calculate the total number of books read by him.

- b) Detective stories
- d) Magical stories


9. (i)

8	13	12
15	11	7
10	9	14


The sum of the magic square is _____

- a) 100
- b) 99
- c) 43
- d) 33

(ii) Form a magic square using the numbers 10 to 18 and find its sum.



sum =



- (i) The distance between which two places is the shortest ?
- a) Kavitha's house and library
 - b) Library and school
 - c) Kavitha's house and bus stop
 - d) School and hospital

(ii) Find the distance that Kavitha covers, if she walks along the path once.

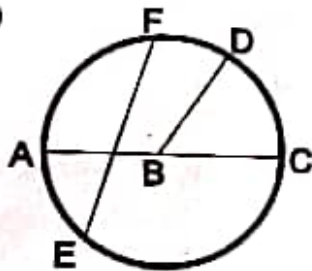
- 11 (i) The 24-hour clock time of 7'o clock in the night is _____ hours.
- a) 07 : 00 hours
 - b) 12 : 35 hours
 - c) 17 : 00 hours
 - d) 19 : 00 hours

(ii) Convert the time given to 12-hour clock time and draw the hands on the clock accordingly.

14 : 00 hours = _____



12 (i)



In the above picture, _____ represents the diameter of the circle.

- a) AC
- b) AB
- c) EF
- d) BD

(ii) Draw a circle of radius 3 cm.