

Summative Assessment - Term 1  
Maths - 2024 - 2025  
Class 1

Name : \_\_\_\_\_

Marks : 60

Section : \_\_\_\_\_


Duration : 2 Hours

In each question, sub-division (i) & (ii) carries 3 marks.


I. Answer the following questions.

10x6=60

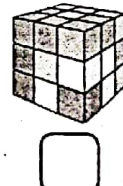
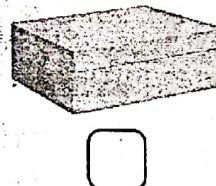

1. (i) Tick (✓) the object which is on the table.




(ii) Tick (✓) the big fruit.



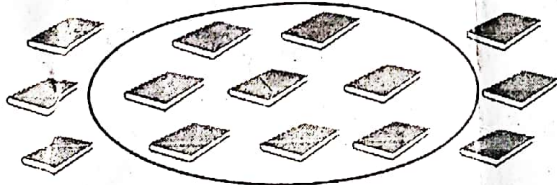
2. (i) Tick (✓) the curved object.



(ii) Tick (✓) the object with edges and corners.



3. (i) Count and write the number of books which are inside the circle.



(ii) Count and write the number of birds.



4. (i) Count and write the number of balls, its before and after number.



Before number   
Number of balls   
After number

(ii) Which number is bigger than the number of flowers?



- a) 6
- b) 7
- c) 8
- d) 9

5. (i) Add.

$$\begin{array}{r} 6 \\ + 2 \\ \hline \end{array}$$

(ii) Add.

$$\begin{array}{r} 5 \\ + 4 \\ \hline \end{array}$$

6. (i) Complete the addition fact.

$$4 + \square = 7$$

(ii) Arun has 5 fruits. Varun has 3 fruits. How many fruits do both of them have ?

- a) 6
- b) 7
- c) 8
- d) 9

7. (i) Subtract.

$$\begin{array}{r} 8 \\ - 5 \\ \hline \end{array}$$

(ii) Subtract.

$$\begin{array}{r} 9 \\ - 4 \\ \hline \end{array}$$


8. (i) Complete the subtraction statement.

$$7 - \square = 5$$


(ii) Amutha has 6 bangles. If she has given 3 of them to her younger sister, how many bangles are left with Amutha?

- a) 1
- b) 2
- c) 3
- d) 4


9. (i) Create patterns by colouring the stars using colours of your choice.



(ii) Create patterns by colouring the apples using colours of your choice.



10. Count and write.



(i) 

	<input type="text"/>
	<input type="text"/>

(ii) 

	<input type="text"/>
	<input type="text"/>