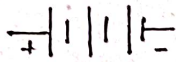

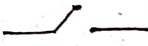





19. **Circle the odd one out.**  
Switch, Bulb, Battery, Generator.
20. **True or false.**  
a) Growing of teeth in an infant is slow change.  
b) Burning of match stick is a reversible change.
21. How do the roots of land plants get oxygen for breathing?
22. Who discovered the cell in 1665?
23. What are the organelles found only in plant cell?
24. **Arrange in a correct sequence.**  
a) Elephant, cow, bacteria, mango, rose plant.  
b) Hen's Egg, Ostrich's egg, Insect's egg.
25. Name the important parts of the eye.
26. Name the five important sense organs.
27. What are the three types of blood vessels?
28. **Match the following.**

S.No.	Symbol	Description
1.		Open key
2.		Battery
3.		Bulb glows
4.		Bult does not glow

29. Name the parts of a computer.
30. What kind of a change is associated with decaying of a plants.
31. Define a slow change.
32. **True or false.**  
a) A cell is the smallest unit of life.      b) Nerve cell is the longest cell.
33. **Fill in the blanks.**  
a) The part of the skeleton that protects the brain is .....  
b) The ..... is the largest sense organ in our body.

#### IV Answer in detail.

3 x 5 = 15

34. a) Distinguish between heat and temperature. **(OR)**  
b) Draw the circuit diagram for series connection.
35. a) What happen when paper is burnt? Explain. **(OR)**  
b) What type of changes is associated with germination of a seed? Explain.
36. a) Draw a heat labelled diagram of a prokaryotic cell. **(OR)**  
b) **Match the following.**
- |              |   |                     |
|--------------|---|---------------------|
| 1. VGA       | - | Input device        |
| 2. Bluetooth | - | Connecting cable    |
| 3. Printer   | - | LDMI                |
| 4. Keyboard  | - | Wireless connection |
| 5. HDMI      | - | Output device       |