

FIRST REVISION TEST - 2025

Standard X

Reg.No.

--	--	--	--	--

SOCIAL SCIENCE

Time : 3.00 hrs

Part - A

Marks : 100

14 x 1 = 14

I. Choose the correct answer:

1. With whom of the following was the Lateran Treaty signed by Italy?
a) Germany b) Russia c) Pope d) Spain
2. What is Blitzcrick? *
a) lightning strike b) Trench warfare
c) Submarine warfare d) Guerrilla warfare
3. What was the name of the Samaj founded by Dayanarda saraswathi?
a) Arya samaj b) Brahmo samaj c) Prarthana samaj d) Adi Brahma samaj
4. When did the vellore Revolt break out?
a) 24 May 1805 b) 10 July 1805 c) 10 July 1806 d) 10 September 1806
5. Who was the first president of the Madras Mahajana sabha?
a) T.M. Nair b) P.Rangaiah c) G. Subramaniam d) G.A.Natesan
6. _____ River is known as "Sorrow of Bihar" ^{Kom}
a) Narmada b) Godavari c) Kasi d) Damodar
7. _____ is the highest gravity dam in India? *
a) Hirakud dam b) Bhakra Nangal dam
c) Mettur dam d) Nagarjuna sagar dam
8. The city which is called as the Manchester of south India is?
a) Chennai b) Salem c) Madurai d) Coimbatore
9. The National Remote Sensing centre (NRSC) is located at _____
a) Bangaluru b) Chennai c) Delhi d) Hyderabad
10. Which crop is called as "Golden Fibre" in a India?
a) Cotton b) Wheat c) Jute d) Tobacco
11. Which one of the following rights was described by Dr. B.R.Ambedkar as the heart and soul of the constitution
a) Right to freedom of religion b) Right to equality
c) Right to constitutional remedies d) Right to property
12. The policy of racial Segregation is? *
a) An international association b) Diplomacy
c) An apartheid policy d) None of the above
13. Where was the first round of GATT held?
a) Tokyo b) Uruguay c) Torquay d) Geneva
Jeniva
14. Pumpsets and motors are produced mostly in
a) Salem b) Coimbatore c) Chennai d) Dharmapuri

Part - B

II. Answer any 10 questions. (Q.No.28 is compulsory)

10 x 2 = 20

15. What were the three militant forms of Nationalism in Europe? 4
16. Describe the pearl Harbour incident? 32
17. Identify the palayams based on the division of east and west? 64
18. Name the Newspapers published by the South Indian liberal Foundation? 118
19. List the factors affecting climate of India? 144

20. Name the types of Soil found in India? 154
21. What is burst of Monsoon? 147
22. What is Communication? 195
23. What are the Cropping seasons of Tamilnadu? 220
24. Write short note: Money bill? 253
25. Mention the member countries of BRICS? 284
26. What is per capita income? 214
27. What is globalization? 303
28. Write short note on cold war? 40

Part - C

III. Answer any 10 questions. (Q.No.42 is compulsory)

10 x 5 = 50

29. Fill in the blanks:-

- i) Boers were also known as Afrikaners
 - ii) Black soils are also called as Regur Soil
 - iii) Sathanur dam is constructed across the river Thenpennai.
 - iv) Supreme Court is the Guardian of the constitution
 - v) Under weight is an Important indicator of nutrition deficiency?
30. Analyse the effects of the world war II? 33
 31. Discuss the Circumstances that led to the Reform movements of 19th century? 53
 32. Distinguish between
 - i) Weather and climate
 - ii) Renewable and Non - renewable resources
 Give reasons:- Mountains are cooler than the plains.
 33. Describe the role of Tamilnadu in the Civil Disobedience Movement? 110
 34. Write about South West Monsoon? 147
 35. What is Multipurpose projects and write about any two Multipurpose projects of India? 159
 36. What is Urbanization? Explain its problem. 189
 37. Point out the Fundamental Rights? 242
 38. What are the Duties and functions of prime Minister of India. 252
 39. What are the Methods of Calculating Gross Domestic product? and Explain its? 294
 40. Write the challenges of Globalization? 309
 41. Draw a time line for the following write any 5 Important events between 1920 to 1940.
 42. Mark the following places on the India Map. 79, 100
 - i) Champaran
 - ii) Vedaranyam
 - iii) Jallianwala bagh
 - iv) Barrack pore
 - v) Jhansi

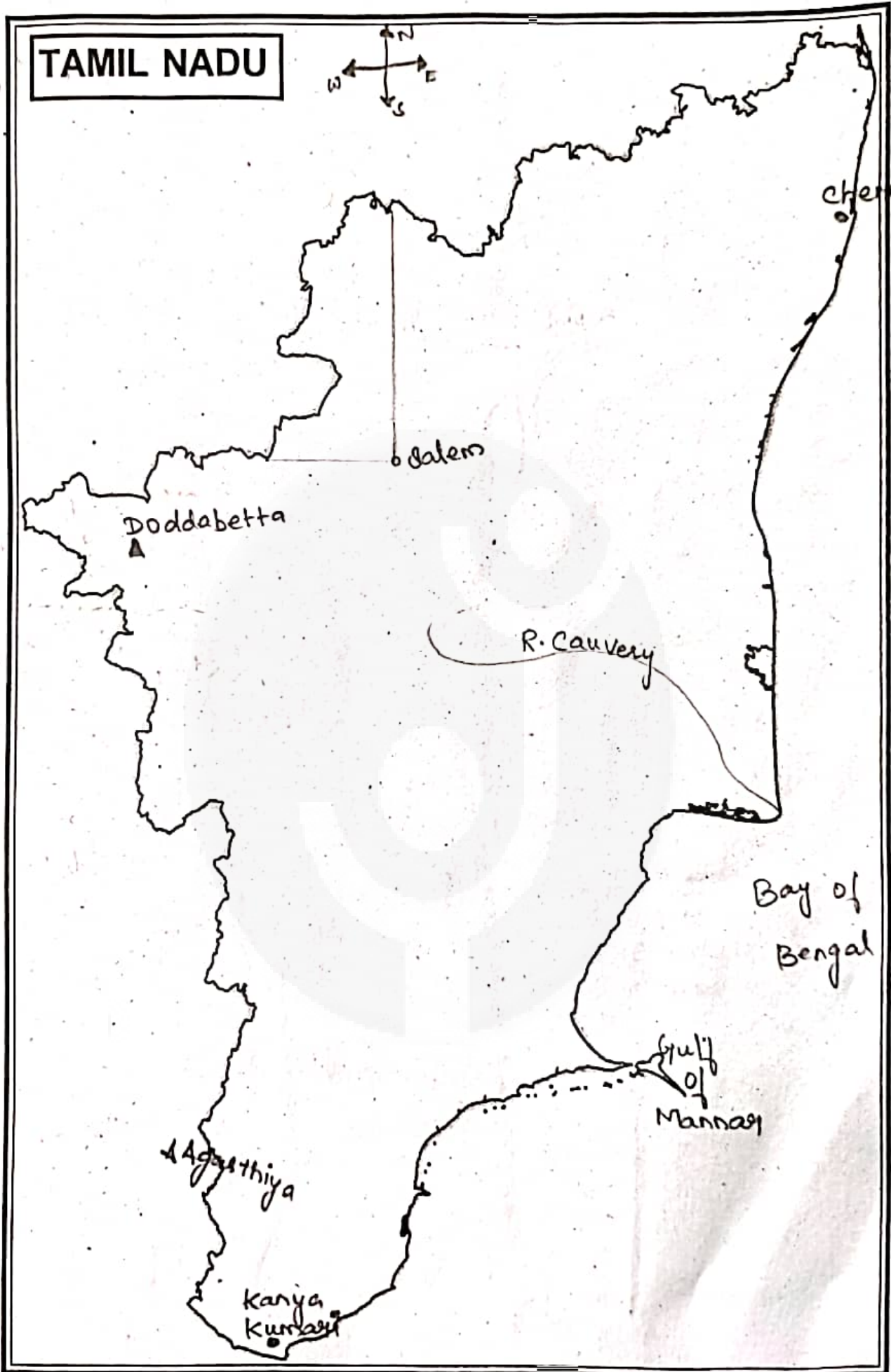
Part - D

IV. Answer the following questions.

2 x 8 = 16

43. a) Attempt an essay of the heroic fight veerapandya kattabomman conducted against the east India company. 60 (OR)
- b) Discuss the causes of the Revolt of 1857? 78
44. a) Mark the following places on the India Map?
 - i) M.t. Everest
 - ii) The Main regions of black soil
 - iii) Palk strait
 - iv) Mumbai High
 - v) Kachchh peninsula
 - vi) Coromandel coast
 - vii) Chennai
 - viii) Chota Nagpur plateau
 (OR)
- b) Mark the following places on the Tamilnadu Map.
 - i) Chennai
 - ii) Doddabetta
 - iii) Kanyakumari
 - iv) Salem
 - v) Cauvery river
 - vi) Gulf of Mannar
 - vii) Agasthiya
 - viii) Bay of Bengal

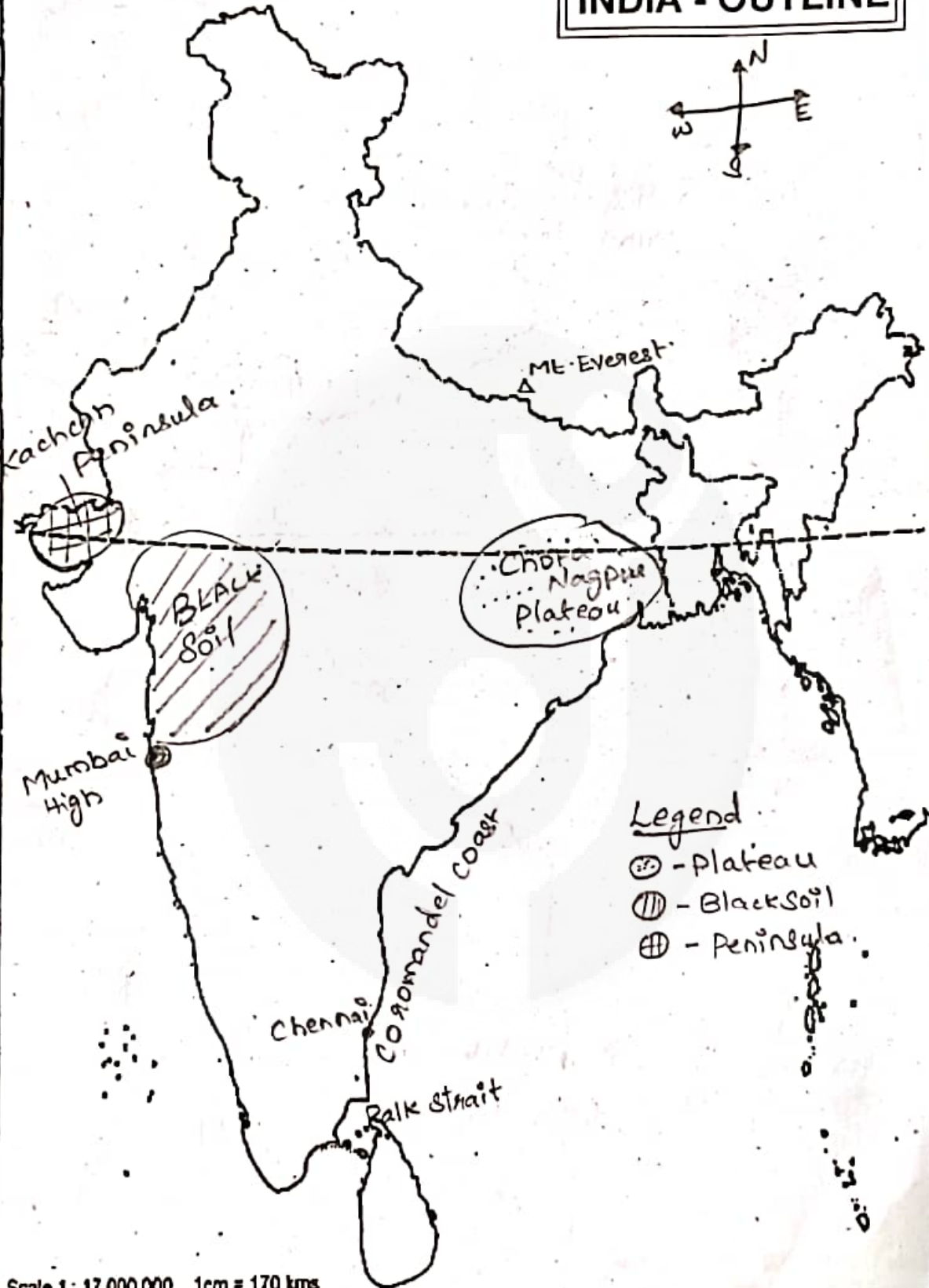
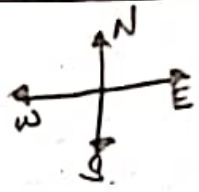
Qnno
44b



Geography

Q3
20
44
(a)

INDIA - OUTLINE

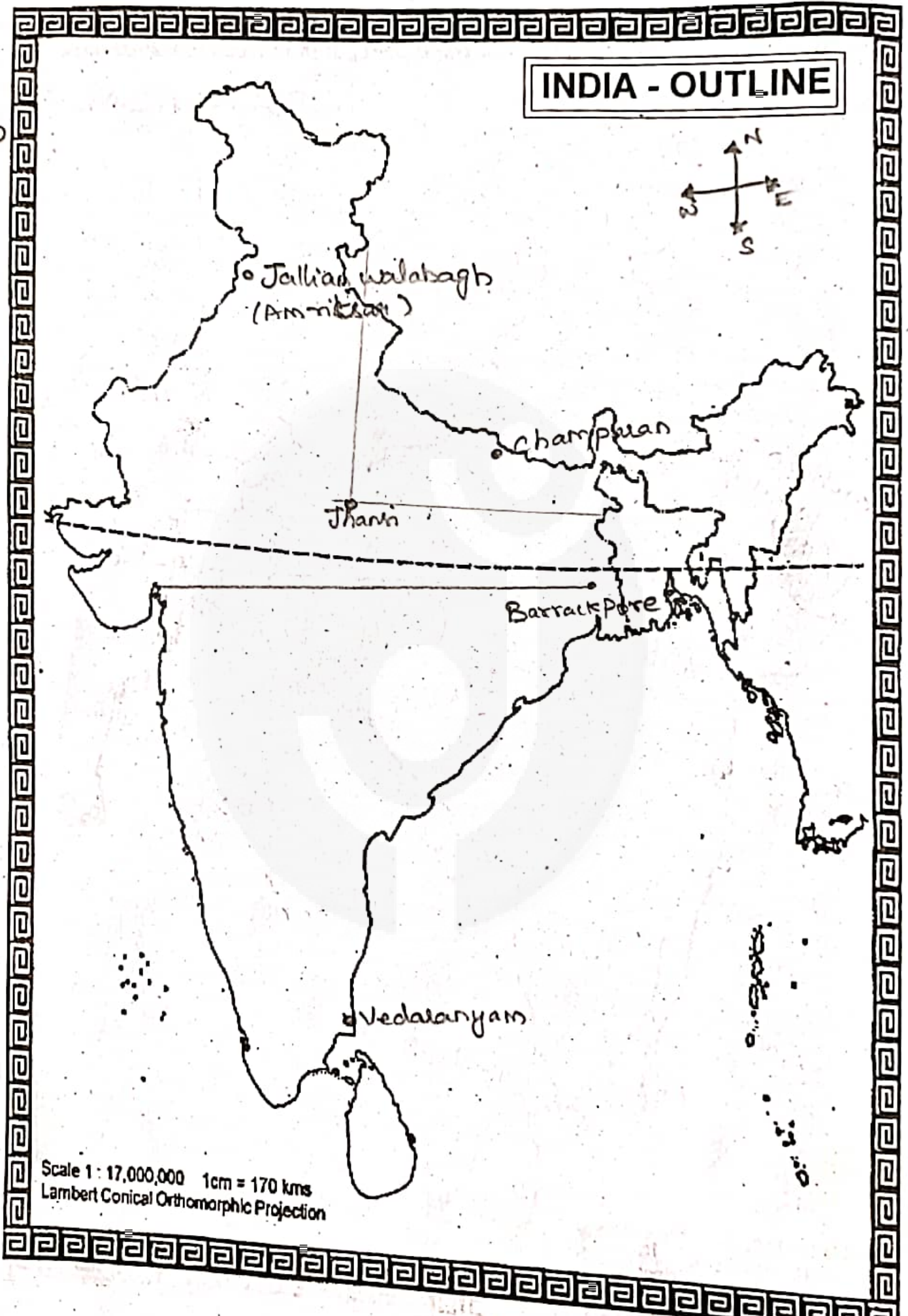


- Legend
- ⊙ - Plateau
 - ▨ - Black Soil
 - ⊞ - Peninsula

Scale 1 : 17,000,000 1cm = 170 kms
 Lambert Conical Orthomorphic Projection

History

11/10
42



Scale 1 : 17,000,000 1cm = 170 kms
Lambert Conical Orthomorphic Projection