



Class
1

SUMMATIVE ASSESSMENT

Term
3

ENVIRONMENTAL STUDIES

Time : 2 hrs

Marks :

60

Name :

Section :



**I. Which material is used to make the given objects?
Enter the correct number in the circle.**

5

(Sand - 1, Wood - 2, Clay - 3, Stone - 4, Metal - 5)













II. Cross (X) out the objects that you should not play with.

3













III. Number the vehicles from one (least) to four (most) based on the number of people they can carry.

4












IV. Find and circle the given words.

3

(LIGHT, STAR, DAY, MOON, NIGHT, SUN)

X	S	T	A	R	V	L
J	D	A	Y	A	K	E
E	K	S	M	O	O	N
S	U	N	N	D	E	R
F	L	N	I	G	H	T
L	I	G	H	T	O	P





V.

Circle the odd one.

3

a.



b.



c.



VI.

Write 'True' or 'False'.

5

1. We can play with sharp objects.
2. Mahabalipuram is well known for its stone sculptures.
3. We wear wool in summer.
4. Go when the green light is on.
5. The Sun gives us heat and light.



VII.

Match the people with their uniform by drawing a line.

4



Fireman

Chef

Policewoman

Students



VIII.

If the action is safe put a (✓) and if the action is Unsafe put a (✗)

4


☐

☐

☐

☐



IX.

Connect the objects to the materials they are made of.

4




Wood



Metal



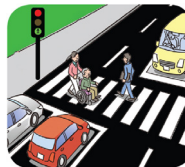
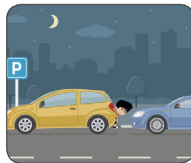
Clay



X.

Tick (✓) the correct actions.

2



XI.


Identify and tick (✓) the odd one.

3



1.



2.



3.



XII.

Tick (✓) the correct one.

5

Ambulance



Ship



Bus



Aeroplane



Bicycle

**XIII. Write "W" for the winter clothes and "S" for the summer clothes.**

5

**XIV. Write the name of the places located in your neighbourhood**

4

(Police Station, School, Bus stand, Market)

**XV. Write your address.**

2

Name : _____

Door Number : _____

Name of the street : _____

Name of the Village / Town / City : _____

**XVI. Oral Evaluation.**

4

1. List out the various uses of cloth.
2. Say any two animals active at night.