

Third Term Examination 20 - 20 Summative Assessment

Subject : MATHS

Student Name:

Class : 2

Marks : 60

School :

Time : 2 Hrs

I. Write the next five even numbers

$5 \times 1 = 5$

8, 10, 12, 14, _____, _____, _____, _____, _____.

II. Write the next five odd numbers

$5 \times 1 = 5$

21, 23, 25, _____, _____, _____, _____, _____.

III. Use repeated addition to find the total

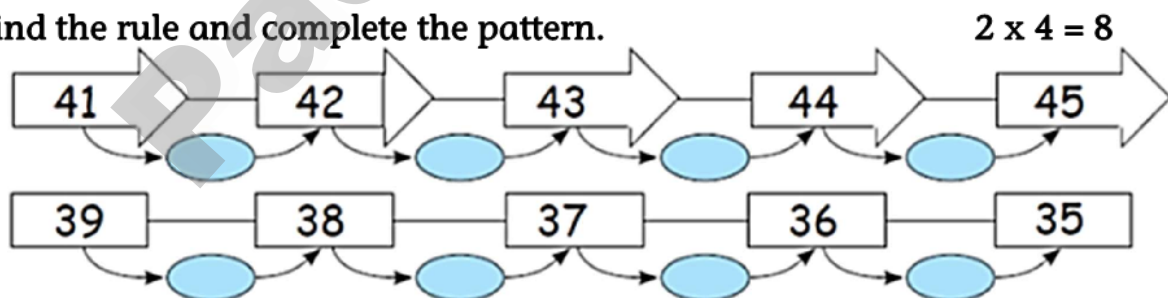
$5 \times 2 = 10$

1. There are 4 bunches. There are 6 bananas in each bunch. How many bananas are there altogether?



2. There are _____ trays. There are _____ eggs in each tray. How many eggs are there altogether?



IV. Find the rule and complete the pattern.**V. Add**

$2 \times 2 = 4$

1)

$$\begin{array}{r} 42 \\ + 56 \\ \hline \end{array}$$

2)

$$\begin{array}{r} 50 \\ + 64 \\ \hline \end{array}$$

VI. Subtract

$2 \times 2 = 4$

1)








$$\begin{array}{r} 98 \\ - 40 \\ \hline \end{array}$$

2)

$$\begin{array}{r} 85 \\ - 45 \\ \hline \end{array}$$

VII. Write the total amount of given currency notes and coins

$2 \times 5 = 10$

S.No	Currency notes and coins	Total	
1	  	T	O
2	   	T	O

VIII. Fill in the blanks with suitable words

$3 \times 2 = 6$

1. Watermelon



is _____ than banana.



(heavier/lighter)

2. Sharpener



is _____ than book.



(heavier/lighter)

3. Pencil box



is _____ than eraser.



(heavier/lighter)

IX. Write the days of the week

$4 \times 2 = 8$

