

Name : 1501015001

Marks : 60

Section : _____

Time : 2 Hours

In all question each sub-division carries 2 marks.

I. Answer all the questions.

10 × 6 = 60

1. Tick (✓) the correct answer.

(i) Which is the rolling object?


☐

☐

☐

☐

(ii) Which is the sliding object?


☐

☐

☐

☐

(iii) Which is the rolling and sliding object?


☐

☐

☐

☐

2. Count and write.

(i)



(ii)



Tens

+

Ones

(iii)



3. Complete the following.

(i) Write the numbers in forward

43	44	45				
----	----	----	--	--	--	--

(ii) Write the numbers in backward

82	81	80				
----	----	----	--	--	--	--

(iii) Write the numbers in forward

93	94	95				
----	----	----	--	--	--	--

4. Write the missing numbers.

(i)

74	76			82		
----	----	--	--	----	--	--

(ii)

33	36			45		
----	----	--	--	----	--	--

(iii)

50	48			42		
----	----	--	--	----	--	--

5. Complete the addition facts.

(i) $8 + 7 = \boxed{}$

(ii) $9 + \boxed{} = 17$

(iii) $\boxed{} + 6 = 19$

6. Subtract the following.

$$\begin{array}{r} (i) \quad 19 \\ - 5 \\ \hline \end{array}$$

$$(ii) \quad 18 - 9 = \boxed{}$$

$$\begin{array}{r} (iii) \quad 12 \\ - 8 \\ \hline \end{array}$$

7. Tick (✓) the correct answer.

(i) What will you get on subtracting 7 from 16?

- a) 9 b) 8 c) 7 d) 6
















(ii) On subtracting which number from 18 you will get 13 as answer?

- a) 4 b) 5 c) 6 d) 7

(iii) On subtracting 9 from which number you will get 5 as answer?

- a) 15 b) 12 c) 13 d) 14

8. Tick (✓) the money required to buy the object.

(i) 	 <input type="checkbox"/>	 <input type="checkbox"/>	 <input type="checkbox"/>	 <input type="checkbox"/>
(ii) 	 <input type="checkbox"/>	 <input type="checkbox"/>	 <input type="checkbox"/>	 <input type="checkbox"/>
(iii) 	 <input type="checkbox"/>	 <input type="checkbox"/>	 <input type="checkbox"/>	 <input type="checkbox"/>

9. Tick (✓) the time interval represented by the picture.



- a) Morning
b) Afternoon
c) Evening
d) Night



- a) Morning
b) Afternoon
c) Evening
d) Night



- a) Morning
b) Afternoon
c) Evening
d) Night

10. Answer the following questions.

(i) Tick (✓) the tail of the animal which is in the circle.



(ii) Tick (✓) the bird which has legs as given in the circle.



(iii) Tick (✓) the legs of the animal which is in the circle.

